

Q. 1 – Q. 5 carry one mark each.

Q.1 “When she fell down the _____, she received many _____ but little help.”

The words that best fill the blanks in the above sentence are

- (A) stairs, stares (B) stairs, stairs
(C) stares, stairs (D) stares, stares

Q.2 “In spite of being warned repeatedly, he failed to correct his _____ behaviour.”

The word that best fills the blank in the above sentence is

- (A) rational (B) reasonable (C) errant (D) good

Q.3 For $0 \leq x \leq 2\pi$, $\sin x$ and $\cos x$ are both decreasing functions in the interval _____.

- (A) $\left(0, \frac{\pi}{2}\right)$ (B) $\left(\frac{\pi}{2}, \pi\right)$ (C) $\left(\pi, \frac{3\pi}{2}\right)$ (D) $\left(\frac{3\pi}{2}, 2\pi\right)$

Q.4 The area of an equilateral triangle is $\sqrt{3}$. What is the perimeter of the triangle?

- (A) 2 (B) 4 (C) 6 (D) 8

Q.5 Arrange the following three-dimensional objects in the descending order of their volumes:

- (i) A cuboid with dimensions 10 cm, 8 cm and 6 cm
(ii) A cube of side 8 cm
(iii) A cylinder with base radius 7 cm and height 7 cm
(iv) A sphere of radius 7 cm

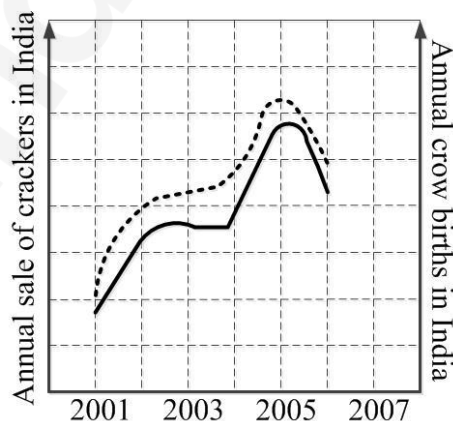
- (A) (i), (ii), (iii), (iv)
(B) (ii), (i), (iv), (iii)
(C) (iii), (ii), (i), (iv)
(D) (iv), (iii), (ii), (i)

Q. 6 – Q. 10 carry two marks each.

Q.6 An automobile travels from city A to city B and returns to city A by the same route. The speed of the vehicle during the onward and return journeys were constant at 60 km/h and 90 km/h, respectively. What is the average speed in km/h for the entire journey?

- (A) 72 (B) 73 (C) 74 (D) 75

- Q.7 A set of 4 parallel lines intersect with another set of 5 parallel lines. How many parallelograms are formed?
- (A) 20 (B) 48 (C) 60 (D) 72
- Q.8 To pass a test, a candidate needs to answer at least 2 out of 3 questions correctly. A total of 6,30,000 candidates appeared for the test. Question A was correctly answered by 3,30,000 candidates. Question B was answered correctly by 2,50,000 candidates. Question C was answered correctly by 2,60,000 candidates. Both questions A and B were answered correctly by 1,00,000 candidates. Both questions B and C were answered correctly by 90,000 candidates. Both questions A and C were answered correctly by 80,000 candidates. If the number of students answering all questions correctly is the same as the number answering none, how many candidates failed to clear the test?
- (A) 30,000 (B) 2,70,000 (C) 3,90,000 (D) 4,20,000
- Q.9 If $x^2 + x - 1 = 0$ what is the value of $x^4 + \frac{1}{x^4}$?
- (A) 1 (B) 5 (C) 7 (D) 9
- Q.10 In a detailed study of annual crow births in India, it was found that there was relatively no growth during the period 2002 to 2004 and a sudden spike from 2004 to 2005. In another unrelated study, it was found that the revenue from cracker sales in India which remained fairly flat from 2002 to 2004, saw a sudden spike in 2005 before declining again in 2006. The solid line in the graph below refers to annual sale of crackers and the dashed line refers to the annual crow births in India. Choose the most appropriate inference from the above data.

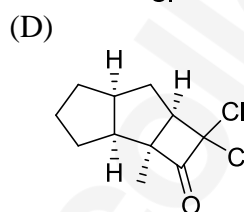
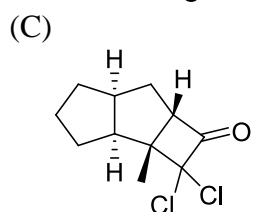
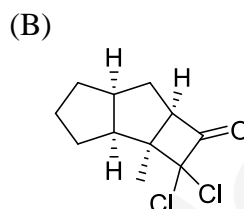
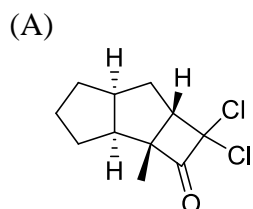
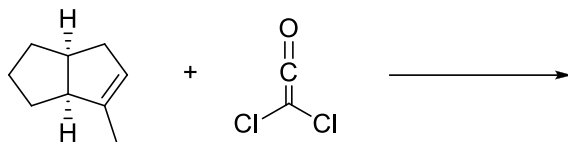


- (A) There is a strong correlation between crow birth and cracker sales.
 (B) Cracker usage increases crow birth rate.
 (C) If cracker sale declines, crow birth will decline.
 (D) Increased birth rate of crows will cause an increase in the sale of crackers.

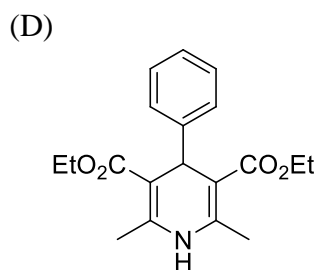
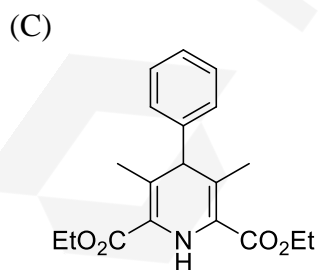
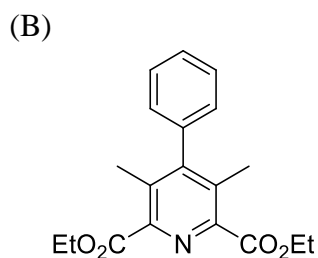
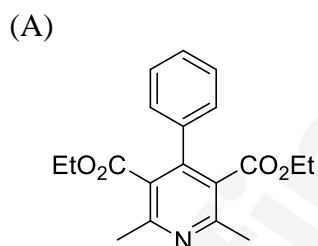
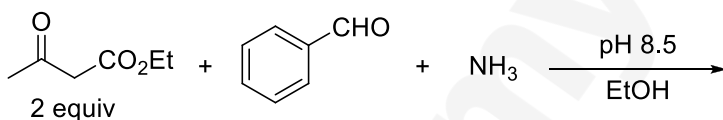
END OF THE QUESTION PAPER

Q. 1 – Q. 25 carry one mark each.

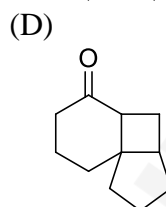
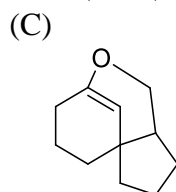
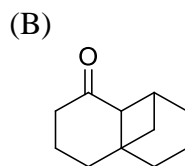
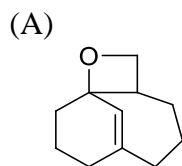
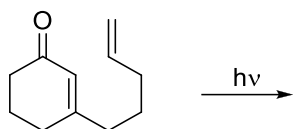
Q.1 The major product formed in the following reaction is



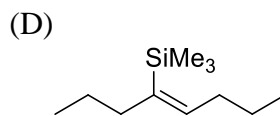
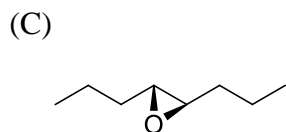
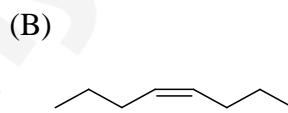
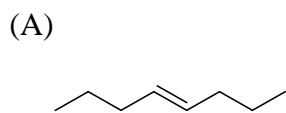
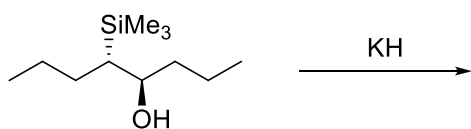
Q.2 The major product formed in the following reaction is



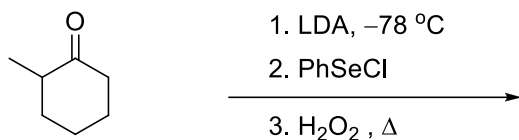
Q.3 The major product of the following intramolecular cycloaddition reaction is



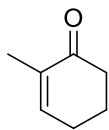
Q.4 The major product of the following reaction is



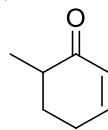
Q.5 The major product formed in the following reaction sequence is



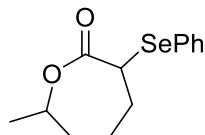
(A)



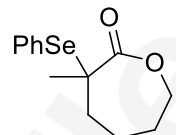
(B)



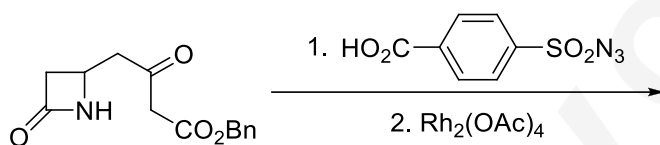
(C)



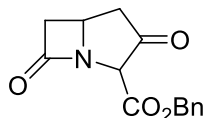
(D)



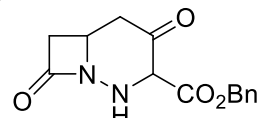
Q.6 The major product formed in the following reaction sequence is



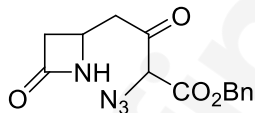
(A)



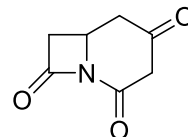
(B)



(C)



(D)



Q.7 The spherical harmonic function, $Y_{l,m}(\theta, \phi)$, with appropriate values of l and m , is an eigenfunction of $\hat{L}_x^2 + \hat{L}_y^2$ operator. The corresponding eigenvalue is

(A) $(l(l+1) - m^2)\hbar^2$

(B) $(l(l+1) + m^2)\hbar^2$

(C) $l(l+1)\hbar^2$

(D) $m^2\hbar^2$

(D) $-\hbar$

Q.9 The temperature derivative of electrochemical cell potential E at constant pressure, $\left(\frac{\partial E}{\partial T}\right)_P$, is given by

(A) $-\frac{\Delta S}{nF}$

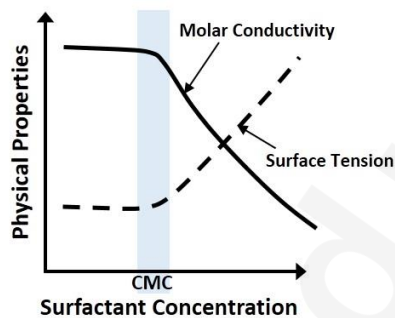
(B) $\frac{\Delta S}{nF}$

(C) $\frac{\Delta S}{nFT}$

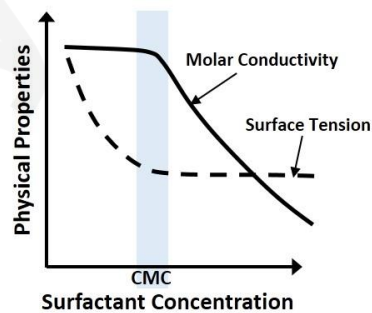
(D) $-\frac{\Delta S}{nFT}$

Q.10 For an ionic micelle-forming surfactant near its critical micelle concentration (CMC), the dependence of molar conductivity and surface tension on surfactant concentration is best represented by

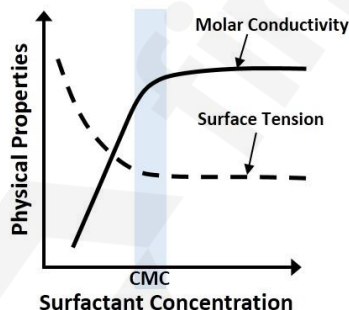
(A)



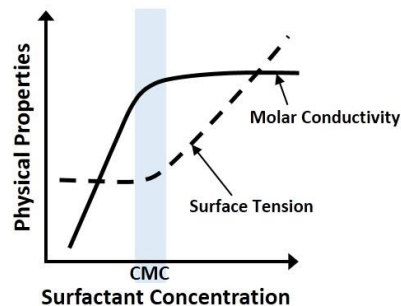
(B)



(C)



(D)



Q.11 According to Eyring transition state theory for a bimolecular reaction, the activated complex has

(A) no vibrational degrees of freedom.

(B) vibrational degrees of freedom but they never participate in product formation.

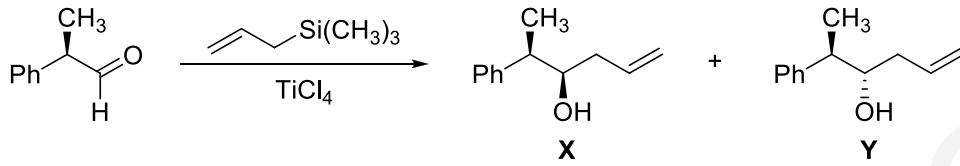
(C) one high frequency vibration that leads to product formation.

(D) one low frequency vibration that leads to product formation.

- Q.19 For low partial pressure of ozone (O_3), the adsorption of ozone on graphite surface is fully dissociative in nature, and follows Langmuir isotherm. Under these conditions, if the dependence of the surface coverage of graphite (θ) on partial pressure of ozone (P_{O_3}) is given by $\theta \propto (P_{O_3})^x$, the value of x is _____. (Up to two decimal places)
- Q.20 For the radioactive isotope ^{131}I , the time required for 50% disintegration is 8 days. The time required for the 99.9% disintegration of 5.5 g of ^{131}I is _____ days. (Up to one decimal place)
- Q.21 Two moles of an ideal gas X and two moles of an ideal gas Y, initially at the same temperature and pressure, are mixed under isothermal-isobaric condition. The entropy change on mixing is _____ J K^{-1} . (Up to one decimal place. Use $R = 8.31 \text{ J K}^{-1} \text{ mol}^{-1}$)
- Q.22 The energy of a hydrogen molecule in its ground state equilibrium configuration is -31.7 eV . Its dissociation energy is _____ eV. (Up to one decimal place)
- Q.23 The total number of valence electrons in $\text{W}(\eta^3\text{-Cp})(\eta^5\text{-Cp})(\text{CO})_2$ is _____. (Atomic number of W = 74)
- Q.24 In the ^1H NMR spectrum of an organic compound recorded on a 300 MHz instrument, a proton resonates as a quartet at $\delta 4.20 \text{ ppm}$. The individual signals of the quartet appear at $\delta 4.17, 4.19, 4.21$ and 4.23 ppm . The coupling constant J in Hz is _____.
- Q.25 In the electron ionization (EI) mass spectra, methyl hexanoate, methyl heptanoate and methyl octanoate give the same base peak. The m/z value of the base peak is _____.

Q. 26 – Q. 55 carry two marks each.

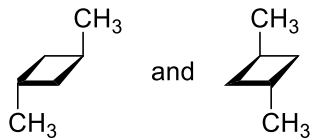
Q.26 In the following reaction,



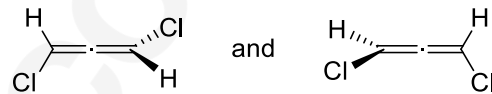
- (A) **X** is the major product and **Y** is the minor product
 (B) **X** is the only product
 (C) **Y** is the only product
 (D) **X** is the minor product and **Y** is the major product

Q.27 The enantiomeric pair, among the following, is

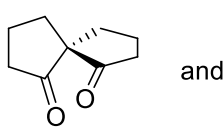
(A)



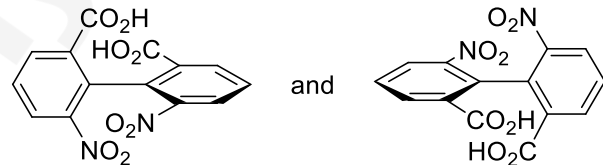
(B)



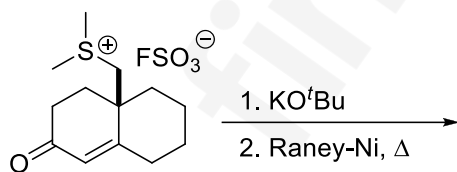
(C)



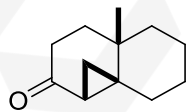
(D)



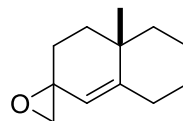
Q.28 The major product formed in the following reaction sequence is



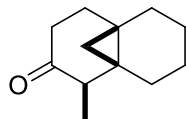
(A)



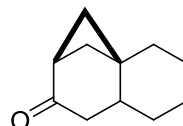
(B)



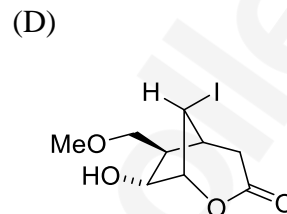
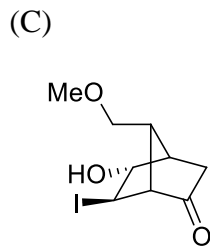
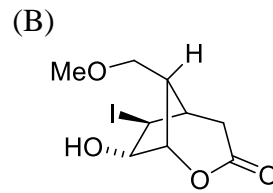
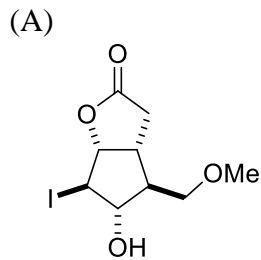
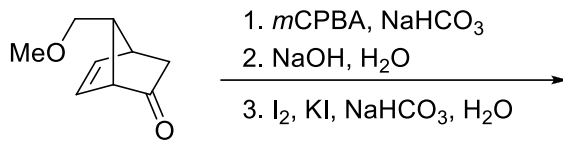
(C)



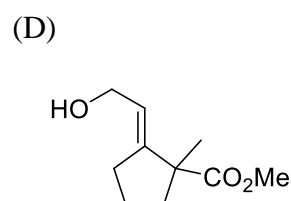
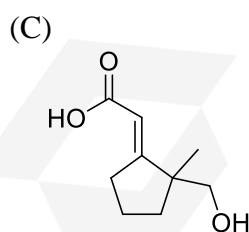
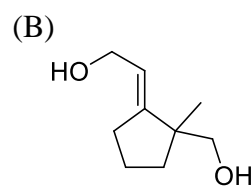
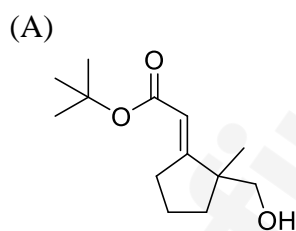
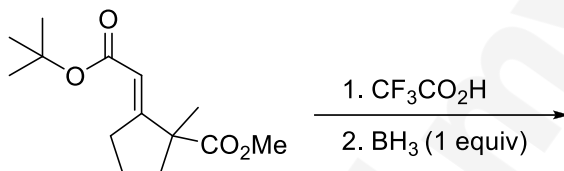
(D)



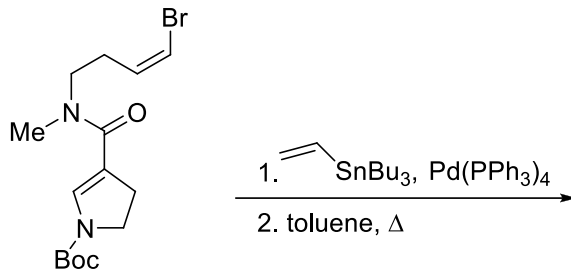
Q.29 The major product in the following reaction sequence is



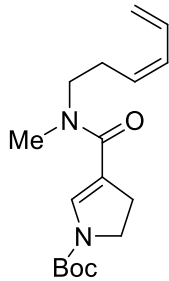
Q.30 The major product formed in the following reaction sequence is



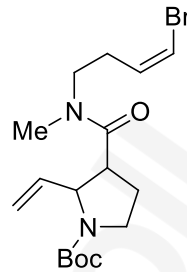
Q.31 The major product of the following reaction sequence is



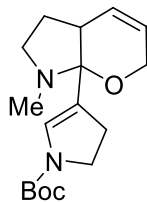
(A)



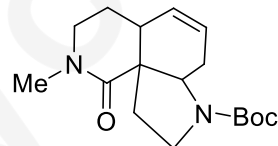
(B)



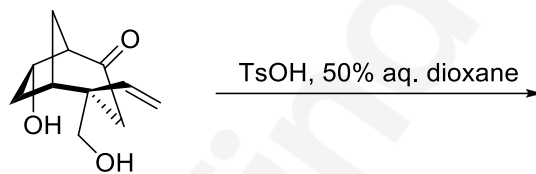
(C)



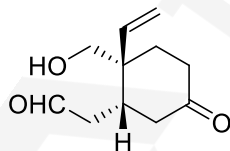
(D)



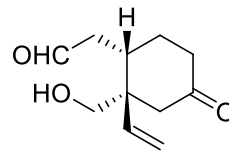
Q.32 The major product formed in the following retro-aldol reaction is



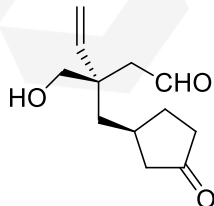
(A)



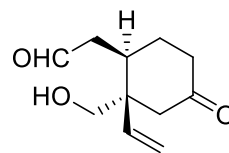
(B)



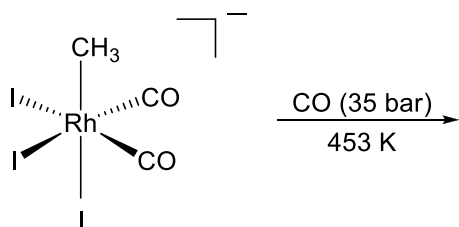
(C)



(D)



Q.33 The elimination product of the following reaction is



- (A) I_2 (B) CH_3I (C) CH_3COI (D) I_3^-

Q.34 A one-dimensional anharmonic oscillator is treated by perturbation theory. The harmonic oscillator is used as the unperturbed system and the perturbation is $\frac{1}{6}\gamma x^3$ (γ is a constant).

Using only the first order correction, the total ground state energy of the anharmonic oscillator is

(Note: For a one-dimensional harmonic oscillator $\psi_0(x) = \left(\frac{\alpha}{\pi}\right)^{1/4} e^{-\alpha x^2}$; $\alpha = \left(\frac{k\mu}{\hbar^2}\right)^{1/2}$)

- (A) $\frac{1}{2}\hbar\left(\frac{k}{\mu}\right)^{1/2}$ (B) $\left(\frac{1}{2} + \frac{\gamma}{6}\right)\hbar\left(\frac{k}{\mu}\right)^{1/2}$
 (C) $\left(\frac{1}{2} + \frac{\gamma}{3}\right)\hbar\left(\frac{k}{\mu}\right)^{1/2}$ (D) $\left(\frac{1}{2} + \frac{\gamma}{12}\right)\hbar\left(\frac{k}{\mu}\right)^{1/2}$

Q.35 The O_2 coordinated to metal ion centres in oxy-myoglobin and oxy-hemocyanin exists, respectively, as

- (A) superoxide and peroxide
 (B) superoxide and superoxide
 (C) peroxide and peroxide
 (D) superoxide and oxygen

Q.36 Spectroscopic ground state term symbols of cobalt ions in $[Co(H_2O)_6]^{2+}$ and $[CoCl_4]^{2-}$, respectively, are

- (A) ${}^2T_{1g}$ and 4A_2 (B) ${}^4T_{1g}$ and 4A_2
 (C) ${}^4T_{2g}$ and 4T_1 (D) 2T_1 and 4A_1

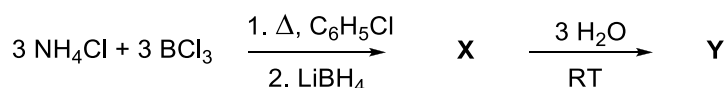
Q.37 Generally, the coordination number and the nature of the electronic absorption band ($f \rightarrow f$ transition) of lanthanide(III) ion in their complexes are, respectively,

- (A) greater than 6 and sharp (B) 6 and broad
 (C) less than 6 and sharp (D) greater than 6 and broad

Q.38 Second-order rate constant for the reaction between $[\text{Co}(\text{NH}_3)_5\text{X}]^{n+}$ ($n = 3$ for $\text{X} = \text{NH}_3$ and H_2O ; $n = 2$ for $\text{X} = \text{Cl}^-$) and $[\text{Cr}(\text{H}_2\text{O})_6]^{2+}$ at room temperature varies with the X as

- (A) $\text{NH}_3 > \text{H}_2\text{O} > \text{Cl}^-$ (B) $\text{Cl}^- > \text{H}_2\text{O} > \text{NH}_3$
 (C) $\text{NH}_3 > \text{Cl}^- > \text{H}_2\text{O}$ (D) $\text{H}_2\text{O} > \text{NH}_3 > \text{Cl}^-$

Q.39 For the following reaction sequence,



X and Y, respectively, are

- (A) $\{\text{HB}(\text{NH})\}_3$ and $\{\text{H}(\text{OH})\text{B}(\text{NH}_2)\}_3$
 (B) $\{\text{HB}(\text{NH})\}_3$ and $\{\text{HB}(\text{NH}_2\text{OH})\}_3$
 (C) $(\text{NH}_4)\{(\text{H})_2(\text{BH}_2)_3\}$ and $\{\text{H}(\text{OH})(\text{NH}_2\text{OH})\}_3$
 (D) $(\text{NH}_4)\{(\text{H})_2(\text{BH}_2)_3\}$ and $\{\text{HB}(\text{NH}_2\text{OH})\}_3$

Q.40 For an inverse spinel, AB_2O_4 , the A and B, respectively, can be

- (A) Ni(II) and Ga(III) (B) Zn(II) and Fe(III)
 (C) Fe(II) and Cr(III) (D) Mn(II) and Mn(III)

Q.41 The reaction of PCl_3 with PhLi in 1:3 molar ratio yields X as one of the products, which on further treatment with CH_3I gives Y. The reaction of Y with $n\text{-BuLi}$ gives product Z. The products X, Y and Z, respectively, are

- (A) $[\text{PPh}_4]\text{Cl}$, $[\text{Ph}_2\text{P}=\text{CH}_2]$ and $\text{Ph}_2\text{P}(n\text{-Bu})$
 (B) PPh_3 , $[\text{Ph}_3\text{PI}](\text{CH}_3)$ and $\text{Ph}_2\text{P}(n\text{-Bu})_3$
 (C) PPh_3 , $[\text{Ph}_3\text{P}(\text{CH}_3)]\text{I}$ and $\text{Ph}_3\text{P}=\text{CH}_2$
 (D) $[\text{PPh}_4]\text{Cl}$, $[\text{Ph}_3\text{P}=\text{CH}_2]$ and $[\text{Ph}_3\text{P}(n\text{-Bu})]\text{Li}$

Q.42 The reaction of equimolar quantities of $\text{Fe}(\text{CO})_5$ and OH^- gives a complex species X which on further reaction with MnO_2 gives species Y. X and Y, respectively, are

- (A) $[\text{Fe}(\text{CO})_5(\text{OH})]^-$ and $\text{Fe}_2(\text{CO})_9$
 (B) $[\text{Fe}(\text{CO})_4]^{2-}$ and $\text{Mn}_2(\text{CO})_{10}$
 (C) $[\text{HFe}(\text{CO})_4]^-$ and Fe_2O_3
 (D) $[\text{HFe}(\text{CO})_4]^-$ and $\text{Fe}_3(\text{CO})_{12}$

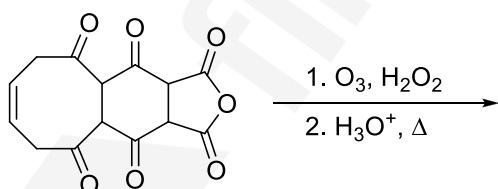
Q.43 The rate constant of a first order reaction, $\text{X} \rightarrow \text{Y}$, is $1.6 \times 10^{-3} \text{ s}^{-1}$ at 300 K. Given that the activation energy of the reaction is 28 kJ mol^{-1} and assuming Arrhenius behavior for the temperature dependence, the total time required to obtain 90% of Y at 350 K is _____ s. (Up to one decimal place. Use $R = 8.31 \text{ J K}^{-1} \text{ mol}^{-1}$)

- Q.49 The absorption maxima of two dyes X and Y are 520 and 460 nm, respectively. The absorbance data of these dyes measured in a 1 cm path length cell are given in the table below.

Dye solution	Absorbance at 460 nm	Absorbance at 520 nm
X (9 mM)	0.144	0.765
Y (12 mM)	0.912	0.168
Mixture of X and Y	0.700	0.680

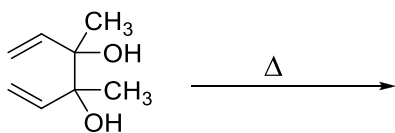
- The concentration of Y in the mixture is _____ mM. (Up to two decimal places)
- Q.50 The π electrons in benzene can be modelled as particles in a ring that follow Pauli's exclusion principle. Given that the radius of benzene is 1.4 Å, the longest wavelength of light that is absorbed during an electronic transition in benzene is _____ nm. (Up to one decimal place. Use $m_e = 9.1 \times 10^{-31}$ kg, $h = 6.6 \times 10^{-34}$ J s, $c = 3.0 \times 10^8$ m s⁻¹)
- Q.51 The spacing between the two adjacent lines of the microwave spectrum of H³⁵Cl is 6.35×10^{11} Hz. Given that the bond length of D³⁵Cl is 5% greater than that of H³⁵Cl, the corresponding spacing for D³⁵Cl is _____ $\times 10^{11}$ Hz. (Up to two decimal places)
- Q.52 For a diatomic vibrating rotor, in vibrational level $\nu = 3$ and rotational level J , the sum of the rotational and vibrational energies is 11493.6 cm⁻¹. Its equilibrium oscillation frequency is 2998.3 cm⁻¹, anharmonicity constant is 0.0124 and rotational constant under rigid rotor approximation is 9.716 cm⁻¹. The value of J is _____. (Up to nearest integer)

- Q.53 Number of carbonyl groups present in the final product of the following reaction sequence is _____.



- Q.54 A tetrapeptide, made up of natural amino acids, has alanine as the N-terminal residue which is coupled to a chiral amino acid. Upon complete hydrolysis, the tetrapeptide gives glycine, alanine, phenylalanine and leucine. The number of possible sequences of the tetrapeptide is _____.

- Q.55 The strongest band observed in the IR spectrum of the final product of the following reaction appears, approximately, at _____ $\times 100 \text{ cm}^{-1}$. (Up to one decimal place)



END OF THE QUESTION PAPER