

National Testing Agency

Question Paper Name :	B TECH EG 18th March 2021 Shift 2
Subject Name :	B TECH EG
Creation Date :	2021-03-18 19:51:25
Duration :	180
Number of Questions :	90
Total Marks :	300
Display Marks:	Yes

B TECH EG

Group Number :	1
Group Id :	86435167
Group Maximum Duration :	0
Group Minimum Duration :	180
Show Attended Group? :	No
Edit Attended Group? :	No
Break time :	0
Group Marks :	300
Is this Group for Examiner? :	No

Physics Section A

Section Id :	864351397
Section Number :	1
Section type :	Online
Mandatory or Optional :	Mandatory
Number of Questions :	20
Number of Questions to be attempted :	20
Section Marks :	80
Mark As Answered Required? :	Yes
Sub-Section Number :	1
Sub-Section Id :	864351397
Question Shuffling Allowed :	Yes

Question Number : 1 Question Id : 8643515941 Question Type : MCQ Option Shuffling : Yes Is Question Mandatory : No Correct Marks : 4 Wrong Marks : 1

Consider a sample of oxygen behaving like an ideal gas. At 300 K, the ratio of root mean square (rms) velocity to the average velocity of gas molecule would be :

(Molecular weight of oxygen is 32 g/mol; $R = 8.3 \text{ J K}^{-1} \text{ mol}^{-1}$)

Options :

$$\sqrt{\frac{3\pi}{8}}$$

86435117821.

$$\sqrt{\frac{8\pi}{3}}$$

86435117822.

$$\sqrt{\frac{8}{3}}$$

86435117823.

$$\sqrt{\frac{3}{3}}$$

86435117824.

Question Number : 1 Question Id : 8643515941 Question Type : MCQ Option Shuffling : Yes Is Question Mandatory : No

Correct Marks : 4 Wrong Marks : 1

ઓક્સિજન નમૂનાને ધ્યાનમાં લો કે જે આદર્શવાયુની જેમ વર્તે છે. 300 K તાપમાને સરેરાશ વર્ગિત વર્ગમૂળ (root mean square) વેગ અને વાયુ અણુની સરેરાશ વેગનો ગુણોત્તર _____ હશે.

(ઓક્સિજન માટે અણુભાર 32 g/mol છે ; $R = 8.3 \text{ J K}^{-1} \text{ mol}^{-1}$)

Options :

$$\sqrt{\frac{3\pi}{8}}$$

86435117821.

$$\sqrt{\frac{8\pi}{3}}$$

86435117822.

$$\sqrt{\frac{8}{3}}$$

86435117823.

86435117824.

$$\sqrt{\frac{3}{3}}$$

Question Number : 2 Question Id : 8643515942 Question Type : MCQ Option Shuffling : Yes Is Question Mandatory : No

Correct Marks : 4 Wrong Marks : 1

An object of mass m_1 collides with another object of mass m_2 , which is at rest. After the collision the objects move with equal speeds in opposite direction. The ratio of the masses $m_2 : m_1$ is :

Options :

86435117825. 1 : 1

86435117826. 1 : 2

86435117827. 2 : 1

86435117828. 3 : 1

Question Number : 2 Question Id : 8643515942 Question Type : MCQ Option Shuffling : Yes Is Question Mandatory : No

Correct Marks : 4 Wrong Marks : 1

એક m_1 દળ ધરાવતો પદાર્થ બીજા m_2 દળ ધરાવતાં પદાર્થ કે જે સ્થિર છે તેની સાથે સંઘાત અનુભવે છે. સંઘાત બાદ બંને પદાર્થો સમાન ઝડપ સાથે વિરુદ્ધ દિશામાં ગતિ કરે છે. દળોનો ગુણોત્તર $m_2 : m_1$ _____ થશે.

Options :

86435117825. 1 : 1

86435117826. 1 : 2

86435117827. 2 : 1

86435117828. 3 : 1

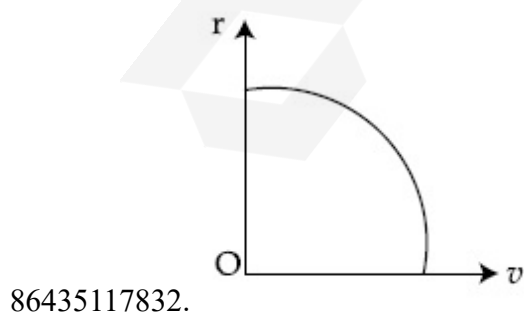
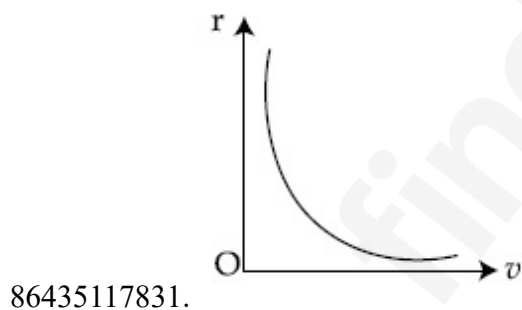
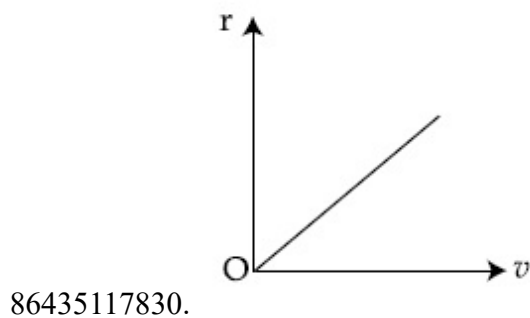
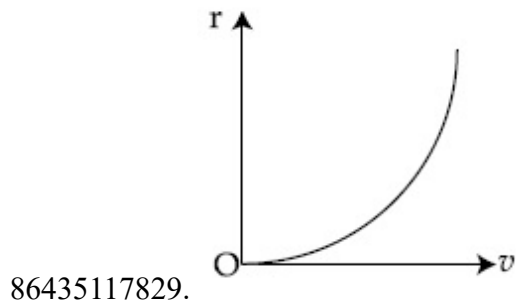
Question Number : 3 Question Id : 8643515943 Question Type : MCQ Option Shuffling : Yes Is Question Mandatory : No

Correct Marks : 4 Wrong Marks : 1

A particle of mass m moves in a circular orbit under the central potential field, $U(r) = -\frac{C}{r}$, where C is a positive constant.

The correct radius – velocity graph of the particle's motion is :

Options :

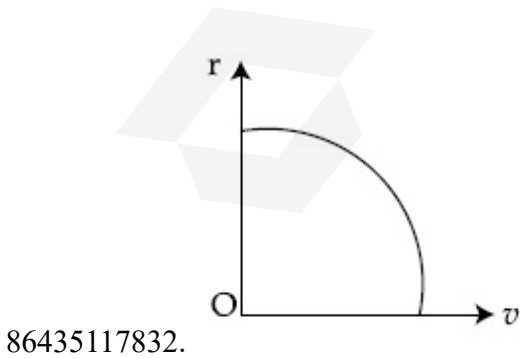
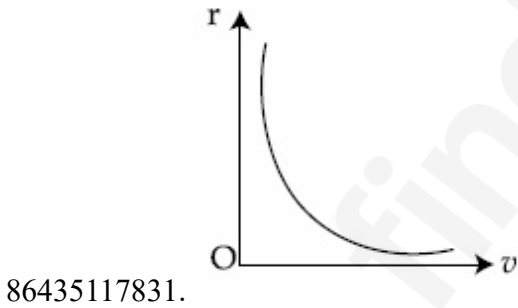
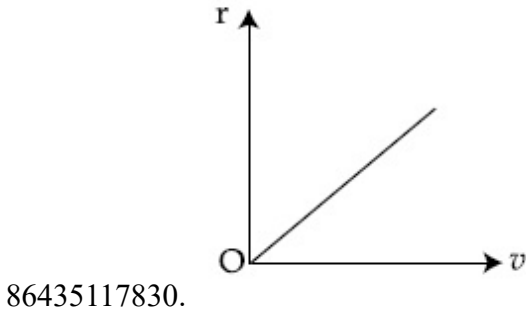
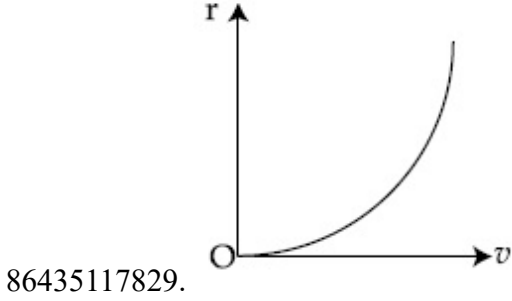


Question Number : 3 Question Id : 8643515943 Question Type : MCQ Option Shuffling : Yes Is Question Mandatory : No

Correct Marks : 4 Wrong Marks : 1

m દળ ધરાવતું એક કણ $U(r) = -\frac{C}{r}$; જ્યાં C એ ધન અચળાંક, થી અપાતા કેન્દ્રીય સ્થિતિમાન ક્ષેત્રની અસર લેઈળ વર્તુળાકાર કક્ષામાં ગતિ કરે છે. કણની ગતિ માટે ત્રિજ્યા - વેગને દર્શાવતો સાચો આલેખ _____ છે.

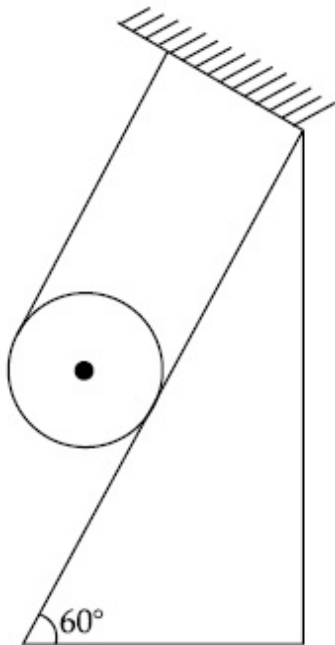
Options :



Question Number : 4 Question Id : 8643515944 Question Type : MCQ Option Shuffling : Yes Is Question Mandatory : No

Correct Marks : 4 Wrong Marks : 1

A solid cylinder of mass m is wrapped with an inextensible light string and, is placed on a rough inclined plane as shown in the figure. The frictional force acting between the cylinder and the inclined plane is :



[The coefficient of static friction, μ_s , is 0.4]

Options :

86435117833. $\frac{mg}{5}$

86435117834. $5 mg$

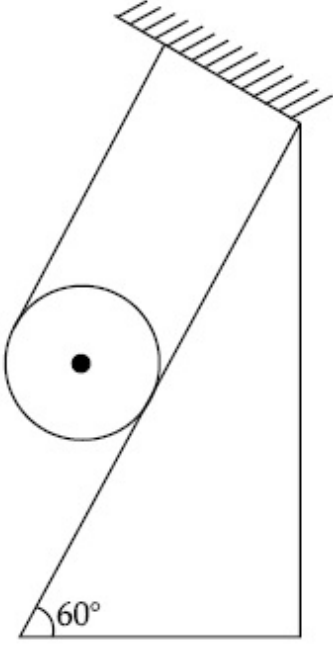
86435117835. $\frac{7}{2} mg$

86435117836. 0

Question Number : 4 Question Id : 8643515944 Question Type : MCQ Option Shuffling : Yes Is Question Mandatory : No

Correct Marks : 4 Wrong Marks : 1

m દળ ધરાવતાં એક ઘન નળાકારને હલકી અને ખેંચી ના શકાય તેવી દોરી વડે વીંટાળવામાં આવેલ છે અને તેને આકૃતિમાં દર્શાવ્યા અનુસાર એક ખરબચડા ઢળતા સમતલ (ઢોળાવ) ઉપર મૂકવામાં આવે છે. નળાકાર અને ઢોળાવ વચ્ચે પ્રવર્તતું ઘર્ષણબળ _____ થશે.



[સ્થિત ઘર્ષણાંક μ_s 0.4 છે.]

Options :

86435117833. $\frac{mg}{5}$

86435117834. 5 mg

86435117835. $\frac{7}{2} mg$

86435117836. 0

Question Number : 5 Question Id : 8643515945 Question Type : MCQ Option Shuffling : Yes Is Question Mandatory : No

Correct Marks : 4 Wrong Marks : 1

If the angular velocity of earth's spin is increased such that the bodies at the equator start floating, the duration of the day would be approximately :

[Take $g = 10 \text{ ms}^{-2}$, the radius of earth, $R = 6400 \times 10^3 \text{ m}$, Take $\pi = 3.14$]

Options :

86435117837. does not change

86435117838. 1200 minutes

86435117839. 60 minutes

86435117840. 84 minutes

Question Number : 5 Question Id : 8643515945 Question Type : MCQ Option Shuffling : Yes Is Question Mandatory : No

Correct Marks : 4 Wrong Marks : 1

જો પૃથ્વીની પરિક્રમણનો કોણીયવેગ એવી રીતે વધારવામાં આવે છે કે જેથી વિષવૃત્ત ઉપર રહેલો પદાર્થ તરવા માટે તો દિવસની લંબાઈ લગભગ _____ જેટલી થશે.

[$g = 10 \text{ ms}^{-2}$, R , પૃથ્વીની ત્રિજ્યા = $6400 \times 10^3 \text{ m}$, $\pi = 3.14$ લો.]

Options :

86435117837. બદલાશે નહીં

86435117838. 1200 મિનીટ

86435117839. 60 મિનીટ

86435117840. 84 મિનીટ

Question Number : 6 Question Id : 8643515946 Question Type : MCQ Option Shuffling : Yes Is Question Mandatory : No

Correct Marks : 4 Wrong Marks : 1

Consider a uniform wire of mass M and length L . It is bent into a semicircle. Its moment of inertia about a line perpendicular to the plane of the wire passing through the centre is :

Options :

86435117841. $\frac{ML^2}{\pi^2}$

86435117842. $\frac{1}{2} \frac{ML^2}{\pi^2}$

86435117843. $\frac{1}{4} \frac{ML^2}{\pi^2}$

86435117844. $\frac{2}{5} \frac{ML^2}{\pi^2}$

Question Number : 6 Question Id : 8643515946 Question Type : MCQ Option Shuffling : Yes Is Question Mandatory : No

Correct Marks : 4 Wrong Marks : 1

M દળ અને L જેટલી લંબાઈ ધરાવતો સમાંગ તારને ધ્યાનમાં લો. તેને વાળીને અર્ધવર્તુળ બનાવવામાં આવે છે. તેના કેન્દ્રમાંથી પસાર થતી અને તારના સમતલને લંબ રેખાને અનુલક્ષીને જડત્વની ચાકમાત્રા _____ થશે.

Options :

86435117841. $\frac{ML^2}{\pi^2}$

86435117842. $\frac{1}{2} \frac{ML^2}{\pi^2}$

86435117843. $\frac{1}{4} \frac{ML^2}{\pi^2}$

86435117844. $\frac{2}{5} \frac{ML^2}{\pi^2}$

Question Number : 7 Question Id : 8643515947 Question Type : MCQ Option Shuffling : Yes Is Question Mandatory : No

Correct Marks : 4 Wrong Marks : 1

The speed of electrons in a scanning electron microscope is $1 \times 10^7 \text{ ms}^{-1}$. If the protons having the same speed are used instead of electrons, then the resolving power of scanning proton microscope will be changed by a factor of :

Options :

86435117845. 1837

86435117846. $\frac{1}{1837}$ 86435117847. $\frac{1}{\sqrt{1837}}$ 86435117848. $\sqrt{1837}$

Question Number : 7 Question Id : 8643515947 Question Type : MCQ Option Shuffling : Yes Is Question Mandatory : No

Correct Marks : 4 Wrong Marks : 1

સ્કેનીંગ ઇલેક્ટ્રોન સૂક્ષ્મદર્શક (scanning electron microscope) માં ઇલેક્ટ્રોનની ઝડપ $1 \times 10^7 \text{ ms}^{-1}$ છે. જો ઇલેક્ટ્રોનને બદલે આટલી જ ઝડપ સાથેના પ્રોટોનનો ઉપયોગ કરવામાં આવે તો સ્કેનીંગ પ્રોટોન સૂક્ષ્મદર્શકની વિભેદન શક્તિ _____ પ્રમાણે બદલાશે.

Options :

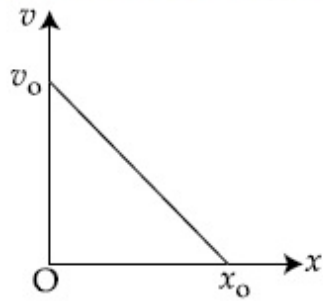
86435117845. 1837

86435117846. $\frac{1}{1837}$ 86435117847. $\frac{1}{\sqrt{1837}}$ 86435117848. $\sqrt{1837}$

Question Number : 8 Question Id : 8643515948 Question Type : MCQ Option Shuffling : Yes Is Question Mandatory : No

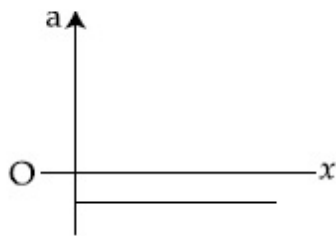
Correct Marks : 4 Wrong Marks : 1

The velocity - displacement graph of a particle is shown in the figure.

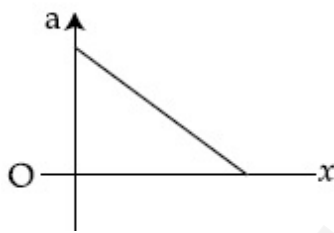


The acceleration - displacement graph of the same particle is represented by :

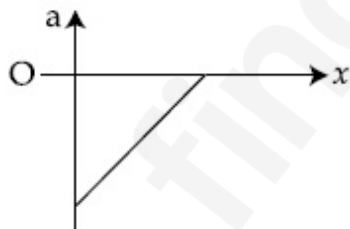
Options :



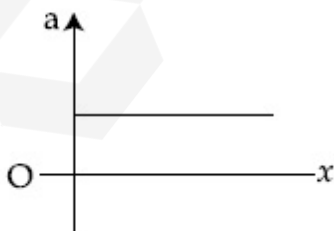
86435117849.



86435117850.



86435117851.

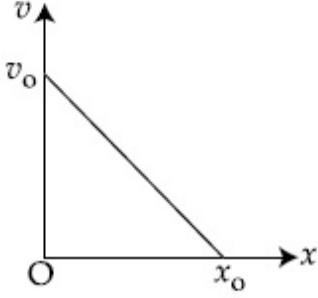


86435117852.

Question Number : 8 Question Id : 8643515948 Question Type : MCQ Option Shuffling : Yes Is Question Mandatory : No

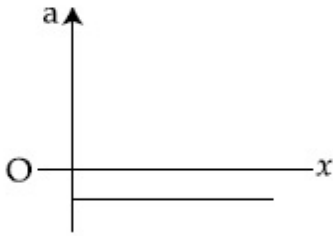
Correct Marks : 4 Wrong Marks : 1

કણ માટે વેગ-સ્થાનાંતરનો આલેખ આકૃતિમાં દર્શાવેલ છે.

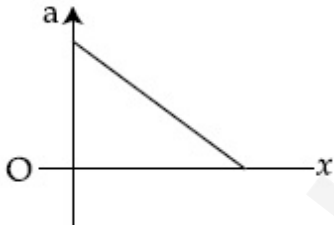


આ જ કણ માટે પ્રવેગ-સ્થાનાંતરનો આલેખ _____ વડે રજૂ કરી શકાય.

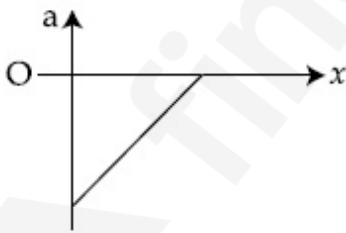
Options :



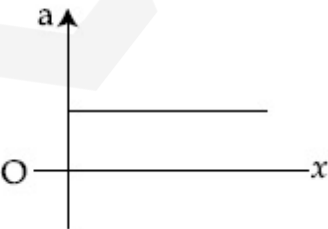
86435117849.



86435117850.



86435117851.



86435117852.

Question Number : 9 Question Id : 8643515949 Question Type : MCQ Option Shuffling : Yes Is

Question Mandatory : No

Correct Marks : 4 Wrong Marks : 1

For an adiabatic expansion of an ideal gas, the fractional change in its pressure is equal to (where γ is the ratio of specific heats) :

Options :

$$-\gamma \frac{dV}{V}$$

86435117853.

$$-\gamma \frac{V}{dV}$$

86435117854.

$$-\frac{1}{\gamma} \frac{dV}{V}$$

86435117855.

$$\frac{dV}{V}$$

86435117856.

Question Number : 9 Question Id : 8643515949 Question Type : MCQ Option Shuffling : Yes Is

Question Mandatory : No

Correct Marks : 4 Wrong Marks : 1

આદર્શવાયુની સમોષ્મી વિસ્તરણ માટે, દબાણમાં આંશિક ફેરફાર _____ ને બરાબર થશે. (જ્યાં γ એ વિશિષ્ટ ઉષ્માઓનો ગુણોત્તર છે.)

Options :

$$-\gamma \frac{dV}{V}$$

86435117853.

$$-\gamma \frac{V}{dV}$$

86435117854.

$$-\frac{1}{\gamma} \frac{dV}{V}$$

86435117855.

$$\frac{dV}{V}$$

86435117856.

Question Number : 10 Question Id : 8643515950 Question Type : MCQ Option Shuffling : Yes Is

Question Mandatory : No

Correct Marks : 4 Wrong Marks : 1

The angular momentum of a planet of mass M moving around the sun in an elliptical orbit is

\vec{L} . The magnitude of the areal velocity of the planet is :

Options :

$$\frac{L}{M}$$

86435117857.

$$\frac{L}{2M}$$

86435117858.

$$\frac{2L}{M}$$

86435117859.

$$\frac{4L}{M}$$

86435117860.

Question Number : 10 Question Id : 8643515950 Question Type : MCQ Option Shuffling : Yes Is

Question Mandatory : No

Correct Marks : 4 Wrong Marks : 1

M દળ ધરાવતાં અને સૂર્યને ફરતે લંબવૃત્તીય કક્ષામાં ફરતાં ગ્રહનું કોણીય વેગમાન \vec{L} છે. ગ્રહની કક્ષીય વેગનું મૂલ્ય

_____ થશે.

Options :

$$\frac{L}{M}$$

86435117857.

$$\frac{L}{2M}$$

86435117858.

$$86435117859. \frac{2L}{M}$$

$$86435117860. \frac{4L}{M}$$

Question Number : 11 Question Id : 8643515951 Question Type : MCQ Option Shuffling : Yes Is Question Mandatory : No

Correct Marks : 4 Wrong Marks : 1

An ideal gas in a cylinder is separated by a piston in such a way that the entropy of one part is S_1 and that of the other part is S_2 . Given that $S_1 > S_2$. If the piston is removed then the total entropy of the system will be :

Options :

$$86435117861. S_1 \times S_2$$

$$86435117862. S_1 - S_2$$

$$86435117863. S_1 + S_2$$

$$86435117864. \frac{S_1}{S_2}$$

Question Number : 11 Question Id : 8643515951 Question Type : MCQ Option Shuffling : Yes Is Question Mandatory : No

Correct Marks : 4 Wrong Marks : 1

નળાકારમાં રહેલા આદર્શ વાયુને એક પિસ્ટન વડે એવી રીતે અલગ કરવામાં આવે છે કે જોથી એક ભાગની એન્ટ્રોપી S_1 જ્યારે બીજા ભાગની એન્ટ્રોપી S_2 બને છે. $S_1 > S_2$ એમ આપેલ છે. જો પિસ્ટોનને દૂર કરવામાં આવે તો તંત્રની એન્ટ્રોપી _____ થશે.

Options :

$$86435117861. S_1 \times S_2$$

$$86435117862. S_1 - S_2$$

$$86435117863. S_1 + S_2$$

$$\frac{S_1}{S_2}$$

86435117864.

Question Number : 12 Question Id : 8643515952 Question Type : MCQ Option Shuffling : Yes Is Question Mandatory : No

Correct Marks : 4 Wrong Marks : 1

The function of time representing a simple harmonic motion with a period of $\frac{\pi}{\omega}$ is :

Options :

86435117865. $\sin(\omega t) + \cos(\omega t)$

86435117866. $\sin^2(\omega t)$

86435117867. $3 \cos\left(\frac{\pi}{4} - 2\omega t\right)$

86435117868. $\cos(\omega t) + \cos(2\omega t) + \cos(3\omega t)$

Question Number : 12 Question Id : 8643515952 Question Type : MCQ Option Shuffling : Yes Is Question Mandatory : No

Correct Marks : 4 Wrong Marks : 1

$\frac{\pi}{\omega}$ જેટલા આવર્તકાળ ધરાવતી સરળ આવર્ત ગતિને રજૂ કરતું સમય આધારીત વિધેય _____ છે.

Options :

86435117865. $\sin(\omega t) + \cos(\omega t)$

86435117866. $\sin^2(\omega t)$

86435117867. $3 \cos\left(\frac{\pi}{4} - 2\omega t\right)$

86435117868. $\cos(\omega t) + \cos(2\omega t) + \cos(3\omega t)$

Question Number : 13 Question Id : 8643515953 Question Type : MCQ Option Shuffling : Yes Is Question Mandatory : No Correct Marks : 4 Wrong Marks : 1

In a series LCR circuit, the inductive reactance (X_L) is 10Ω and the capacitive reactance (X_C) is 4Ω . The resistance (R) in the circuit is 6Ω .

The power factor of the circuit is :

Options :

86435117869. $\frac{1}{\sqrt{2}}$

86435117870. $\frac{\sqrt{3}}{2}$

86435117871. $\frac{1}{2}$

86435117872. $\frac{1}{2\sqrt{2}}$

Question Number : 13 Question Id : 8643515953 Question Type : MCQ Option Shuffling : Yes Is Question Mandatory : No Correct Marks : 4 Wrong Marks : 1

LCR શ્રેણી પરિપથમાં, ગુંચળાનો અવબાધ (X_L) 10Ω અને સંઘારકનો અવબાધ (X_C) 4Ω છે. પરિપથમાં અવરોધ (R) 6Ω નો છે. પરિપથનો પોવર ફેક્ટર _____ થશે.

Options :

86435117869. $\frac{1}{\sqrt{2}}$

86435117870. $\frac{\sqrt{3}}{2}$

86435117871. $\frac{1}{2}$

86435117872. $\frac{1}{2\sqrt{2}}$

Question Number : 14 Question Id : 8643515954 Question Type : MCQ Option Shuffling : Yes Is Question Mandatory : No

Correct Marks : 4 Wrong Marks : 1

Which of the following statements are correct ?

- (A) Electric monopoles do not exist whereas magnetic monopoles exist.
- (B) Magnetic field lines due to a solenoid at its ends and outside cannot be completely straight and confined.
- (C) Magnetic field lines are completely confined within a toroid.
- (D) Magnetic field lines inside a bar magnet are not parallel.
- (E) $\chi = -1$ is the condition for a perfect diamagnetic material, where χ is its magnetic susceptibility.

Choose the correct answer from the options given below :

Options :

86435117873. (B) and (D) only

86435117874. (B) and (C) only

86435117875. (A) and (B) only

86435117876. (C) and (E) only

Question Number : 14 Question Id : 8643515954 Question Type : MCQ Option Shuffling : Yes Is Question Mandatory : No

Correct Marks : 4 Wrong Marks : 1

નીચે આપેલામાંથી કયા વિધાનો સાચાં છે?

- (A) વિદ્યુત એકધ્રુવી અસ્તિત્વ ધરાવતાં નથી જ્યારે ચુંબકીય એક ધ્રુવીઓ અસ્તિત્વ ધરાવે છે.
- (B) સોલેનોઈડ થી ઉત્પન્ન ચુંબકીય ક્ષેત્ર રેખાઓ તેના છેડાઓ અને બહારનાં ભાગમાં પૂર્ણ રીતે સીધી અને સિમીત હોતી નથી.
- (C) ટોરોઈડમાં ચુંબકીય ક્ષેત્ર રેખાઓ સંપૂર્ણ પણે સિમીત હોય છે.
- (D) ગળ્યા ચુંબકની અંદરના ભાગમાં ચુંબકીય ક્ષેત્ર રેખાઓ સમાંતર હોતી નથી.
- (E) $\chi = -1$ શરત સંપૂર્ણ વિષમ ચુંબકીય (ડાયામેગ્નેટીક) પદાર્થ માટે છે, જ્યાં χ એ ચુંબકીય ગ્રહણશીલતા (susceptibility) છે.

નીચે આપેલા વિકલ્પોમાંથી સાચો વિકલ્પ પસંદ કરો :

Options :

86435117873. ફક્ત (B) અને (D)

86435117874. ફક્ત (B) અને (C)

86435117875. ફક્ત (A) અને (B)

86435117876. ફક્ત (C) અને (E)

Question Number : 15 Question Id : 8643515955 Question Type : MCQ Option Shuffling : Yes Is

Question Mandatory : No

Correct Marks : 4 Wrong Marks : 1

The correct relation between α (ratio of collector current to emitter current) and β (ratio of collector current to base current) of a transistor is :

Options :

$$\beta = \frac{\alpha}{1 + \alpha}$$

86435117877.

$$\alpha = \frac{\beta}{1 - \alpha}$$

86435117878.

$$\beta = \frac{1}{1 - \alpha}$$

86435117879.

$$\alpha = \frac{\beta}{1 + \beta}$$

86435117880.

Question Number : 15 Question Id : 8643515955 Question Type : MCQ Option Shuffling : Yes Is Question Mandatory : No

Correct Marks : 4 Wrong Marks : 1

ટ્રાન્ઝિસ્ટર માટે α (કલેક્ટર પ્રવાહ અને એમીટર પ્રવાહનો ગુણોત્તર) અને β (કલેક્ટર પ્રવાહ અને બેઝ પ્રવાહનો ગુણોત્તર) વચ્ચેનો સાચો સંબંધ _____ છે.

Options :

$$\beta = \frac{\alpha}{1 + \alpha}$$

86435117877.

$$\alpha = \frac{\beta}{1 - \alpha}$$

86435117878.

$$\beta = \frac{1}{1 - \alpha}$$

86435117879.

$$\alpha = \frac{\beta}{1 + \beta}$$

86435117880.

Question Number : 16 Question Id : 8643515956 Question Type : MCQ Option Shuffling : Yes Is Question Mandatory : No

Correct Marks : 4 Wrong Marks : 1

A proton and an α -particle, having kinetic energies K_p and K_α respectively, enter into a magnetic field at right angles.

The ratio of the radii of trajectory of proton to that of α -particle is 2 : 1. The ratio of $K_p : K_\alpha$ is :

Options :

86435117881. 1 : 4

86435117882. 4 : 1

86435117883. 8 : 1

86435117884. 1 : 8

Question Number : 16 Question Id : 8643515956 Question Type : MCQ Option Shuffling : Yes Is Question Mandatory : No

Correct Marks : 4 Wrong Marks : 1

અનુક્રમે K_p અને K_α જેટલી ગતિઊર્જા ધરાવતો એક પ્રોટોન અને α -કણ ચુંબકીય ક્ષેત્રમાં લંબરૂપે દાખલ થાય છે. પ્રોટોન અને α -કણની ગતિપથની ત્રિજ્યાઓનો ગુણોત્તર 2 : 1 છે. $K_p : K_\alpha$ ગુણોત્તર _____ થશે.

Options :

86435117881. 1 : 4

86435117882. 4 : 1

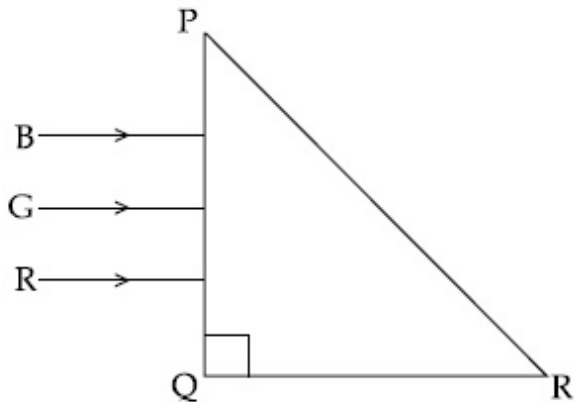
86435117883. 8 : 1

86435117884. 1 : 8

Question Number : 17 Question Id : 8643515957 Question Type : MCQ Option Shuffling : Yes Is Question Mandatory : No

Correct Marks : 4 Wrong Marks : 1

Three rays of light, namely red (R), green (G) and blue (B) are incident on the face PQ of a right angled prism PQR as shown in the figure.



The refractive indices of the material of the prism for red, green and blue wavelength are 1.27, 1.42 and 1.49 respectively. The colour of the ray(s) emerging out of the face PR is :

Options :

86435117885. blue and green

86435117886. blue

86435117887. green

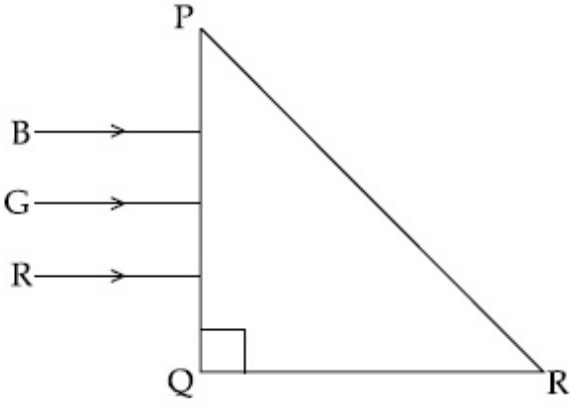
86435117888. red

Question Number : 17 Question Id : 8643515957 Question Type : MCQ Option Shuffling : Yes Is

Question Mandatory : No

Correct Marks : 4 Wrong Marks : 1

આકૃતિમાં દર્શાવ્યા પ્રમાણે એક કાટકોણ ત્રિકોણ PQR ની બાજુ PQ ઉપર રાતો (R), લીલો (G) અને વાદળી (B) એમ ત્રણ પ્રકાર કિરણો આપાત થાય છે.



ત્રિકોણનાં દ્રવ્યનો રાતા, લીલા અને વાદળી માટે વક્રીભવનાંક અનુક્રમે 1.27, 1.42 અને 1.49 છે. PR બાજુમાંથી નિર્ગમન પામતા કિરણ (કિરણો) નો રંગ _____ હશે.

Options :

86435117885. વાદળી અને લીલો

86435117886. વાદળી

86435117887. લીલો

86435117888. રાતો

Question Number : 18 Question Id : 8643515958 Question Type : MCQ Option Shuffling : Yes Is

Question Mandatory : No

Correct Marks : 4 Wrong Marks : 1

The time taken for the magnetic energy to reach 25% of its maximum value, when a solenoid of resistance R, inductance L is connected to a battery, is :

Options :

86435117889. $\frac{L}{R} \ln 2$

86435117890. $\frac{L}{R} \ln 5$

$$\frac{L}{R} \ln 10$$

86435117891.

infinite

86435117892.

Question Number : 18 Question Id : 8643515958 Question Type : MCQ Option Shuffling : Yes Is Question Mandatory : No

Correct Marks : 4 Wrong Marks : 1

જ્યારે R અવરોધ અને L ઈન્ડક્ટર ધરાવતાં સોલેનોઈડને બેટરી સાથે જોડતા, ચુંબકીય ઊર્જાને તેના મહત્તમ મૂલ્ય કરતાં 25% જેટલી થવા માટે લાગતો સમય _____ છે.

Options :

$$\frac{L}{R} \ln 2$$

86435117889.

$$\frac{L}{R} \ln 5$$

86435117890.

$$\frac{L}{R} \ln 10$$

86435117891.

અનંત

86435117892.

Question Number : 19 Question Id : 8643515959 Question Type : MCQ Option Shuffling : Yes Is Question Mandatory : No

Correct Marks : 4 Wrong Marks : 1

A plane electromagnetic wave propagating along y -direction can have the following pair of electric field (\vec{E}) and magnetic field (\vec{B}) components.

Options :

$$E_y, B_y \text{ or } E_z, B_z$$

86435117893.

$$E_x, B_y \text{ or } E_y, B_x$$

86435117894.

86435117895. E_x, B_z or E_z, B_x

86435117896. E_y, B_x or E_x, B_y

Question Number : 19 Question Id : 8643515959 Question Type : MCQ Option Shuffling : Yes Is Question Mandatory : No Correct Marks : 4 Wrong Marks : 1

y -દિશામાં ગતિ કરતાં સમતલ વિદ્યુતચુંબકીય તરંગને વિદ્યુતક્ષેત્ર (\vec{E}) અને ચુંબકીય ક્ષેત્ર (\vec{B}) ના ઘટકો નીચે દર્શાવેલ _____ ભેડી થી આપી શકાય.

Options :

86435117893. E_y, B_y અથવા E_z, B_z

86435117894. E_x, B_y અથવા E_y, B_x

86435117895. E_x, B_z અથવા E_z, B_x

86435117896. E_y, B_x અથવા E_x, B_y

Question Number : 20 Question Id : 8643515960 Question Type : MCQ Option Shuffling : Yes Is Question Mandatory : No Correct Marks : 4 Wrong Marks : 1

The decay of a proton to neutron is :

Options :

86435117897. not possible as proton mass is less than the neutron mass

86435117898. possible only inside the nucleus

86435117899. always possible as it is associated only with β^+ decay

86435117900. not possible but neutron to proton conversion is possible

Question Number : 20 Question Id : 8643515960 Question Type : MCQ Option Shuffling : Yes Is

Question Mandatory : No

Correct Marks : 4 Wrong Marks : 1

પ્રોટોન થી ન્યૂટ્રોનનો ક્ષય _____.

Options :

86435117897. શક્ય નથી કારણ કે પ્રોટોનનું દળ ન્યૂટ્રોનના દળ કરતાં ઓછું છે.

86435117898. ન્યૂક્લિયસની અંદર જ શક્ય છે.

86435117899. હંમેશા શક્ય છે કારણ કે તે β^+ ક્ષય સાથે સંકળાયેલ છે.

86435117900. શક્ય નથી પરંતુ ન્યૂટ્રોનથી પ્રોટોન રૂપાંતરણ શક્ય છે.

Physics Section B

Section Id :	864351398
Section Number :	2
Section type :	Online
Mandatory or Optional :	Mandatory
Number of Questions :	10
Number of Questions to be attempted :	5
Section Marks :	20
Mark As Answered Required? :	Yes
Sub-Section Number :	1
Sub-Section Id :	864351398
Question Shuffling Allowed :	Yes

Question Number : 21 Question Id : 8643515961 Question Type : SA

Correct Marks : 4 Wrong Marks : 0

The projectile motion of a particle of mass 5 g is shown in the figure.



The initial velocity of the particle is $5\sqrt{2} \text{ ms}^{-1}$ and the air resistance is assumed to be negligible.

The magnitude of the change in momentum between the points A and B is $x \times 10^{-2} \text{ kgms}^{-1}$.

The value of x , to the nearest integer, is _____.

Response Type : Numeric

Evaluation Required For SA : Yes

Show Word Count : Yes

Answers Type : Equal

Text Areas : PlainText

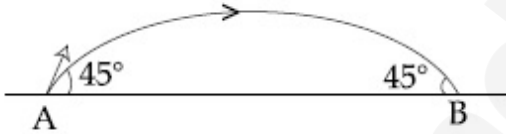
Possible Answers :

100

Question Number : 21 **Question Id :** 8643515961 **Question Type :** SA

Correct Marks : 4 **Wrong Marks :** 0

આકૃતિમાં 5 g દળ ધરાવતાં કણની પ્રક્ષિપ્ત ગતિ દર્શાવેલ છે.



કણનો પ્રારંભિક વેગ $5\sqrt{2} \text{ ms}^{-1}$ છે અને હવાનો અવરોધ અવગણી શકાય છે. બિંદુઓ A અને B વચ્ચે વેગમાનનાં

બદલાવનું મૂલ્ય $x \times 10^{-2} \text{ kgms}^{-1}$ છે. x નું મૂલ્ય, નજીકતમ પૂર્ણાંક માટે, _____ હશે.

Response Type : Numeric

Evaluation Required For SA : Yes

Show Word Count : Yes

Answers Type : Equal

Text Areas : PlainText

Possible Answers :

100

Question Number : 22 **Question Id :** 8643515962 **Question Type :** SA

Correct Marks : 4 **Wrong Marks :** 0

An infinite number of point charges, each carrying $1 \mu\text{C}$ charge, are placed along the y -axis at $y=1 \text{ m}, 2 \text{ m}, 4 \text{ m}, 8 \text{ m} \dots\dots\dots$.

The total force on a 1 C point charge, placed at the origin, is $x \times 10^3 \text{ N}$.

The value of x , to the nearest integer, is _____.

[Take $\frac{1}{4\pi\epsilon_0} = 9 \times 10^9 \text{ Nm}^2/\text{C}^2$]

Response Type : Numeric

Evaluation Required For SA : Yes

Show Word Count : Yes

Answers Type : Equal

Text Areas : PlainText

Possible Answers :

100

Question Number : 22 **Question Id :** 8643515962 **Question Type :** SA

Correct Marks : 4 **Wrong Marks :** 0

દરેક $1 \mu\text{C}$ એવા અનંત બિંદુવત વિદ્યુતભારોને y -અક્ષ પર $y=1 \text{ m}, 2 \text{ m}, 4 \text{ m}, 8 \text{ m} \dots\dots\dots$ પર મૂકવામાં આવેલા છે.

ઉગમબિંદુ પર રાખેલા 1 C બિંદુવત વિદ્યુતભાર લાગતું બળ $x \times 10^3 \text{ N}$ છે. x નું મૂલ્ય, નજીકતમ પૂર્ણાંક માટે, _____

થશે. [$\frac{1}{4\pi\epsilon_0} = 9 \times 10^9 \text{ Nm}^2/\text{C}^2$ લો.]

Response Type : Numeric

Evaluation Required For SA : Yes

Show Word Count : Yes

Answers Type : Equal

Text Areas : PlainText

Possible Answers :

100

Question Number : 23 **Question Id :** 8643515963 **Question Type :** SA

Correct Marks : 4 **Wrong Marks :** 0

Two wires of same length and thickness having specific resistances $6 \Omega \text{ cm}$ and $3 \Omega \text{ cm}$ respectively are connected in parallel. The effective resistivity is $\rho \Omega \text{ cm}$. The value of ρ , to the nearest integer, is _____.

Response Type : Numeric

Evaluation Required For SA : Yes

Show Word Count : Yes

Answers Type : Equal

Text Areas : PlainText

Possible Answers :

100

Question Number : 23 Question Id : 8643515963 Question Type : SA

Correct Marks : 4 Wrong Marks : 0

અનુક્રમે 6 Ω cm અને 3 Ω cm વિશિષ્ટ અવરોધ ધરાવતાં બે સમાન લંબાઈ અને જડાઈ ધરાવતાં તારોને સમાંતરમાં જોડવામાં આવ્યા છે. અસરકારક અવરોધકતા ρ Ω cm છે. ρ નું મૂલ્ય, નજીકત્તમ પૂર્ણાંક માટે, _____ થશે.

Response Type : Numeric

Evaluation Required For SA : Yes

Show Word Count : Yes

Answers Type : Equal

Text Areas : PlainText

Possible Answers :

100

Question Number : 24 Question Id : 8643515964 Question Type : SA

Correct Marks : 4 Wrong Marks : 0

A ball of mass 4 kg, moving with a velocity of 10 ms^{-1} , collides with a spring of length 8 m and force constant 100 Nm^{-1} . The length of the compressed spring is x m. The value of x , to the nearest integer, is _____.

Response Type : Numeric

Evaluation Required For SA : Yes

Show Word Count : Yes

Answers Type : Equal

Text Areas : PlainText

Possible Answers :

100

Question Number : 24 Question Id : 8643515964 Question Type : SA

Correct Marks : 4 Wrong Marks : 0

4 kg દળ ધરાવતો અને 10 ms^{-1} નાં વેગથી ગતિ કરતો એક બોલ, 8 m લંબાઈની અને 100 Nm^{-1} બળ અચળાંક ધરાવતી સ્પ્રિંગ સાથે અથડાય છે. દબાયેલી સ્પ્રિંગની લંબાઈ x m છે. x નું મૂલ્ય નજીકત્તમ પૂર્ણાંક માટે, _____ થશે.

Response Type : Numeric

Evaluation Required For SA : Yes

Show Word Count : Yes

Answers Type : Equal

Text Areas : PlainText

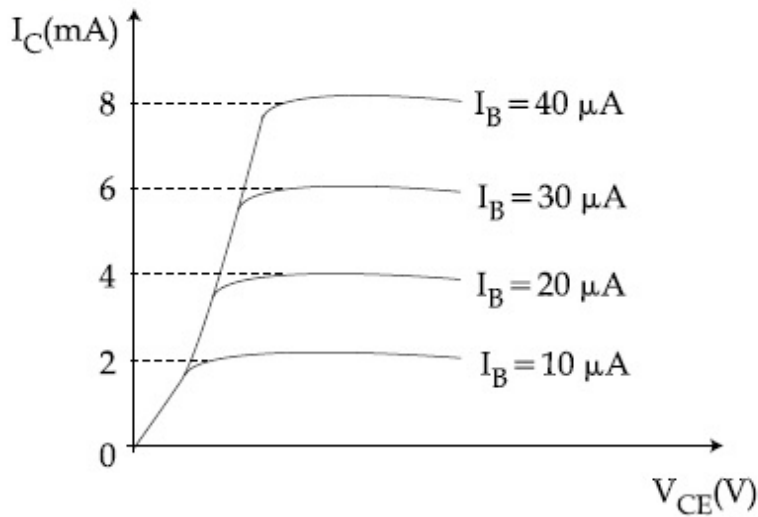
Possible Answers :

100

Question Number : 25 Question Id : 8643515965 Question Type : SA

Correct Marks : 4 Wrong Marks : 0

The typical output characteristics curve for a transistor working in the common-emitter configuration is shown in the figure.



The estimated current gain from the figure is _____.

Response Type : Numeric

Evaluation Required For SA : Yes

Show Word Count : Yes

Answers Type : Equal

Text Areas : PlainText

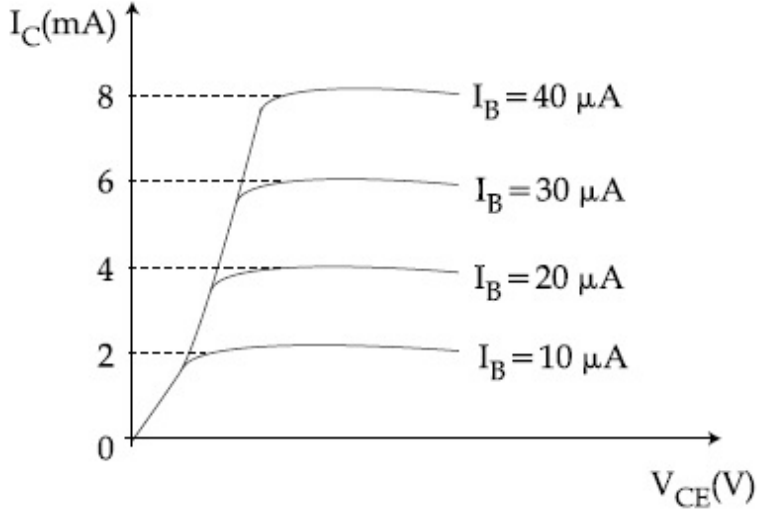
Possible Answers :

100

Question Number : 25 Question Id : 8643515965 Question Type : SA

Correct Marks : 4 Wrong Marks : 0

કોમન-એમીટર સંરચનામાં કાર્યરત ટ્રાન્ઝીસ્ટર માટે ચોક્કસ આઉટપુટ લાક્ષણિકતા આકૃતિમાં દર્શાવેલ છે.



પરિપથ પરથી અંદાજીત પ્રવાહ લબ્ધિ _____ છે.

Response Type : Numeric

Evaluation Required For SA : Yes

Show Word Count : Yes

Answers Type : Equal

Text Areas : PlainText

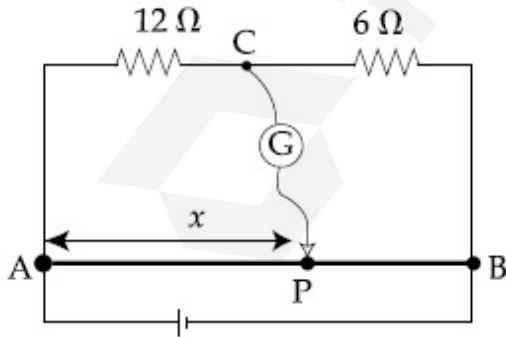
Possible Answers :

100

Question Number : 26 **Question Id :** 8643515966 **Question Type :** SA

Correct Marks : 4 **Wrong Marks :** 0

Consider a 72 cm long wire AB as shown in the figure. The galvanometer jockey is placed at P on AB at a distance x cm from A. The galvanometer shows zero deflection.



The value of x , to the nearest integer, is _____.

Response Type : Numeric

Evaluation Required For SA : Yes

Show Word Count : Yes

Answers Type : Equal

Text Areas : PlainText

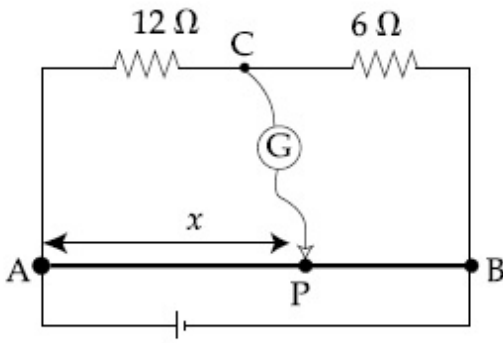
Possible Answers :

100

Question Number : 26 Question Id : 8643515966 Question Type : SA

Correct Marks : 4 Wrong Marks : 0

આકૃતિમાં દર્શાવ્યા પ્રમાણે 72 cm લાંબા તારને ધ્યાનમાં લો. AB ઉપર ગેલ્વેનોમીટરની બેકી (કળ) ને A થી x cm અંતરે રહેલા P બિંદુ આગળ રાખવામાં આવે છે. ગેલ્વેનોમીટર શૂન્ય આવર્તન દર્શાવે છે.



x નું મૂલ્ય, નજીકતમ પૂર્ણાંક માટે, _____ થશે.

Response Type : Numeric

Evaluation Required For SA : Yes

Show Word Count : Yes

Answers Type : Equal

Text Areas : PlainText

Possible Answers :

100

Question Number : 27 Question Id : 8643515967 Question Type : SA

Correct Marks : 4 Wrong Marks : 0

A galaxy is moving away from the earth at a speed of 286 kms^{-1} . The shift in the wavelength of a redline at 630 nm is $x \times 10^{-10} \text{ m}$.

The value of x , to the nearest integer, is _____.

[Take the value of speed of light c , as $3 \times 10^8 \text{ ms}^{-1}$]

Response Type : Numeric

Evaluation Required For SA : Yes

Show Word Count : Yes

Answers Type : Equal

Text Areas : PlainText

Possible Answers :

100

Question Number : 27 Question Id : 8643515967 Question Type : SA

Correct Marks : 4 Wrong Marks : 0

પૃથ્વીથી એક નિહારીકા (ગેલેક્સી) 286 kms^{-1} ની ઝડપથી દૂર જાય છે. 630 nm ની રાતીરેખા (Redline) ની તરંગલંબાઈમાં ફેરફાર $x \times 10^{-10} \text{ m}$ મળે છે. x નું મૂલ્ય, નજીકત્તમ પૂર્ણાંક માટે, _____ થશે.

[પ્રકાશની ઝડપ c નું મૂલ્ય $3 \times 10^8 \text{ ms}^{-1}$ લો.]

Response Type : Numeric

Evaluation Required For SA : Yes

Show Word Count : Yes

Answers Type : Equal

Text Areas : PlainText

Possible Answers :

100

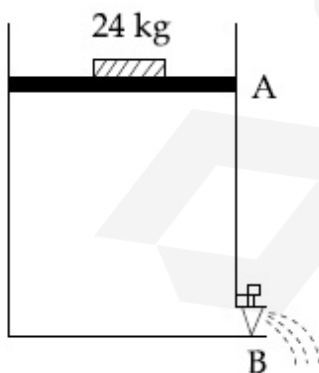
Question Number : 28 Question Id : 8643515968 Question Type : SA

Correct Marks : 4 Wrong Marks : 0

Consider a water tank as shown in the figure. It's cross-sectional area is 0.4 m^2 . The tank has an opening B near the bottom whose cross-section area is 1 cm^2 . A load of 24 kg is applied on the water at the top when the height of the water level is 40 cm above the bottom, the velocity of water coming out the opening B is $v \text{ ms}^{-1}$.

The value of v , to the nearest integer, is _____.

[Take value of g to be 10 ms^{-2}]



Response Type : Numeric

Evaluation Required For SA : Yes

Show Word Count : Yes

Answers Type : Equal

Text Areas : PlainText

Possible Answers :

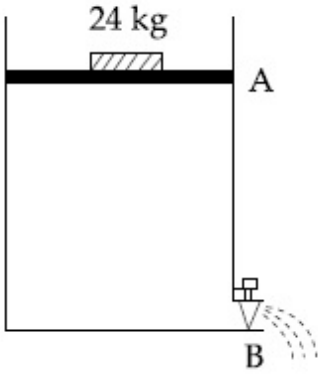
100

Question Number : 28 Question Id : 8643515968 Question Type : SA

Correct Marks : 4 Wrong Marks : 0

આકૃતિમાં દર્શાવ્યા પ્રમાણે એક પાણીની ટાંકી ધ્યાનમાં લો. તેનો આડછેદનું ક્ષેત્રફળ 0.4 m^2 છે. ટાંકીને તેના તળિયા આગળ છિદ્ર (ઢાંકણ) B છે કે જેના આડછેદનું ક્ષેત્રફળ 1 cm^2 છે. પાણી ઉપર 24 kg નો લોડ (ભાર) લગાવવામાં આવે છે. જ્યારે પાણી લેવલની ઊંચાઈ તળિયાથી 40 cm હોય ત્યારે ઢાંકણ B માંથી બહાર આવતા પાણીનો વેગ $v \text{ ms}^{-1}$ છે. v નું મૂલ્ય, નજીકત્તમ પૂર્ણાંક માટે, _____ થશે.

[g નું મૂલ્ય 10 ms^{-2}]



Response Type : Numeric

Evaluation Required For SA : Yes

Show Word Count : Yes

Answers Type : Equal

Text Areas : PlainText

Possible Answers :

100

Question Number : 29 Question Id : 8643515969 Question Type : SA

Correct Marks : 4 Wrong Marks : 0

A TV transmission tower antenna is at a height of 20 m . Suppose that the receiving antenna is at.

- (i) ground level
- (ii) a height of 5 m .

The increase in antenna range in case (ii) relative to case (i) is $n\%$.

The value of n , to the nearest integer, is _____.

Response Type : Numeric

Evaluation Required For SA : Yes

Show Word Count : Yes

Answers Type : Equal

Text Areas : PlainText

Possible Answers :

100

Question Number : 29 Question Id : 8643515969 Question Type : SA

Correct Marks : 4 Wrong Marks : 0

એક ટીવી ટ્રાન્સમીશન એન્ટીના 20 m ઊંચાઈ પર છે. બે ગ્રાહ્ય (રીસીવીંગ) એન્ટીના

(i) ધરતી પર

(ii) 5 m ઊંચાઈ એ

હોય તો એન્ટીના અવધિમાં કિસ્સા (ii) માં કિસ્સા (i) ની સરખામણીમાં થતો વધારો $n\%$ છે. n નું મૂલ્ય, નજીકતમ પૂર્ણાંક માટે, _____ થશે.

Response Type : Numeric

Evaluation Required For SA : Yes

Show Word Count : Yes

Answers Type : Equal

Text Areas : PlainText

Possible Answers :

100

Question Number : 30 Question Id : 8643515970 Question Type : SA

Correct Marks : 4 Wrong Marks : 0

The radius of a sphere is measured to be (7.50 ± 0.85) cm. Suppose the percentage error in its volume is x .

The value of x , to the nearest x , is _____.

Response Type : Numeric

Evaluation Required For SA : Yes

Show Word Count : Yes

Answers Type : Equal

Text Areas : PlainText

Possible Answers :

100

Question Number : 30 Question Id : 8643515970 Question Type : SA

Correct Marks : 4 Wrong Marks : 0

ગોળાની ત્રિજ્યા (7.50 ± 0.85) cm જેટલી મપાય છે. ધારો કે તેના કદની માપણીમાં પ્રતિશત ત્રૂટિ x છે. x નું મૂલ્ય, નજીકતમ પૂર્ણાંક માટે, _____ થશે.

Response Type : Numeric

Evaluation Required For SA : Yes

Show Word Count : Yes

Answers Type : Equal

Text Areas : PlainText

Possible Answers :

100

Chemistry Section A

Section Id :	864351399
Section Number :	3
Section type :	Online
Mandatory or Optional :	Mandatory
Number of Questions :	20
Number of Questions to be attempted :	20
Section Marks :	80
Mark As Answered Required? :	Yes
Sub-Section Number :	1
Sub-Section Id :	864351399
Question Shuffling Allowed :	Yes

Question Number : 31 Question Id : 8643515971 Question Type : MCQ Option Shuffling : Yes Is

Question Mandatory : No

Correct Marks : 4 Wrong Marks : 1

A hard substance melts at high temperature and is an insulator in both solid and in molten state. This solid is most likely to be a/an :

Options :

86435117911. Ionic solid

86435117912. Covalent solid

86435117913. Metallic solid

86435117914. Molecular solid

Question Number : 31 Question Id : 8643515971 Question Type : MCQ Option Shuffling : Yes Is

Question Mandatory : No

Correct Marks : 4 Wrong Marks : 1

એક સખત પદાર્થ ઊંચા તાપમાને પીગળે છે અને તે ઘન અને પીગળેલ બંને અવસ્થામાં અવાહક છે. તો આ ઘન મોટે ભાગે _____ છે.

Options :

86435117911. આયનિક ધન

86435117912. સહસંયોજક ધન

86435117913. ધાત્વીક ધન

86435117914. આણ્વીય ધન

Question Number : 32 Question Id : 8643515972 Question Type : MCQ Option Shuffling : Yes Is Question Mandatory : No

Correct Marks : 4 Wrong Marks : 1

Given below are two statements :

Statement I : Bohr's theory accounts for the stability and line spectrum of Li^+ ion.

Statement II : Bohr's theory was unable to explain the splitting of spectral lines in the presence of a magnetic field.

In the light of the above statements, choose the most appropriate answer from the options given below :

Options :

86435117915. Both statement I and statement II are true.

86435117916. Both statement I and statement II are false.

86435117917. Statement I is true but statement II is false.

86435117918. Statement I is false but statement II is true.

Question Number : 32 Question Id : 8643515972 Question Type : MCQ Option Shuffling : Yes Is Question Mandatory : No

Correct Marks : 4 Wrong Marks : 1

નીચે બે વિધાનો આપેલા છે.

વિધાન I : બ્લોર વાદ (શ્રીયરી) સ્થિરતાં અને Li^+ આયનનો રેખા વર્ણપટ માટે ઉત્તરદાયી છે.

વિધાન II : ચુંબકીય ક્ષેત્રની હાજરીમાં બ્લોર વાદ વર્ણપટ રેખાઓનું વિભાજન સમજાવી શકતો નથી.

ઉપરનાં વિધાનોનાં સંદર્ભમાં, નીચે આપેલા વિકલ્પોમાંથી સૌથી વધુ બંધબેસતો જવાબ પસંદ કરો.

Options :

86435117915. બંને વિધાન I અને વિધાન II સાચાં છે.

86435117916. બંને વિધાન I અને વિધાન II ખોટા છે.

86435117917. વિધાન I સાચું છે પણ વિધાન II ખોટું છે.

86435117918. વિધાન I ખોટું છે પણ વિધાન II સાચું છે.

Question Number : 33 Question Id : 8643515973 Question Type : MCQ Option Shuffling : Yes Is Question Mandatory : No

Correct Marks : 4 Wrong Marks : 1

The charges on the colloidal CdS sol and TiO_2 sol are, respectively :

Options :

86435117919. positive and positive

86435117920. negative and positive

86435117921. positive and negative

86435117922. negative and negative

Question Number : 33 Question Id : 8643515973 Question Type : MCQ Option Shuffling : Yes Is Question Mandatory : No

Correct Marks : 4 Wrong Marks : 1

CdS સોલ અને TiO_2 સોલમાં કલિલો ઉપરનો ભાર (Charges) અનુક્રમે શોધો.

Options :

86435117919. ધન અને ધન

86435117920. ઋણ અને ધન

86435117921. ધન અને ઋણ

86435117922. ઋણ અને ઋણ

Question Number : 34 Question Id : 8643515974 Question Type : MCQ Option Shuffling : Yes Is Question Mandatory : No Correct Marks : 4 Wrong Marks : 1

The first ionization energy of magnesium is smaller as compared to that of elements X and Y, but higher than that of Z. The elements X, Y and Z, respectively, are :

Options :

86435117923. argon, chlorine and sodium

86435117924. chlorine, lithium and sodium

86435117925. argon, lithium and sodium

86435117926. neon, sodium and chlorine

Question Number : 34 Question Id : 8643515974 Question Type : MCQ Option Shuffling : Yes Is Question Mandatory : No Correct Marks : 4 Wrong Marks : 1

X અને Y તત્વોની સરખામણીમાં મેગ્નેશીયમની પ્રથમ આયનીકરણ ઊર્જા ઓછી પણ Z કરતાં વધારે છે. તો તત્વો X, Y અને Z અનુક્રમે શોધો :

Options :

86435117923. આર્ગોન, ક્લોરીન અને સોડિયમ

86435117924. ક્લોરીન, લિથીયમ અને સોડિયમ

86435117925. આર્ગોન, લિથીયમ અને સોડિયમ

86435117926. નિયોન, સોડિયમ અને ક્લોરીન

Question Number : 35 Question Id : 8643515975 Question Type : MCQ Option Shuffling : Yes Is Question Mandatory : No Correct Marks : 4 Wrong Marks : 1

Match List - I with List - II :

List - I	List - II
(a) Mercury	(i) Vapour phase refining
(b) Copper	(ii) Distillation Refining
(c) Silicon	(iii) Electrolytic Refining
(d) Nickel	(iv) Zone Refining

Choose the most appropriate answer from the option given below :

Options :

86435117927. (a)-(ii), (b)-(iii), (c)-(iv), (d)-(i)

86435117928. (a)-(i), (b)-(iv), (c)-(ii), (d)-(iii)

86435117929. (a)-(ii), (b)-(iii), (c)-(i), (d)-(iv)

86435117930. (a)-(ii), (b)-(iv), (c)-(iii), (d)-(i)

Question Number : 35 Question Id : 8643515975 Question Type : MCQ Option Shuffling : Yes Is Question Mandatory : No

Correct Marks : 4 Wrong Marks : 1

સૂચિ - I સાથે સૂચિ - II ને જોડો.

સૂચિ - I	સૂચિ - II
(a) મરક્યુરિ	(i) બાષ્પ અવસ્થા શુદ્ધિકરણ
(b) કોપર	(ii) નિસ્ચંદન શુદ્ધિકરણ
(c) સિલીકોન	(iii) વિદ્યુતવિભાજ્ય શુદ્ધિકરણ
(d) નિકલ	(iv) ઝોન શુદ્ધિકરણ

નીચે આપેલા વિકલ્પોમાંથી સૌથી વધુ બંધબેસતો જવાબ પસંદ કરો.

Options :

86435117927. (a)-(ii), (b)-(iii), (c)-(iv), (d)-(i)

86435117928. (a)-(i), (b)-(iv), (c)-(ii), (d)-(iii)

86435117929. (a)-(ii), (b)-(iii), (c)-(i), (d)-(iv)

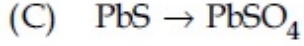
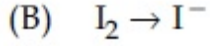
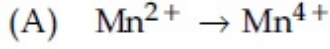
86435117930. (a)-(ii), (b)-(iv), (c)-(iii), (d)-(i)

Question Number : 36 Question Id : 8643515976 Question Type : MCQ Option Shuffling : Yes Is

Question Mandatory : No

Correct Marks : 4 Wrong Marks : 1

In basic medium, H_2O_2 exhibits which of the following reactions ?



Choose the most appropriate answer from the options given below :

Options :

86435117931. (A) only

86435117932. (B) only

86435117933. (A), (B) only

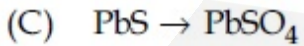
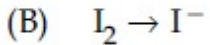
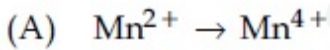
86435117934. (A), (C) only

Question Number : 36 Question Id : 8643515976 Question Type : MCQ Option Shuffling : Yes Is

Question Mandatory : No

Correct Marks : 4 Wrong Marks : 1

બેઝિક માધ્યમમાં, H_2O_2 નીચે આપેલ કઈ પ્રક્રિયાઓ પ્રદર્શિત કરે છે ?



નીચે આપેલા વિકલ્પોમાંથી સૌથી વધુ બંધબેસતો જવાબ પસંદ કરો.

Options :

86435117931. ફક્ત (A)

86435117932. ફક્ત (B)

86435117933. ફક્ત (A), (B)

86435117934. Be (A), (C)

Question Number : 37 Question Id : 8643515977 Question Type : MCQ Option Shuffling : Yes Is Question Mandatory : No

Correct Marks : 4 Wrong Marks : 1

Match List - I with List - II :

List - I	List - II
(a) Be	(i) treatment of cancer
(b) Mg	(ii) extraction of metals
(c) Ca	(iii) incendiary bombs and signals
(d) Ra	(iv) windows of X-ray tubes
	(v) bearings for motor engines.

Choose the most appropriate answer from the option given below :

Options :

86435117935. (a)-(iv), (b)-(iii), (c)-(ii), (d)-(i)

86435117936. (a)-(iii), (b)-(iv), (c)-(ii), (d)-(v)

86435117937. (a)-(iv), (b)-(iii), (c)-(i), (d)-(ii)

86435117938. (a)-(iii), (b)-(iv), (c)-(v), (d)-(ii)

Question Number : 37 Question Id : 8643515977 Question Type : MCQ Option Shuffling : Yes Is Question Mandatory : No

Correct Marks : 4 Wrong Marks : 1

સૂચિ - I સાથે સૂચિ - II ને જોડો.

સૂચિ - I	સૂચિ - II
(a) Be	(i) કેન્સરનો ઉપચાર
(b) Mg	(ii) ધાતુઓનું નિષ્કર્ષણ
(c) Ca	(iii) દહનકારી બોમ્બ અને સંકેતો (incendiary bombs and signals)
(d) Ra	(iv) X-કિરણ નળીની બારી (સ્લિટ)
	(v) મોટર એન્જિનો માટે બેરીંગ

નીચે આપેલા વિકલ્પોમાંથી સૌથી વધુ બંધબેસતો જવાબ પસંદ કરો.

Options :

86435117935. (a)-(iv), (b)-(iii), (c)-(ii), (d)-(i)

86435117936. (a)-(iii), (b)-(iv), (c)-(ii), (d)-(v)

86435117937. (a)-(iv), (b)-(iii), (c)-(i), (d)-(ii)

86435117938. (a)-(iii), (b)-(iv), (c)-(v), (d)-(ii)

Question Number : 38 Question Id : 8643515978 Question Type : MCQ Option Shuffling : Yes Is Question Mandatory : No

Correct Marks : 4 Wrong Marks : 1

The oxidation states of nitrogen in NO, NO₂, N₂O and NO₃⁻ are in the order of :

Options :

86435117939. NO > NO₂ > N₂O > NO₃⁻

86435117940. N₂O > NO₂ > NO > NO₃⁻

86435117941. NO₂ > NO₃⁻ > NO > N₂O

86435117942. NO₃⁻ > NO₂ > NO > N₂O

Question Number : 38 Question Id : 8643515978 Question Type : MCQ Option Shuffling : Yes Is Question Mandatory : No

Correct Marks : 4 Wrong Marks : 1

NO, NO₂, N₂O અને NO₃⁻ માં નાઈટ્રોજનની ઓક્સિડેશન અવસ્થા ક્રમમાં શોધો.

Options :

86435117939. NO > NO₂ > N₂O > NO₃⁻

86435117940. N₂O > NO₂ > NO > NO₃⁻

86435117941. NO₂ > NO₃⁻ > NO > N₂O

86435117942. NO₃⁻ > NO₂ > NO > N₂O

Question Number : 39 Question Id : 8643515979 Question Type : MCQ Option Shuffling : Yes Is Question Mandatory : No

Correct Marks : 4 Wrong Marks : 1

The oxide that shows magnetic property is :

Options :

86435117943. SiO₂

86435117944. Mn₃O₄

86435117945. MgO

86435117946. Na₂O

Question Number : 39 Question Id : 8643515979 Question Type : MCQ Option Shuffling : Yes Is Question Mandatory : No

Correct Marks : 4 Wrong Marks : 1

એક ઓક્સાઈડ કે જે ચુંબકીય ગુણધર્મ પ્રદર્શિત કરે છે તે શોધો.

Options :

86435117943. SiO₂

86435117944. Mn₃O₄

86435117945. MgO

86435117946. Na₂O

Question Number : 40 Question Id : 8643515980 Question Type : MCQ Option Shuffling : Yes Is Question Mandatory : No

Correct Marks : 4 Wrong Marks : 1

The secondary valency and the number of hydrogen bonded water molecule(s) in CuSO₄·5H₂O, respectively, are :

Options :

86435117947. 4 and 1

86435117948. 6 and 4

86435117949. 5 and 1

86435117950. 6 and 5

Question Number : 40 Question Id : 8643515980 Question Type : MCQ Option Shuffling : Yes Is Question Mandatory : No

Correct Marks : 4 Wrong Marks : 1

CuSO₄·5H₂O માં દ્વિતીયક સંયોજકતા અને હાઈડ્રોજન બંધવાળા પાણી અણુ(ઓ) ની સંખ્યા અનુક્રમે શોધો.

Options :

86435117947. 4 અને 1

86435117948. 6 અને 4

86435117949. 5 અને 1

86435117950. 6 અને 5

Question Number : 41 Question Id : 8643515981 Question Type : MCQ Option Shuffling : Yes Is Question Mandatory : No

Correct Marks : 4 Wrong Marks : 1

Given below are two statements :

Statement I : Non-biodegradable wastes are generated by the thermal power plants.

Statement II : Bio-degradable detergents leads to eutrophication.

In the light of the above statements, choose the most appropriate answer from the options given below :

Options :

86435117951. Both statement I and statement II are true.

86435117952. Both statement I and statement II are false.

86435117953. Statement I is true but statement II is false.

86435117954. Statement I is false but statement II is true.

Question Number : 41 Question Id : 8643515981 Question Type : MCQ Option Shuffling : Yes Is

Question Mandatory : No

Correct Marks : 4 Wrong Marks : 1

નીચે બે વિધાનો આપેલા છે.

વિધાન I : ઉષ્મીય પાવર પ્લાન્ટ માંથી જૈવ-અવિઘટનીય કચરો ઉત્પન્ન થાય છે.

વિધાન II : જૈવ-વિઘટનીય પ્રક્ષાલકો સુપોષણ (eutrophication) તરફ દોરી જાય છે.

ઉપરનાં વિધાનોનાં સંદર્ભમાં, નીચે આપેલા વિકલ્પોમાંથી સૌથી વધુ બંધબેસતો જવાબ પસંદ કરો.

Options :

86435117951. બંને વિધાન I અને વિધાન II સાચાં છે.

86435117952. બંને વિધાન I અને વિધાન II ખોટા છે.

86435117953. વિધાન I સાચું છે પણ વિધાન II ખોટું છે.

86435117954. વિધાન I ખોટું છે પણ વિધાન II સાચું છે.

Question Number : 42 Question Id : 8643515982 Question Type : MCQ Option Shuffling : Yes Is

Question Mandatory : No

Correct Marks : 4 Wrong Marks : 1

Given below are two statements :

Statement I : C_2H_5OH and $AgCN$ both can generate nucleophile.

Statement II : KCN and $AgCN$ both will generate nitrile nucleophile with all reaction conditions.

Choose the most appropriate option :

Options :

86435117955. Both statement I and statement II are true.

86435117956. Both statement I and statement II are false.

86435117957. Statement I is true but statement II is false.

86435117958. Statement I is false but statement II is true.

Question Number : 42 Question Id : 8643515982 Question Type : MCQ Option Shuffling : Yes Is

Question Mandatory : No

Correct Marks : 4 Wrong Marks : 1

નીચે બે વિધાનો આપેલા છે.

વિધાન I : C_2H_5OH અને $AgCN$ બંને કેન્દ્રાનુરાગીનું નિર્માણ કરે છે.

વિધાન II : બધી પ્રક્રિયા પરિસ્થિતિઓ સાથે KCN અને $AgCN$ બંને નાઈટ્રાઈલ કેન્દ્રાનુરાગીનું નિર્માણ કરે છે.

સૌથી વધુ બંધબેસતો વિકલ્પ પસંદ કરો.

Options :

86435117955. બંને વિધાન I અને વિધાન II સાચાં છે.

86435117956. બંને વિધાન I અને વિધાન II ખોટા છે.

86435117957. વિધાન I સાચું છે પણ વિધાન II ખોટું છે.

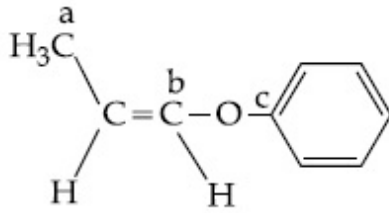
86435117958. વિધાન I ખોટું છે પણ વિધાન II સાચું છે.

Question Number : 43 Question Id : 8643515983 Question Type : MCQ Option Shuffling : Yes Is

Question Mandatory : No

Correct Marks : 4 Wrong Marks : 1

In the following molecule,



Hybridisation of Carbon a, b and c respectively are :

Options :

86435117959. sp^3, sp^2, sp^2

86435117960. sp^3, sp^2, sp

86435117961. sp^3, sp, sp

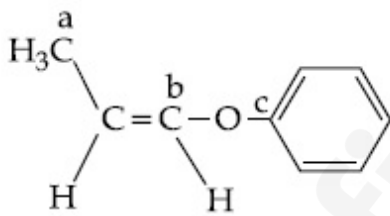
86435117962. sp^3, sp, sp^2

Question Number : 43 Question Id : 8643515983 Question Type : MCQ Option Shuffling : Yes Is

Question Mandatory : No

Correct Marks : 4 Wrong Marks : 1

નીચે આપેલા અણુમાં,



કાર્બન a, b અને c નું સંકરણ અનુક્રમે શોધો.

Options :

86435117959. sp^3, sp^2, sp^2

86435117960. sp^3, sp^2, sp

86435117961. sp^3, sp, sp

86435117962. sp^3, sp, sp^2

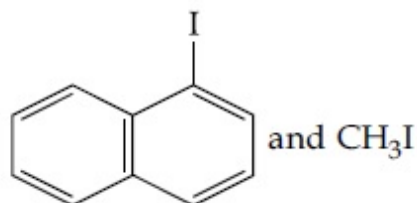
Question Number : 44 Question Id : 8643515984 Question Type : MCQ Option Shuffling : Yes Is

Question Mandatory : No

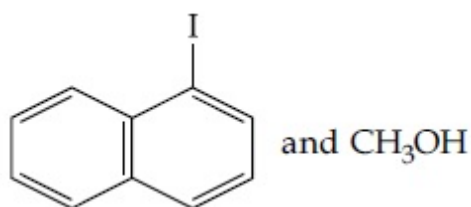
Correct Marks : 4 Wrong Marks : 1

Main Products formed during a reaction of 1-methoxy naphthalene with hydroiodic acid are :

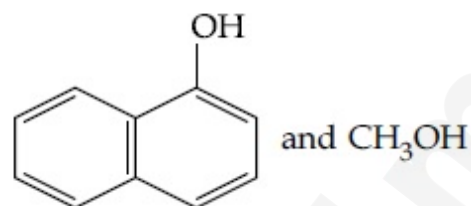
Options :



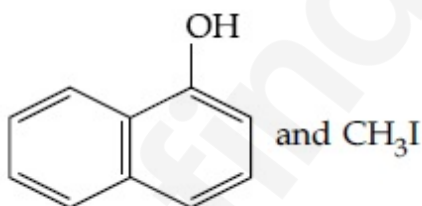
86435117963.



86435117964.



86435117965.



86435117966.

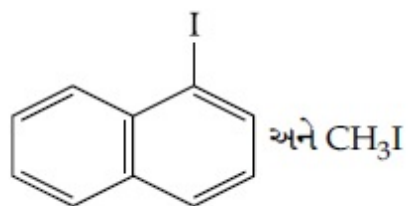
Question Number : 44 Question Id : 8643515984 Question Type : MCQ Option Shuffling : Yes Is

Question Mandatory : No

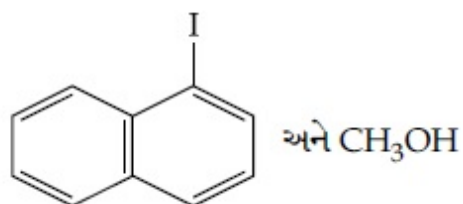
Correct Marks : 4 Wrong Marks : 1

1-મિથોક્સી નેપ્થેલીન સાથેની હાઈડ્રો આયોડિક એસિડની પ્રક્રિયા ઇદરમ્યાન બનતી મુખ્ય નીપજો શોધો.

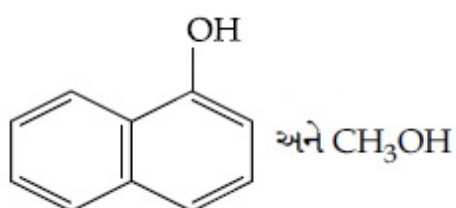
Options :



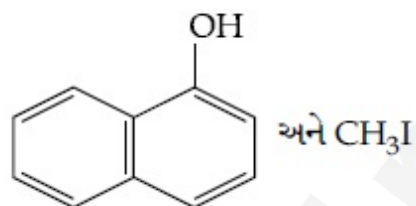
86435117963.



86435117964.



86435117965.



86435117966.

Question Number : 45 Question Id : 8643515985 Question Type : MCQ Option Shuffling : Yes Is Question Mandatory : No

Correct Marks : 4 Wrong Marks : 1

In the reaction of hypobromite with amide, the carbonyl carbon is lost as :

Options :

86435117967. CO

86435117968. CO_2 86435117969. CO_3^{2-} 86435117970. HCO_3^-

Question Number : 45 Question Id : 8643515985 Question Type : MCQ Option Shuffling : Yes Is

Question Mandatory : No

Correct Marks : 4 Wrong Marks : 1

હાઈપોબ્રોમાઈટ સાથે એમાઈડની પ્રક્રિયામાં, કાર્બોનીલ કાર્બન એક તરફે દૂર થાય છે તે :

Options :

86435117967. CO

86435117968. CO_2

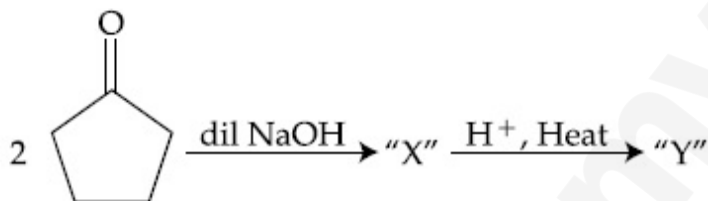
86435117969. CO_3^{2-}

86435117970. HCO_3^-

Question Number : 46 Question Id : 8643515986 Question Type : MCQ Option Shuffling : Yes Is

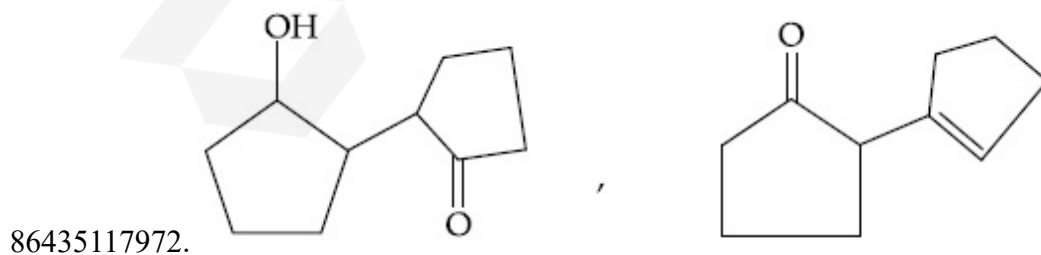
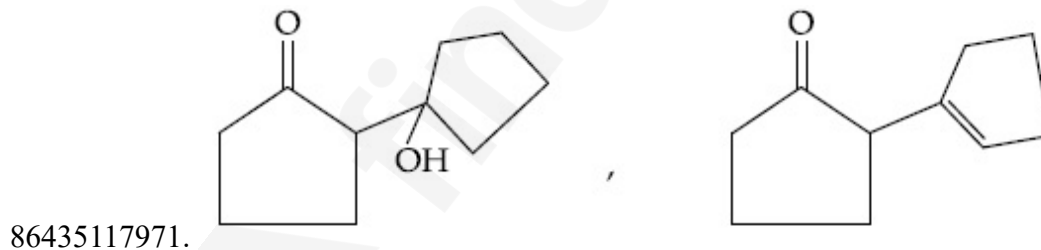
Question Mandatory : No

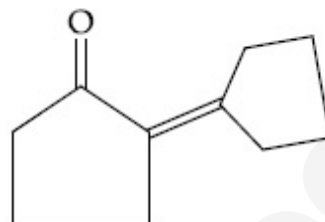
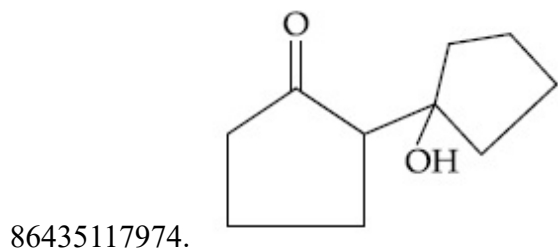
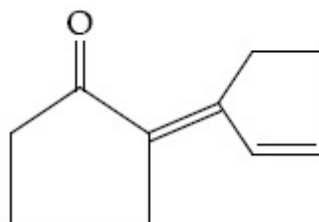
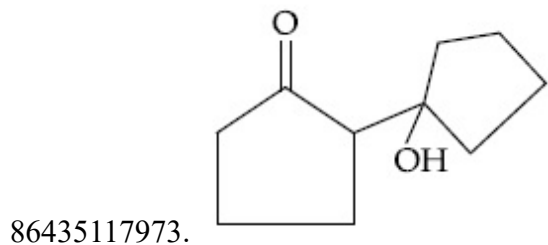
Correct Marks : 4 Wrong Marks : 1



Consider the above reaction, the product 'X' and 'Y' respectively are :

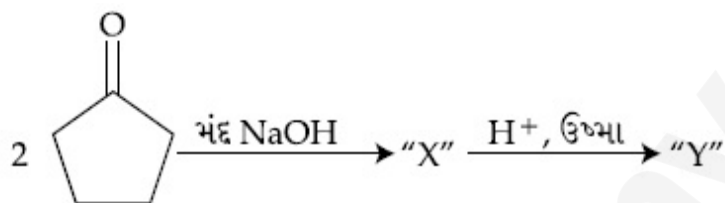
Options :





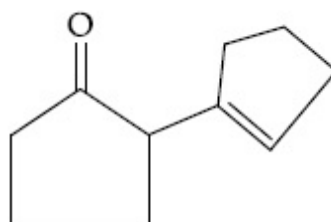
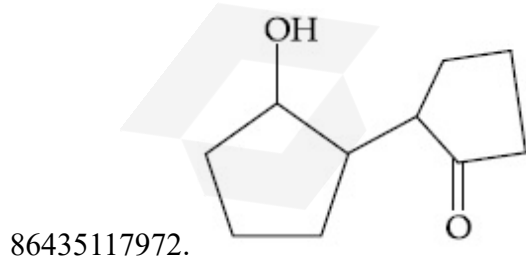
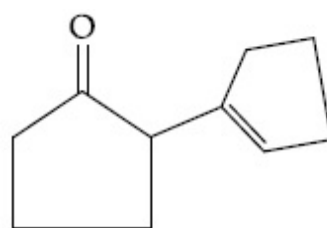
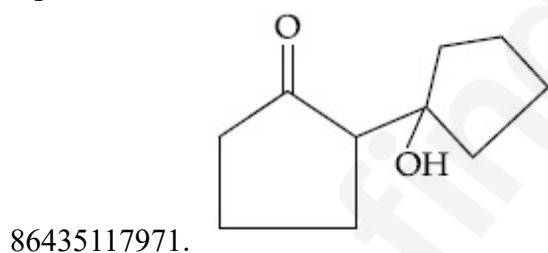
Question Number : 46 Question Id : 8643515986 Question Type : MCQ Option Shuffling : Yes Is Question Mandatory : No

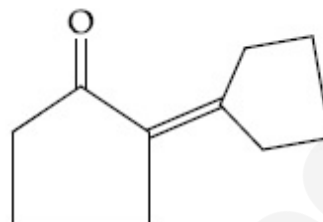
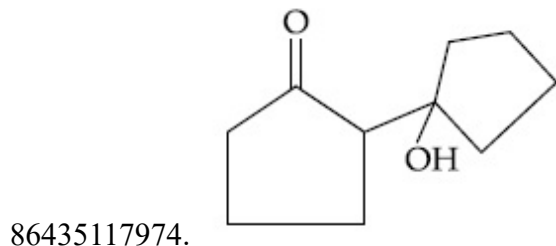
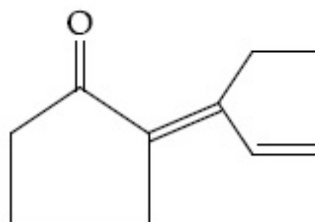
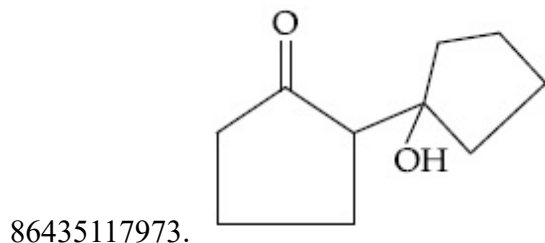
Correct Marks : 4 Wrong Marks : 1



ઉપરની પ્રક્રિયાને ધ્યાનમાં લો. નીચે 'X' અને 'Y' અનુક્રમે શોધો.

Options :



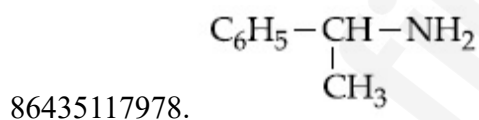
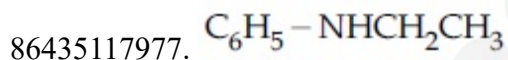
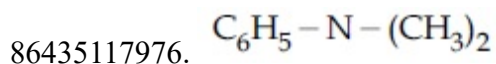
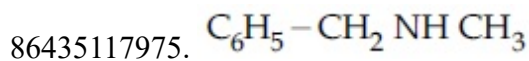


Question Number : 47 Question Id : 8643515987 Question Type : MCQ Option Shuffling : Yes Is Question Mandatory : No

Correct Marks : 4 Wrong Marks : 1

An organic compound "A" on treatment with benzene sulphonyl chloride gives compound B. B is soluble in dil. NaOH solution. Compound A is :

Options :

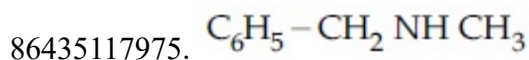


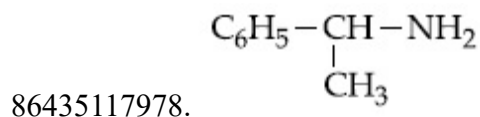
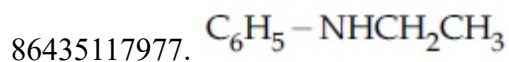
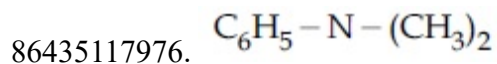
Question Number : 47 Question Id : 8643515987 Question Type : MCQ Option Shuffling : Yes Is Question Mandatory : No

Correct Marks : 4 Wrong Marks : 1

એક કાર્બનિક સંયોજન "A" ની બેન્ઝિન સલ્ફોનાઈલ ક્લોરાઈડ સાથે પ્રક્રિયા કરતાં સંયોજન B આપે છે. B એ મંદ NaOH ના દ્રાવણમાં દ્રાવ્ય થાય છે. સંયોજન A શોધો.

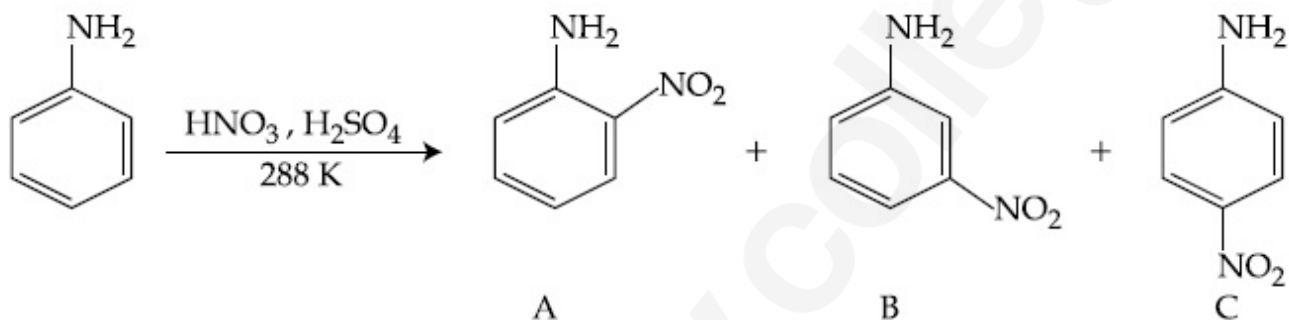
Options :






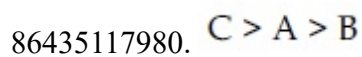
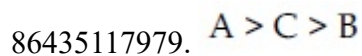
Question Number : 48 Question Id : 8643515988 Question Type : MCQ Option Shuffling : Yes Is Question Mandatory : No

Correct Marks : 4 Wrong Marks : 1



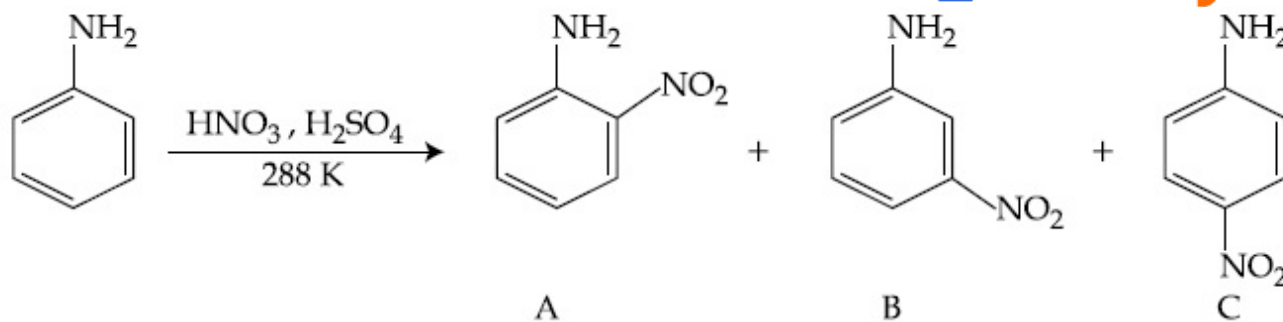
Consider the given reaction, percentage yield of :

Options :



Question Number : 48 Question Id : 8643515988 Question Type : MCQ Option Shuffling : Yes Is Question Mandatory : No

Correct Marks : 4 Wrong Marks : 1



આપેલ પ્રક્રિયાને ધ્યાનમાં લો. નીચેજ ટકાવારી શોધો.

Options :

86435117979. A > C > B

86435117980. C > A > B

86435117981. B > C > A

86435117982. C > B > A

Question Number : 49 Question Id : 8643515989 Question Type : MCQ Option Shuffling : Yes Is

Question Mandatory : No

Correct Marks : 4 Wrong Marks : 1

Match List - I with List - II :

List - I (Class of Chemicals)	List - II (Example)
(a) Antifertility drug	(i) Meprobamate
(b) Antibiotic	(ii) Alitame
(c) Tranquilizer	(iii) Norethindrone
(d) Artificial Sweetener	(iv) Salvarsan

Choose the most appropriate match :

Options :

86435117983. (a)-(iv), (b)-(iii), (c)-(ii), (d)-(i)

86435117984. (a)-(ii), (b)-(iii), (c)-(iv), (d)-(i)

86435117985. (a)-(iii), (b)-(iv), (c)-(i), (d)-(ii)

86435117986. (a)-(ii), (b)-(iv), (c)-(i), (d)-(iii)

Question Number : 49 Question Id : 8643515989 Question Type : MCQ Option Shuffling : Yes Is

Question Mandatory : No

Correct Marks : 4 Wrong Marks : 1

સૂચિ - I સાથે સૂચિ - II ને જોડો.

સૂચિ - I	સૂચિ - II
(રસાયણોનો વર્ગ)	(ઉદાહરણ)
(a) ગર્ભનિરોધક ઔષધ	(i) મેપ્રોબામેટ
(b) પ્રતિજીવીઓ	(ii) એલિટેમ
(c) પ્રશાંતકો	(iii) નોરએથિન્ડ્રોન
(d) કૃત્રિમ ગળ્યા પદાર્થ	(iv) સાલ્વરસેન

સૌથી વધુ બંધબેસતો વિકલ્પ પસંદ કરો.

Options :

86435117983. (a)-(iv), (b)-(iii), (c)-(ii), (d)-(i)

86435117984. (a)-(ii), (b)-(iii), (c)-(iv), (d)-(i)

86435117985. (a)-(iii), (b)-(iv), (c)-(i), (d)-(ii)

86435117986. (a)-(ii), (b)-(iv), (c)-(i), (d)-(iii)

Question Number : 50 Question Id : 8643515990 Question Type : MCQ Option Shuffling : Yes Is

Question Mandatory : No

Correct Marks : 4 Wrong Marks : 1

Deficiency of vitamin K causes :

Options :

86435117987. Increase in blood clotting time

86435117988. Decrease in blood clotting time

86435117989. Cheilosis

86435117990. Increase in fragility of RBC's

Question Number : 50 Question Id : 8643515990 Question Type : MCQ Option Shuffling : Yes Is Question Mandatory : No

Correct Marks : 4 Wrong Marks : 1

વિટામીન K ની ઊણપનાં કારણે થાય તે _____

Options :

86435117987. લોહી જામવાનાં (ગંઠાઈ) સમયમાં વધારો

86435117988. લોહી જામવાનાં સમયમાં ઘટાડો

86435117989. કાઈલોસીસ (Cheilosis)

86435117990. RBC નાં તૂટવામાં વધારો

Chemistry Section B

Section Id :	864351400
Section Number :	4
Section type :	Online
Mandatory or Optional :	Mandatory
Number of Questions :	10
Number of Questions to be attempted :	5
Section Marks :	20
Mark As Answered Required? :	Yes
Sub-Section Number :	1
Sub-Section Id :	864351400
Question Shuffling Allowed :	Yes

Question Number : 51 Question Id : 8643515991 Question Type : SA Correct Marks : 4 Wrong Marks : 0

10.0 mL of Na_2CO_3 solution is titrated against 0.2 M HCl solution. The following titre values were obtained in 5 readings :

4.8 mL, 4.9 mL, 5.0 mL, 5.0 mL and 5.0 mL.

Based on these readings, and convention of titrimetric estimation the concentration of Na_2CO_3 solution is _____ mM.

(Round off to the Nearest Integer).

Response Type : Numeric

Evaluation Required For SA : Yes

Show Word Count : Yes

Answers Type : Equal

Text Areas : PlainText

Possible Answers :

100

Question Number : 51 **Question Id :** 8643515991 **Question Type :** SA

Correct Marks : 4 **Wrong Marks :** 0

10.0 mL Na_2CO_3 નાં દ્રાવણ વિરુદ્ધ 0.2 M HCl નાં દ્રાવણનું અનુમાપન કરવામાં આવે છે. નીચે પ્રમાણે અનુમાપિત મૂલ્યોનાં 5 માપનો (reading) મેળવવામાં આવ્યા.

4.8 mL, 4.9 mL, 5.0 mL, 5.0 mL અને 5.0 mL.

આ માપનો ને આધારે અને અનુમાપિત પરિમાપન ની પરંપરા પરથી Na_2CO_3 દ્રાવણની સાંદ્રતા _____ mM થશે.

Response Type : Numeric

Evaluation Required For SA : Yes

Show Word Count : Yes

Answers Type : Equal

Text Areas : PlainText

Possible Answers :

100

Question Number : 52 **Question Id :** 8643515992 **Question Type :** SA

Correct Marks : 4 **Wrong Marks :** 0

The number of species below that have two lone pairs of electrons in their central atom is _____. (Round off to the Nearest Integer).

SF_4 , BF_4^- , ClF_3 , AsF_3 , PCl_5 , BrF_5 , XeF_4 , SF_6

Response Type : Numeric

Evaluation Required For SA : Yes

Show Word Count : Yes

Answers Type : Equal

Text Areas : PlainText

Possible Answers :

100

Question Number : 52 Question Id : 8643515992 Question Type : SA

Correct Marks : 4 Wrong Marks : 0

જેમાં મધ્યસ્થ પરમાણુ બે અબંધકારક ઈલેક્ટ્રોનનાં યુગ્મો ધરાવે છે તેવા નીચે આપેલ આણુઓની સંખ્યા _____ છે. (નજીકનાં પૂર્ણાંકમાં રાઉન્ડ ઓફ કરો)

SF_4 , BF_4^- , ClF_3 , AsF_3 , PCl_5 , BrF_5 , XeF_4 , SF_6

Response Type : Numeric

Evaluation Required For SA : Yes

Show Word Count : Yes

Answers Type : Equal

Text Areas : PlainText

Possible Answers :

100

Question Number : 53 Question Id : 8643515993 Question Type : SA

Correct Marks : 4 Wrong Marks : 0

The gas phase reaction



at 400 K has $\Delta G^\circ = +25.2 \text{ kJ mol}^{-1}$.

The equilibrium constant K_C for this reaction is _____ $\times 10^{-2}$. (Round off to the Nearest Integer).

[Use : $R = 8.3 \text{ J mol}^{-1} \text{ K}^{-1}$, $\ln 10 = 2.3$

$\log_{10} 2 = 0.30$, $1 \text{ atm} = 1 \text{ bar}$]

[antilog $(-0.3) = 0.501$]

Response Type : Numeric

Evaluation Required For SA : Yes

Show Word Count : Yes

Answers Type : Equal

Text Areas : PlainText

Possible Answers :

100

Question Number : 53 Question Id : 8643515993 Question Type : SA

Correct Marks : 4 Wrong Marks : 0

વાયુ અવસ્થા પ્રક્રિયા



400 K પર $\Delta G^\circ = +25.2 \text{ kJ mol}^{-1}$ છે.

આ પ્રક્રિયા માટે સંતુલન અચળાંક K_C _____ $\times 10^{-2}$ છે. (નજીકનાં પૂર્ણાંકમાં રાઉન્ડ ઓફ કરો)

[ઉપયોગ : $R = 8.3 \text{ J mol}^{-1} \text{ K}^{-1}$, $\ln 10 = 2.3$

$\log_{10} 2 = 0.30$, $1 \text{ atm} = 1 \text{ bar}$]

[એન્ટીલોગ $(-0.3) = 0.501$]

Response Type : Numeric

Evaluation Required For SA : Yes

Show Word Count : Yes

Answers Type : Equal

Text Areas : PlainText

Possible Answers :

100

Question Number : 54 **Question Id :** 8643515994 **Question Type :** SA

Correct Marks : 4 **Wrong Marks :** 0

A solute A dimerizes in water. The boiling point of a 2 molal solution of A is 100.52°C . The percentage association of A is _____. (Round off to the Nearest Integer).

[Use : K_b for water = $0.52 \text{ K kg mol}^{-1}$

Boiling point of water = 100°C]

Response Type : Numeric

Evaluation Required For SA : Yes

Show Word Count : Yes

Answers Type : Equal

Text Areas : PlainText

Possible Answers :

100

Question Number : 54 **Question Id :** 8643515994 **Question Type :** SA

Correct Marks : 4 **Wrong Marks :** 0

એક દ્રાવ્ય A નો પાણીમાં ડાયમર બને છે. A નાં 2 મોલલ દ્રાવણનું ઉત્કલનબિંદુ 100.52°C છે. તો A નું ટકાવારી સંયોજન _____ છે. (નજીકનાં પૂર્ણાંકમાં રાઉન્ડ ઓફ કરો)

[ઉપયોગ : પાણી માટે $K_b = 0.52 \text{ K kg mol}^{-1}$

પાણીનું ઉત્કલનબિંદુ = 100°C]

Response Type : Numeric

Evaluation Required For SA : Yes

Show Word Count : Yes

Answers Type : Equal

Text Areas : PlainText

Possible Answers :

100

Question Number : 55 **Question Id :** 8643515995 **Question Type :** SA

Correct Marks : 4 **Wrong Marks :** 0

The solubility of CdSO_4 in water is $8.0 \times 10^{-4} \text{ mol L}^{-1}$. Its solubility in 0.01 M H_2SO_4 solution is _____ $\times 10^{-6} \text{ mol L}^{-1}$. (Round off to the Nearest Integer).

(Assume that solubility is much less than 0.01 M)

Response Type : Numeric

Evaluation Required For SA : Yes

Show Word Count : Yes

Answers Type : Equal

Text Areas : PlainText

Possible Answers :

100

Question Number : 55 **Question Id :** 8643515995 **Question Type :** SA

Correct Marks : 4 **Wrong Marks :** 0

CdSO_4 ની પાણીમાં દ્રાવ્યતાં $8.0 \times 10^{-4} \text{ mol L}^{-1}$ છે. તો તેની 0.01 M H_2SO_4 દ્રાવણમાં દ્રાવ્યતાં _____ $\times 10^{-6} \text{ mol L}^{-1}$ છે. (નજીકનાં પૂર્ણાંકમાં રાઉન્ડ ઓફ કરો)

(ધારી તો કે દ્રાવ્યતાં 0.01 M કરતાં પણ ખૂબ જ ઓછી છે)

Response Type : Numeric

Evaluation Required For SA : Yes

Show Word Count : Yes

Answers Type : Equal

Text Areas : PlainText

Possible Answers :

100

Question Number : 56 **Question Id :** 8643515996 **Question Type :** SA

Correct Marks : 4 **Wrong Marks :** 0

The molar conductivities at infinite dilution of barium chloride, sulphuric acid and hydrochloric acid are 280, 860 and 426 S cm² mol⁻¹ respectively. The molar conductivity at infinite dilution of barium sulphate is _____ S cm² mol⁻¹. (Round off to the Nearest Integer).

Response Type : Numeric

Evaluation Required For SA : Yes

Show Word Count : Yes

Answers Type : Equal

Text Areas : PlainText

Possible Answers :

100

Question Number : 56 **Question Id :** 8643515996 **Question Type :** SA

Correct Marks : 4 **Wrong Marks :** 0

બેરિયમ ક્લોરાઇડ, સલ્ફ્યુરિક એસિડ અને હાઇડ્રોક્લોરીક એસિડની અનંત મંદતા એ મોલર વાહકતાઓ અનુક્રમે 280, 860 અને 426 S cm² mol⁻¹ છે. તો અનંત મંદતાએ બેરિયમ સલ્ફેટની મોલર વાહકતા _____ S cm² mol⁻¹ છે. (નજીકનાં પૂર્ણાંકમાં રાઉન્ડ ઓફ કરો)

Response Type : Numeric

Evaluation Required For SA : Yes

Show Word Count : Yes

Answers Type : Equal

Text Areas : PlainText

Possible Answers :

100

Question Number : 57 **Question Id :** 8643515997 **Question Type :** SA

Correct Marks : 4 **Wrong Marks :** 0

A reaction has a half life of 1 min. The time required for 99.9% completion of the reaction is _____ min. (Round off to the Nearest Integer).

[Use : ln 2 = 0.69; ln 10 = 2.3]

Response Type : Numeric

Evaluation Required For SA : Yes

Show Word Count : Yes

Answers Type : Equal

Text Areas : PlainText

Possible Answers :

100

Question Number : 57 **Question Id :** 8643515997 **Question Type :** SA

Correct Marks : 4 Wrong Marks : 0

એક પ્રક્રિયા 1 min. નો અર્ધ આયુષ્ય ધરાવે છે. તો પ્રક્રિયાને 99.9% પૂરી થવા માટે લાગતો જરૂરી સમય _____ min. છે. (નજીકનાં પૂર્ણાંકમાં રાઉન્ડ ઓફ કરો)

[ઉપયોગ : $\ln 2 = 0.69$; $\ln 10 = 2.3$]

Response Type : Numeric

Evaluation Required For SA : Yes

Show Word Count : Yes

Answers Type : Equal

Text Areas : PlainText

Possible Answers :

100

Question Number : 58 Question Id : 8643515998 Question Type : SA

Correct Marks : 4 Wrong Marks : 0

A xenon compound 'A' upon partial hydrolysis gives XeO_2F_2 . The number of lone pair of electrons present in compound A is _____. (Round off to the Nearest Integer)

Response Type : Numeric

Evaluation Required For SA : Yes

Show Word Count : Yes

Answers Type : Equal

Text Areas : PlainText

Possible Answers :

100

Question Number : 58 Question Id : 8643515998 Question Type : SA

Correct Marks : 4 Wrong Marks : 0

એક એનોન સંયોજન 'A' નું આંશિક જળવિભાજન કરતાં તે XeO_2F_2 આપે છે. તો સંયોજન A માં હાજર ઈલેક્ટ્રોનનાં અબંધકારક યુગ્મોની સંખ્યા _____ છે. (પૂર્ણાંક જવાબ)

Response Type : Numeric

Evaluation Required For SA : Yes

Show Word Count : Yes

Answers Type : Equal

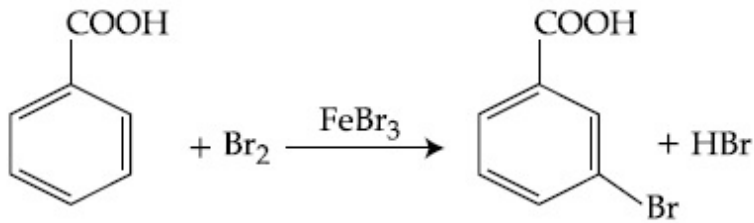
Text Areas : PlainText

Possible Answers :

100

Question Number : 59 Question Id : 8643515999 Question Type : SA

Correct Marks : 4 Wrong Marks : 0



Consider the above reaction where 6.1 g of Benzoic acid is used to get 7.8 g of m-bromo benzoic acid. The percentage yield of the product is _____.

(Round off to the Nearest Integer).

[Given : Atomic masses : C : 12.0 u, H : 1.0 u, O : 16.0 u, Br : 80.0 u]

Response Type : Numeric

Evaluation Required For SA : Yes

Show Word Count : Yes

Answers Type : Equal

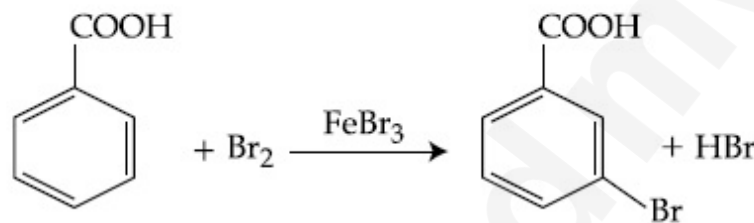
Text Areas : PlainText

Possible Answers :

100

Question Number : 59 **Question Id :** 8643515999 **Question Type :** SA

Correct Marks : 4 **Wrong Marks :** 0



ઉપરની પ્રક્રિયાને ધ્યાનમાં લો. 7.8 g m-બ્રોમો બેન્ઝોઈક મેળવવા માટે 6.1 g બેન્ઝોઈકનો ઉપયોગ કરવામાં આવ્યો. નીપજની ટકાવારી નીપજ _____ છે. (નજીકનાં પૂર્ણાંકમાં રાઉન્ડ ઓફ કરો)

[પરમાણ્વીય દળ : C : 12.0 u, H : 1.0 u, O : 16.0 u, Br : 80.0 u]

Response Type : Numeric

Evaluation Required For SA : Yes

Show Word Count : Yes

Answers Type : Equal

Text Areas : PlainText

Possible Answers :

100

Question Number : 60 **Question Id :** 8643516000 **Question Type :** SA

Correct Marks : 4 **Wrong Marks :** 0

In Tollen's test for aldehyde, the overall number of electron(s) transferred to the Tollen's reagent formula $[\text{Ag}(\text{NH}_3)_2]^+$ per aldehyde group to form silver mirror is _____.
(Round off to the Nearest Integer).

Response Type : Numeric

Evaluation Required For SA : Yes

Show Word Count : Yes

Answers Type : Equal

Text Areas : PlainText

Possible Answers :

100

Question Number : 60 **Question Id :** 8643516000 **Question Type :** SA

Correct Marks : 4 **Wrong Marks :** 0

આલ્ડીહાઈડ માટે ટોલેન્સ કસોટીમાં, રજત દર્ષણ બનવા માટે ટોલેન્સ પ્રક્રિયક સૂત્ર $[\text{Ag}(\text{NH}_3)_2]^+$ માં સ્થળાંતર (પરિવહન) થતાં ઇલેક્ટ્રોન(નો) ની સમગ્ર સંખ્યા પર આલ્ડીહાઈડ સમૂહ _____ છે.

Response Type : Numeric

Evaluation Required For SA : Yes

Show Word Count : Yes

Answers Type : Equal

Text Areas : PlainText

Possible Answers :

100

Mathematics Section A

Section Id :	864351401
Section Number :	5
Section type :	Online
Mandatory or Optional :	Mandatory
Number of Questions :	20
Number of Questions to be attempted :	20
Section Marks :	80
Mark As Answered Required? :	Yes
Sub-Section Number :	1
Sub-Section Id :	864351401
Question Shuffling Allowed :	Yes

Question Number : 61 **Question Id :** 8643516001 **Question Type :** MCQ **Option Shuffling :** Yes **Is**

Question Mandatory : No

Correct Marks : 4 **Wrong Marks :** 1

If $15\sin^4\alpha + 10\cos^4\alpha = 6$, for some $\alpha \in \mathbb{R}$, then the value of $27\sec^6\alpha + 8\operatorname{cosec}^6\alpha$ is equal to :

Options :

86435118001. 500

86435118002. 400

86435118003. 350

86435118004. 250

Question Number : 61 Question Id : 8643516001 Question Type : MCQ Option Shuffling : Yes Is Question Mandatory : No

Correct Marks : 4 Wrong Marks : 1

કોઈ $\alpha \in \mathbb{R}$ માટે, જો $15\sin^4\alpha + 10\cos^4\alpha = 6$ હોય, તો $27\sec^6\alpha + 8\operatorname{cosec}^6\alpha$ નું મૂલ્ય _____ છે.

Options :

86435118001. 500

86435118002. 400

86435118003. 350

86435118004. 250

Question Number : 62 Question Id : 8643516002 Question Type : MCQ Option Shuffling : Yes Is Question Mandatory : No

Correct Marks : 4 Wrong Marks : 1

If P and Q are two statements, then which of the following compound statement is a tautology ?

Options :

86435118005. $((P \Rightarrow Q) \wedge \sim Q) \Rightarrow P$

86435118006. $((P \Rightarrow Q) \wedge \sim Q) \Rightarrow Q$

86435118007. $((P \Rightarrow Q) \wedge \sim Q) \Rightarrow \sim P$

86435118008. $((P \Rightarrow Q) \wedge \sim Q) \Rightarrow (P \wedge Q)$

Question Number : 62 Question Id : 8643516002 Question Type : MCQ Option Shuffling : Yes Is

Question Mandatory : No

Correct Marks : 4 Wrong Marks : 1

જો P અને Q બે વિધાનો હોય, તો નીચેનામાંથી કયું મિશ્ર વિધાન નિત્યસત્ય છે ?

Options :

86435118005. $((P \Rightarrow Q) \wedge \sim Q) \Rightarrow P$

86435118006. $((P \Rightarrow Q) \wedge \sim Q) \Rightarrow Q$

86435118007. $((P \Rightarrow Q) \wedge \sim Q) \Rightarrow \sim P$

86435118008. $((P \Rightarrow Q) \wedge \sim Q) \Rightarrow (P \wedge Q)$

Question Number : 63 Question Id : 8643516003 Question Type : MCQ Option Shuffling : Yes Is

Question Mandatory : No

Correct Marks : 4 Wrong Marks : 1

A pole stands vertically inside a triangular park ABC. Let the angle of elevation of the top of the pole from each corner of the park be $\frac{\pi}{3}$. If the radius of the circumcircle of ΔABC is 2, then the height of the pole is equal to :

Options :

86435118009. $\frac{2\sqrt{3}}{3}$

86435118010. $2\sqrt{3}$

86435118011. $\frac{1}{\sqrt{3}}$

86435118012. $\sqrt{3}$

Question Number : 63 Question Id : 8643516003 Question Type : MCQ Option Shuffling : Yes Is

Question Mandatory : No

Correct Marks : 4 Wrong Marks : 1

ત્રિકોણાકાર બાજુ ABC ની અંદર એક થાંભલો લંબ સ્થિતિમાં છે. ધારો કે બાજુનાં દરેક ખૂણા પરથી થાંભલાની ટોચનો

ઉત્સેધ કોણ $\frac{\pi}{3}$ છે. જો ΔABC નાં પરિવૃત્તની ત્રિજ્યા 2 હોય, તો થાંભલાની ઊંચાઈ _____ છે.

Options :

86435118009. $\frac{2\sqrt{3}}{3}$

86435118010. $2\sqrt{3}$

86435118011. $\frac{1}{\sqrt{3}}$

86435118012. $\sqrt{3}$

Question Number : 64 Question Id : 8643516004 Question Type : MCQ Option Shuffling : Yes Is

Question Mandatory : No

Correct Marks : 4 Wrong Marks : 1

Let in a series of $2n$ observations, half of them are equal to a and remaining half are equal to $-a$. Also by adding a constant b in each of these observations, the mean and standard deviation of new set become 5 and 20, respectively. Then the value of $a^2 + b^2$ is equal to :

Options :

86435118013. 925

86435118014. 425

86435118015. 650

86435118016. 250

Question Number : 64 Question Id : 8643516004 Question Type : MCQ Option Shuffling : Yes Is

Question Mandatory : No

Correct Marks : 4 Wrong Marks : 1

ધારો કે $2n$ અવલોકનોની શ્રેણીમાંના અડધા બરાબર a છે અને બાકીનાં અડધા બરાબર $-a$ છે. વળી આ દરેક અવલોકનોમાં અચળ b ઉમેરતાં નવા ગણનાં મધ્યક તથા પ્રમાણિત વિચલન અનુક્રમે 5 અને 20 બને છે. તો $a^2 + b^2$ નું મૂલ્ય _____ થાય.

Options :

86435118013. 925

86435118014. 425

86435118015. 650

86435118016. 250

Question Number : 65 Question Id : 8643516005 Question Type : MCQ Option Shuffling : Yes Is Question Mandatory : No

Correct Marks : 4 Wrong Marks : 1

Let in a Binomial distribution, consisting of 5 independent trials, probabilities of exactly 1 and 2 successes be 0.4096 and 0.2048 respectively. Then the probability of getting exactly 3 successes is equal to :

Options :

86435118017. $\frac{40}{243}$

86435118018. $\frac{80}{243}$

86435118019. $\frac{128}{625}$

86435118020. $\frac{32}{625}$

Question Number : 65 Question Id : 8643516005 Question Type : MCQ Option Shuffling : Yes Is Question Mandatory : No

Correct Marks : 4 Wrong Marks : 1

5 નિરપેક્ષ પ્રયત્નો સમાવતા દ્વિપદી વિતરણમાં ધારો કે બરાબર 1 અને 2 સફળતાની સંભાવનાઓ અનુક્રમે 0.4096 અને 0.2048 છે. તો બરાબર 3 સફળતા મળવાની સંભાવના _____ છે.

Options :

86435118017. $\frac{40}{243}$

$$86435118018. \frac{80}{243}$$

$$86435118019. \frac{128}{625}$$

$$86435118020. \frac{32}{625}$$

Question Number : 66 Question Id : 8643516006 Question Type : MCQ Option Shuffling : Yes Is Question Mandatory : No Correct Marks : 4 Wrong Marks : 1

In a triangle ABC, if $|\vec{BC}| = 8$, $|\vec{CA}| = 7$, $|\vec{AB}| = 10$, then the projection of the vector \vec{AB} on \vec{AC} is equal to :

Options :

$$86435118021. \frac{115}{16}$$

$$86435118022. \frac{85}{14}$$

$$86435118023. \frac{127}{20}$$

$$86435118024. \frac{25}{4}$$

Question Number : 66 Question Id : 8643516006 Question Type : MCQ Option Shuffling : Yes Is Question Mandatory : No Correct Marks : 4 Wrong Marks : 1

ત્રિકોણ ABC માં જો $|\vec{BC}| = 8$, $|\vec{CA}| = 7$ અને $|\vec{AB}| = 10$ હોય, તો સદિશ \vec{AB} નાં \vec{AC} પરનું પ્રક્ષેપ _____ છે.

Options :

$$86435118021. \frac{115}{16}$$

$$86435118022. \frac{85}{14}$$

$$86435118023. \frac{127}{20}$$

$$86435118024. \frac{25}{4}$$

Question Number : 67 Question Id : 8643516007 Question Type : MCQ Option Shuffling : Yes Is

Question Mandatory : No

Correct Marks : 4 Wrong Marks : 1

Let the centroid of an equilateral triangle ABC be at the origin. Let one of the sides of the equilateral triangle be along the straight line $x + y = 3$. If R and r be the radius of circumcircle and incircle respectively of ΔABC , then $(R + r)$ is equal to :

Options :

$$86435118025. 2\sqrt{2}$$

$$86435118026. \frac{9}{\sqrt{2}}$$

$$86435118027. 7\sqrt{2}$$

$$86435118028. 3\sqrt{2}$$

Question Number : 67 Question Id : 8643516007 Question Type : MCQ Option Shuffling : Yes Is

Question Mandatory : No

Correct Marks : 4 Wrong Marks : 1

ધારો કે સમબાજુ ત્રિકોણ ABC નું મધ્યકેન્દ્ર ઊગમબિંદુ પર છે. ધારો કે સમબાજુ ત્રિકોણની એક બાજુ સુરેખા $x + y = 3$ ને સમાંતર આવેલ છે. જો R અને r એ ΔABC નાં અનુક્રમે પરિવૃત્ત તથા અંતઃવૃત્તની ત્રિજ્યા હોય, તો $(R + r) =$

_____.

Options :

86435118025. $2\sqrt{2}$

86435118026. $\frac{9}{\sqrt{2}}$

86435118027. $7\sqrt{2}$

86435118028. $3\sqrt{2}$

Question Number : 68 Question Id : 8643516008 Question Type : MCQ Option Shuffling : Yes Is Question Mandatory : No Correct Marks : 4 Wrong Marks : 1

Let a tangent be drawn to the ellipse $\frac{x^2}{27} + y^2 = 1$ at $(3\sqrt{3}\cos\theta, \sin\theta)$ where $\theta \in \left(0, \frac{\pi}{2}\right)$.

Then the value of θ such that the sum of intercepts on axes made by this tangent is minimum is equal to :

Options :

86435118029. $\frac{\pi}{3}$

86435118030. $\frac{\pi}{6}$

86435118031. $\frac{\pi}{8}$

86435118032. $\frac{\pi}{4}$

Question Number : 68 Question Id : 8643516008 Question Type : MCQ Option Shuffling : Yes Is Question Mandatory : No Correct Marks : 4 Wrong Marks : 1

ધારો કે $(3\sqrt{3}\cos\theta, \sin\theta)$, જ્યાં $\theta \in (0, \frac{\pi}{2})$, પાસે ઉપલવ્ય $\frac{x^2}{27} + y^2 = 1$ ને સ્પર્શક દોરવામાં આવે છે. તો આ

સ્પર્શક દ્વારા અક્ષો સાથે બનાવેલ અંતઃખંડોનો સરવાળો ન્યૂનતમ થાય તેવી θ કિંમત _____ છે.

Options :

86435118029. $\frac{\pi}{3}$

86435118030. $\frac{\pi}{6}$

86435118031. $\frac{\pi}{8}$

86435118032. $\frac{\pi}{4}$

Question Number : 69 Question Id : 8643516009 Question Type : MCQ Option Shuffling : Yes Is

Question Mandatory : No

Correct Marks : 4 Wrong Marks : 1

Let $y=y(x)$ be the solution of the differential equation $\frac{dy}{dx} = (y+1)((y+1)e^{x^{2/2}-x})$,

$0 < x < 2.1$, with $y(2)=0$. Then the value of $\frac{dy}{dx}$ at $x=1$ is equal to :

Options :

86435118033. $\frac{e^{5/2}}{(1+e^2)^2}$

86435118034. $-\frac{2e^2}{(1+e^2)^2}$

86435118035. $\frac{5e^{1/2}}{(e^2+1)^2}$

$$\frac{-e^{3/2}}{(e^2 + 1)^2}$$

86435118036.

Question Number : 69 Question Id : 8643516009 Question Type : MCQ Option Shuffling : Yes Is Question Mandatory : No

Correct Marks : 4 Wrong Marks : 1

ધારો કે $y = y(x)$ એ વિકલ સમીકરણ $\frac{dy}{dx} = (y + 1) \left((y + 1)e^{x^2/2} - x \right)$, $0 < x < 2.1$ નો ઉકેલ છે, જ્યાં

$y(2) = 0$. તો $x = 1$ પાસે $\frac{dy}{dx}$ નું મૂલ્ય _____ છે.

Options :

$$\frac{e^{5/2}}{(1 + e^2)^2}$$

86435118033.

$$-\frac{2e^2}{(1 + e^2)^2}$$

86435118034.

$$\frac{5e^{1/2}}{(e^2 + 1)^2}$$

86435118035.

$$\frac{-e^{3/2}}{(e^2 + 1)^2}$$

86435118036.

Question Number : 70 Question Id : 8643516010 Question Type : MCQ Option Shuffling : Yes Is Question Mandatory : No

Correct Marks : 4 Wrong Marks : 1

The area bounded by the curve $4y^2 = x^2(4 - x)(x - 2)$ is equal to :

Options :

$$\frac{3\pi}{8}$$

86435118037.

86435118038. $\frac{\pi}{16}$

86435118039. $\frac{\pi}{8}$

86435118040. $\frac{3\pi}{2}$

Question Number : 70 Question Id : 8643516010 Question Type : MCQ Option Shuffling : Yes Is Question Mandatory : No

Correct Marks : 4 Wrong Marks : 1

વક્ર $4y^2 = x^2(4-x)(x-2)$ દ્વારા સીમિત ક્ષેત્રફળ _____ છે.

Options :

86435118037. $\frac{3\pi}{8}$

86435118038. $\frac{\pi}{16}$

86435118039. $\frac{\pi}{8}$

86435118040. $\frac{3\pi}{2}$

Question Number : 71 Question Id : 8643516011 Question Type : MCQ Option Shuffling : Yes Is Question Mandatory : No

Correct Marks : 4 Wrong Marks : 1

Let $g(x) = \int_0^x f(t)dt$, where f is continuous function in $[0, 3]$ such that $\frac{1}{3} \leq f(t) \leq 1$ for all

$t \in [0, 1]$ and $0 \leq f(t) \leq \frac{1}{2}$ for all $t \in (1, 3]$. The largest possible interval in which $g(3)$ lies is :

Options :

86435118041. $\left[\frac{1}{3}, 2\right]$

86435118042. $\left[-1, -\frac{1}{2}\right]$

86435118043. $[1, 3]$

86435118044. $\left[-\frac{3}{2}, -1\right]$

Question Number : 71 Question Id : 8643516011 Question Type : MCQ Option Shuffling : Yes Is Question Mandatory : No

Correct Marks : 4 Wrong Marks : 1

ધારો કે $g(x) = \int_0^x f(t)dt$, જ્યાં f એ $[0, 3]$ માં એવું સતત વિધેય છે કે જેથી દરેક $t \in [0, 1]$ માટે $\frac{1}{3} \leq f(t) \leq 1$

અને દરેક $t \in (1, 3]$ માટે $0 \leq f(t) \leq \frac{1}{2}$. તો $g(3)$ ને સમાવતો મોટામાં મોટો શક્ય અંતરાલ _____ છે.

Options :

86435118041. $\left[\frac{1}{3}, 2\right]$

86435118042. $\left[-1, -\frac{1}{2}\right]$

86435118043. $[1, 3]$

86435118044. $\left[-\frac{3}{2}, -1\right]$

Question Number : 72 Question Id : 8643516012 Question Type : MCQ Option Shuffling : Yes Is Question Mandatory : No

Correct Marks : 4 Wrong Marks : 1

Let $f: \mathbb{R} \rightarrow \mathbb{R}$ be a function defined as

$$f(x) = \begin{cases} \frac{\sin(a+1)x + \sin 2x}{2x}, & \text{if } x < 0 \\ b, & \text{if } x = 0 \\ \frac{\sqrt{x + bx^3} - \sqrt{x}}{bx^{5/2}}, & \text{if } x > 0 \end{cases}$$

If f is continuous at $x=0$, then the value of $a+b$ is equal to :

Options :

86435118045. $-\frac{5}{2}$

86435118046. -3

86435118047. -2

86435118048. $-\frac{3}{2}$

Question Number : 72 Question Id : 8643516012 Question Type : MCQ Option Shuffling : Yes Is Question Mandatory : No

Correct Marks : 4 Wrong Marks : 1

ધારો કે વિધેય $f: \mathbb{R} \rightarrow \mathbb{R}$

$$f(x) = \begin{cases} \frac{\sin(a+1)x + \sin 2x}{2x}, & \text{જો } x < 0 \\ b, & \text{જો } x = 0 \\ \frac{\sqrt{x + bx^3} - \sqrt{x}}{bx^{5/2}}, & \text{જો } x > 0 \end{cases}$$

પ્રમાણે વ્યાખ્યાયિત છે. જો $x=0$ પાસે f સતત હોય, તો $a+b$ નું મૂલ્ય _____ છે.

Options :

86435118045. $-\frac{5}{2}$

86435118046. -3

86435118047. -2

86435118048. $-\frac{3}{2}$

Question Number : 73 Question Id : 8643516013 Question Type : MCQ Option Shuffling : Yes Is Question Mandatory : No

Correct Marks : 4 Wrong Marks : 1

Let S_1 be the sum of first $2n$ terms of an arithmetic progression. Let S_2 be the sum of first $4n$ terms of the same arithmetic progression. If $(S_2 - S_1)$ is 1000, then the sum of the first $6n$ terms of the arithmetic progression is equal to :

Options :

86435118049. 7000

86435118050. 5000

86435118051. 3000

86435118052. 1000

Question Number : 73 Question Id : 8643516013 Question Type : MCQ Option Shuffling : Yes Is Question Mandatory : No

Correct Marks : 4 Wrong Marks : 1

ધારો કે સમાંતર શ્રેણીનાં પ્રથમ $2n$ પદોનો સરવાળો S_1 છે. ધારો કે આજ સમાંતર શ્રેણીનાં પ્રથમ $4n$ પદોનો સરવાળો S_2 છે. જો $(S_2 - S_1)$ એ 1000 હોય, તો સમાંતર શ્રેણીનાં પ્રથમ $6n$ પદોનો સરવાળો _____ થાય.

Options :

86435118049. 7000

86435118050. 5000

86435118051. 3000

86435118052. 1000

Question Number : 74 Question Id : 8643516014 Question Type : MCQ Option Shuffling : Yes Is Question Mandatory : No

Correct Marks : 4 Wrong Marks : 1

Let $S_1 : x^2 + y^2 = 9$ and $S_2 : (x - 2)^2 + y^2 = 1$. Then the locus of center of a variable circle S which touches S_1 internally and S_2 externally always passes through the points :

Options :

86435118053. $\left(2, \pm \frac{3}{2}\right)$

86435118054. $(0, \pm \sqrt{3})$

86435118055. $(1, \pm 2)$

86435118056. $\left(\frac{1}{2}, \pm \frac{\sqrt{5}}{2}\right)$

Question Number : 74 Question Id : 8643516014 Question Type : MCQ Option Shuffling : Yes Is Question Mandatory : No

Correct Marks : 4 Wrong Marks : 1

ધારો કે $S_1 : x^2 + y^2 = 9$ અને $S_2 : (x - 2)^2 + y^2 = 1$. તો S_1 ને અંતઃસ્પર્શી તથા S_2 ને બાહ્ય સ્પર્શી ચલ વર્તુળ S નાં કેન્દ્રનો બિંદુપથ હંમેશા બિંદુઓ _____ માંથી પસાર થશે.

Options :

86435118053. $\left(2, \pm \frac{3}{2}\right)$

86435118054. $(0, \pm \sqrt{3})$

86435118055. $(1, \pm 2)$

$$\left(\frac{1}{2}, \pm \frac{\sqrt{5}}{2}\right)$$

86435118056.

Question Number : 75 Question Id : 8643516015 Question Type : MCQ Option Shuffling : Yes Is Question Mandatory : No

Correct Marks : 4 Wrong Marks : 1

Let the system of linear equations

$$4x + \lambda y + 2z = 0$$

$$2x - y + z = 0$$

$$\mu x + 2y + 3z = 0, \lambda, \mu \in \mathbb{R}.$$

has a non-trivial solution. Then which of the following is true ?

Options :

86435118057. $\lambda = 3, \mu \in \mathbb{R}$

86435118058. $\mu = -6, \lambda \in \mathbb{R}$

86435118059. $\lambda = 2, \mu \in \mathbb{R}$

86435118060. $\mu = 6, \lambda \in \mathbb{R}$

Question Number : 75 Question Id : 8643516015 Question Type : MCQ Option Shuffling : Yes Is Question Mandatory : No

Correct Marks : 4 Wrong Marks : 1

ધારો કે સુરેખ સમીકરણ સંહતી

$$4x + \lambda y + 2z = 0$$

$$2x - y + z = 0$$

$$\mu x + 2y + 3z = 0, \lambda, \mu \in \mathbb{R}$$

ને અસાહજિક ઉકેલો છે. તો નીચેનામાંથી કયું સાચું છે ?

Options :

86435118057. $\lambda = 3, \mu \in \mathbb{R}$

86435118058. $\mu = -6, \lambda \in \mathbb{R}$

86435118059. $\lambda = 2, \mu \in \mathbb{R}$

86435118060. $\mu = 6, \lambda \in \mathbb{R}$

Question Number : 76 Question Id : 8643516016 Question Type : MCQ Option Shuffling : Yes Is Question Mandatory : No Correct Marks : 4 Wrong Marks : 1

Let $f: \mathbb{R} - \{3\} \rightarrow \mathbb{R} - \{1\}$ be defined by $f(x) = \frac{x-2}{x-3}$.

Let $g: \mathbb{R} \rightarrow \mathbb{R}$ be given as $g(x) = 2x - 3$. Then, the sum of all the values of x for which

$f^{-1}(x) + g^{-1}(x) = \frac{13}{2}$ is equal to.

Options :

86435118061. 2

86435118062. 5

86435118063. 3

86435118064. 7

Question Number : 76 Question Id : 8643516016 Question Type : MCQ Option Shuffling : Yes Is Question Mandatory : No Correct Marks : 4 Wrong Marks : 1

ધારો કે $f: \mathbb{R} - \{3\} \rightarrow \mathbb{R} - \{1\}$ એ $f(x) = \frac{x-2}{x-3}$ પ્રમાણે વ્યાખ્યાયિત છે. ધારો કે

$g: \mathbb{R} \rightarrow \mathbb{R}$ એ $g(x) = 2x - 3$ પ્રમાણે આપેલ છે. તો $f^{-1}(x) + g^{-1}(x) = \frac{13}{2}$ થાય તેવી x ની તમામ કિંમતોનો

સરવાળો _____ છે.

Options :

86435118061. 2

86435118062. 5

86435118063. 3

86435118064. 7

Question Number : 77 Question Id : 8643516017 Question Type : MCQ Option Shuffling : Yes Is

Question Mandatory : No

Correct Marks : 4 Wrong Marks : 1

Let a complex number be $w = 1 - \sqrt{3}i$. Let another complex number z be such that $|zw| = 1$

and $\arg(z) - \arg(w) = \frac{\pi}{2}$. Then the area of the triangle with vertices origin, z and w is equal

to :

Options :

86435118065. $\frac{1}{2}$

86435118066. 2

86435118067. $\frac{1}{4}$

86435118068. 4

Question Number : 77 Question Id : 8643516017 Question Type : MCQ Option Shuffling : Yes Is

Question Mandatory : No

Correct Marks : 4 Wrong Marks : 1

ધારો કે $w = 1 - \sqrt{3}i$ સંકર સંખ્યા છે. ધારો કે અન્ય સંકર સંખ્યા z એવી છે કે જેથી $|zw| = 1$ અને

$\arg(z) - \arg(w) = \frac{\pi}{2}$ થાય. તો ઊગમબિંદુ, z અને w શિરોબિંદુઓ વાળા ત્રિકોણનું ક્ષેત્રફળ _____ થાય.

Options :

86435118065. $\frac{1}{2}$

86435118066. 2

86435118067. $\frac{1}{4}$

86435118068. 4

Question Number : 78 Question Id : 8643516018 Question Type : MCQ Option Shuffling : Yes Is**Question Mandatory : No****Correct Marks : 4 Wrong Marks : 1**Define a relation R over a class of $n \times n$ real matrices A and B as"ARB iff there exists a non-singular matrix P such that $PAP^{-1} = B$ ".

Then which of the following is true ?

Options :

86435118069. R is reflexive, symmetric but not transitive

86435118070. R is reflexive, transitive but not symmetric

86435118071. R is symmetric, transitive but not reflexive,

86435118072. R is an equivalence relation

Question Number : 78 Question Id : 8643516018 Question Type : MCQ Option Shuffling : Yes Is**Question Mandatory : No****Correct Marks : 4 Wrong Marks : 1**

$n \times n$ વાસ્તવિક શ્રેણિકો A અને B નાં વર્ગ પર સંબંધ R ને "ARB તો અને તો જ એવો સામાન્ય શ્રેણિક P મળે જ કે જેથી $PAP^{-1} = B$ " પ્રમાણે વ્યાખ્યાયિત કરવામાં આવે છે. તો નીચેનામાંથી કયું સાચું છે ?

Options :

86435118069. R સ્વવાચક, સંમિત છે પરંતુ પરંપરિત નથી

86435118070. R સ્વવાચક, પરંપરિત છે પરંતુ સંમિત નથી

86435118071. R સંમિત, પરંપરિત છે પરંતુ સ્વવાચક નથી

86435118072. R સામ્ય સંબંધ છે

Question Number : 79 Question Id : 8643516019 Question Type : MCQ Option Shuffling : Yes Is**Question Mandatory : No****Correct Marks : 4 Wrong Marks : 1**

Consider a hyperbola $H : x^2 - 2y^2 = 4$. Let the tangent at a point $P (4, \sqrt{6})$ meet the x -axis at Q and latus rectum at $R (x_1, y_1)$, $x_1 > 0$. If F is a focus of H which is nearer to the point P , then the area of ΔQFR is equal to .

Options :

86435118073. $\sqrt{6} - 1$

86435118074. $\frac{7}{\sqrt{6}} - 2$

86435118075. $4\sqrt{6} - 1$

86435118076. $4\sqrt{6}$

Question Number : 79 Question Id : 8643516019 Question Type : MCQ Option Shuffling : Yes Is

Question Mandatory : No

Correct Marks : 4 Wrong Marks : 1

અતિવલય $H : x^2 - 2y^2 = 4$ ગણતરીમાં લો. ધારો કે બિંદુ $P (4, \sqrt{6})$ પાસેનો સ્પર્શક x -અક્ષ ને Q પાસે અને નાબિલંબને $R (x_1, y_1)$, $x_1 > 0$ પાસે મળે છે. જો F એ બિંદુ P થી સૌથી વધુ નજીકની H ની નાબિ લેય, તો ΔQFR નું ક્ષેત્રફળ _____ થશે.

Options :

86435118073. $\sqrt{6} - 1$

86435118074. $\frac{7}{\sqrt{6}} - 2$

86435118075. $4\sqrt{6} - 1$

86435118076. $4\sqrt{6}$

Question Number : 80 Question Id : 8643516020 Question Type : MCQ Option Shuffling : Yes Is

Question Mandatory : No

Correct Marks : 4 Wrong Marks : 1

Let \vec{a} and \vec{b} be two non-zero vectors perpendicular to each other and $|\vec{a}| = |\vec{b}|$. If

$|\vec{a} \times \vec{b}| = |\vec{a}|$, then the angle between the vectors $(\vec{a} + \vec{b} + (\vec{a} \times \vec{b}))$ and \vec{a} is equal to :

Options :

86435118077. $\cos^{-1}\left(\frac{1}{\sqrt{3}}\right)$

86435118078. $\cos^{-1}\left(\frac{1}{\sqrt{2}}\right)$

86435118079. $\sin^{-1}\left(\frac{1}{\sqrt{3}}\right)$

86435118080. $\sin^{-1}\left(\frac{1}{\sqrt{6}}\right)$

Question Number : 80 Question Id : 8643516020 Question Type : MCQ Option Shuffling : Yes Is Question Mandatory : No

Correct Marks : 4 Wrong Marks : 1

ધારો કે \vec{a} અને \vec{b} બે શૂન્યેતર પરસ્પર લંબ સદિશો છે અને $|\vec{a}| = |\vec{b}|$. જો $|\vec{a} \times \vec{b}| = |\vec{a}|$ હોય, તો સદિશો

$(\vec{a} + \vec{b} + (\vec{a} \times \vec{b}))$ અને \vec{a} વચ્ચેનો ખૂણો _____ છે.

Options :

86435118077. $\cos^{-1}\left(\frac{1}{\sqrt{3}}\right)$

86435118078. $\cos^{-1}\left(\frac{1}{\sqrt{2}}\right)$

86435118079. $\sin^{-1}\left(\frac{1}{\sqrt{3}}\right)$

$$\sin^{-1}\left(\frac{1}{\sqrt{6}}\right)$$

86435118080.

Mathematics Section B

Section Id :	864351402
Section Number :	6
Section type :	Online
Mandatory or Optional :	Mandatory
Number of Questions :	10
Number of Questions to be attempted :	5
Section Marks :	20
Mark As Answered Required? :	Yes
Sub-Section Number :	1
Sub-Section Id :	864351402
Question Shuffling Allowed :	Yes

Question Number : 81 Question Id : 8643516021 Question Type : SA

Correct Marks : 4 Wrong Marks : 0

If $f(x)$ and $g(x)$ are two polynomials such that the polynomial $P(x) = f(x^3) + x g(x^3)$ is divisible by $x^2 + x + 1$, then $P(1)$ is equal to _____.

Response Type : Numeric

Evaluation Required For SA : Yes

Show Word Count : Yes

Answers Type : Equal

Text Areas : PlainText

Possible Answers :

100

Question Number : 81 Question Id : 8643516021 Question Type : SA

Correct Marks : 4 Wrong Marks : 0

જો $f(x)$ તથા $g(x)$ બે એવી બહુપદીઓ હોય, જ્યાં $P(x) = f(x^3) + x g(x^3)$ એ $x^2 + x + 1$ વડે વિભાજ્ય થાય, તો $P(1) =$ _____.

Response Type : Numeric

Evaluation Required For SA : Yes

Show Word Count : Yes

Answers Type : Equal

Text Areas : PlainText

Possible Answers :

100

Question Number : 82 Question Id : 8643516022 Question Type : SA

Correct Marks : 4 Wrong Marks : 0

Let I be an identity matrix of order 2×2 and $P = \begin{bmatrix} 2 & -1 \\ 5 & -3 \end{bmatrix}$. Then the value of $n \in \mathbb{N}$ for which

$P^n = 5I - 8P$ is equal to _____.

Response Type : Numeric

Evaluation Required For SA : Yes

Show Word Count : Yes

Answers Type : Equal

Text Areas : PlainText

Possible Answers :

100

Question Number : 82 Question Id : 8643516022 Question Type : SA

Correct Marks : 4 Wrong Marks : 0

ધારો કે I કક્ષા 2×2 નો એકમ શ્રેણિક છે અને $P = \begin{bmatrix} 2 & -1 \\ 5 & -3 \end{bmatrix}$. તો જેના માટે $P^n = 5I - 8P$ થાય તેવી $n \in \mathbb{N}$ ની કિંમત _____ છે.

Response Type : Numeric

Evaluation Required For SA : Yes

Show Word Count : Yes

Answers Type : Equal

Text Areas : PlainText

Possible Answers :

100

Question Number : 83 Question Id : 8643516023 Question Type : SA

Correct Marks : 4 Wrong Marks : 0

The term independent of x in the expansion of $\left[\frac{x+1}{x^{2/3} - x^{1/3} + 1} - \frac{x-1}{x - x^{1/2}} \right]^{10}$, $x \neq 1$, is equal to _____.

Response Type : Numeric

Evaluation Required For SA : Yes

Show Word Count : Yes

Answers Type : Equal

Text Areas : PlainText

Possible Answers :

100

Question Number : 83 Question Id : 8643516023 Question Type : SA

Correct Marks : 4 Wrong Marks : 0

$$\left[\frac{x+1}{x^{2/3} - x^{1/3} + 1} - \frac{x-1}{x - x^{1/2}} \right]^{10}, x \neq 1 \text{ નાં વિસ્તરણમાં } x \text{ થી નિરપેક્ષ પદ } \underline{\hspace{2cm}} \text{ છે.}$$

Response Type : Numeric

Evaluation Required For SA : Yes

Show Word Count : Yes

Answers Type : Equal

Text Areas : PlainText

Possible Answers :

100

Question Number : 84 Question Id : 8643516024 Question Type : SA

Correct Marks : 4 Wrong Marks : 0

$$\text{If } \sum_{r=1}^{10} r! (r^3 + 6r^2 + 2r + 5) = \alpha (11!),$$

then the value of α is equal to _____.

Response Type : Numeric

Evaluation Required For SA : Yes

Show Word Count : Yes

Answers Type : Equal

Text Areas : PlainText

Possible Answers :

100

Question Number : 84 Question Id : 8643516024 Question Type : SA

Correct Marks : 4 Wrong Marks : 0

$$\text{જો } \sum_{r=1}^{10} r! (r^3 + 6r^2 + 2r + 5) = \alpha (11!), \text{ હોય, તો } \alpha = \underline{\hspace{2cm}}.$$

Response Type : Numeric

Evaluation Required For SA : Yes

Show Word Count : Yes

Answers Type : Equal

Text Areas : PlainText

Possible Answers :

100

Question Number : 85 Question Id : 8643516025 Question Type : SA

Correct Marks : 4 Wrong Marks : 0

Let $P(x)$ be a real polynomial of degree 3 which vanishes at $x = -3$. Let $P(x)$ have local

minima at $x = 1$, local maxima at $x = -1$ and $\int_{-1}^1 P(x)dx = 18$, then the sum of all the coefficients

of the polynomial $P(x)$ is equal to _____.

Response Type : Numeric

Evaluation Required For SA : Yes

Show Word Count : Yes

Answers Type : Equal

Text Areas : PlainText

Possible Answers :

100

Question Number : 85 Question Id : 8643516025 Question Type : SA

Correct Marks : 4 Wrong Marks : 0

ધારો કે $P(x)$ એ 3 ઘાતવાળી અને $x = -3$ પાસે શૂન્ય થતી વાસ્તવિક બહુપદી છે. ધારો કે $P(x)$ ને $x = 1$ પાસે સ્થાનિક

લઘુત્તમ (local minima), $x = -1$ પાસે સ્થાનિક અધિકત્તમ (local maxima) હોય અને $\int_{-1}^1 P(x)dx = 18$ હોય, તો

બહુપદી $P(x)$ નાં તમામ સહગુણકોનો સરવાળો _____ થાય.

Response Type : Numeric

Evaluation Required For SA : Yes

Show Word Count : Yes

Answers Type : Equal

Text Areas : PlainText

Possible Answers :

100

Question Number : 86 Question Id : 8643516026 Question Type : SA

Correct Marks : 4 Wrong Marks : 0

Let $y = y(x)$ be the solution of the differential equation $xdy - ydx = \sqrt{(x^2 - y^2)} dx$, $x \geq 1$, with

$y(1) = 0$. If the area bounded by the line $x = 1$, $x = e^\pi$, $y = 0$ and $y = y(x)$ is $\alpha e^{2\pi} + \beta$, then the value of $10(\alpha + \beta)$ is equal to _____.

Response Type : Numeric

Evaluation Required For SA : Yes

Show Word Count : Yes

Answers Type : Equal

Text Areas : PlainText

Possible Answers :

100

Question Number : 86 **Question Id :** 8643516026 **Question Type :** SA

Correct Marks : 4 **Wrong Marks :** 0

ધારો કે $y = y(x)$ એ વિકલ સમીકરણ $x dy - y dx = \sqrt{(x^2 - y^2)} dx, x \geq 1$, નો ઉકેલ છે, જ્યાં $y(1) = 0$. જો રેખાઓ $x = 1, x = e^\pi, y = 0$ તથા $y = y(x)$ થી સંવૃત્ત ક્ષેત્રફળ $\alpha e^{2\pi} + \beta$ હોય, તો $10(\alpha + \beta)$ નું મૂલ્ય _____ થાય.

Response Type : Numeric

Evaluation Required For SA : Yes

Show Word Count : Yes

Answers Type : Equal

Text Areas : PlainText

Possible Answers :

100

Question Number : 87 **Question Id :** 8643516027 **Question Type :** SA

Correct Marks : 4 **Wrong Marks :** 0

Let P be a plane containing the line $\frac{x-1}{3} = \frac{y+6}{4} = \frac{z+5}{2}$ and parallel to the line $\frac{x-3}{4} = \frac{y-2}{-3} = \frac{z+5}{7}$. If the point $(1, -1, \alpha)$ lies on the plane P, then the value of $|5\alpha|$ is equal to _____.

Response Type : Numeric

Evaluation Required For SA : Yes

Show Word Count : Yes

Answers Type : Equal

Text Areas : PlainText

Possible Answers :

100

Question Number : 87 **Question Id :** 8643516027 **Question Type :** SA

Correct Marks : 4 **Wrong Marks :** 0

ધારો કે રેખા $\frac{x-1}{3} = \frac{y+6}{4} = \frac{z+5}{2}$ ને સમાવતો અને રેખા $\frac{x-3}{4} = \frac{y-2}{-3} = \frac{z+5}{7}$ ને સમાંતર સમતલ P છે.

જો બિંદુ $(1, -1, \alpha)$ સમતલ P પર આવેલ હોય, તો $|5\alpha|$ નું મૂલ્ય _____ છે.

Response Type : Numeric

Evaluation Required For SA : Yes

Show Word Count : Yes

Answers Type : Equal

Text Areas : PlainText

Possible Answers :

100

Question Number : 88 **Question Id :** 8643516028 **Question Type :** SA

Correct Marks : 4 **Wrong Marks :** 0

Let the mirror image of the point $(1, 3, a)$ with respect to the plane $\vec{r} \cdot (2\hat{i} - \hat{j} + \hat{k}) - b = 0$

be $(-3, 5, 2)$. Then, the value of $|a + b|$ is equal to _____.

Response Type : Numeric

Evaluation Required For SA : Yes

Show Word Count : Yes

Answers Type : Equal

Text Areas : PlainText

Possible Answers :

100

Question Number : 88 **Question Id :** 8643516028 **Question Type :** SA

Correct Marks : 4 **Wrong Marks :** 0

ધારો કે બિંદુ $(1, 3, a)$ નું સમતલ $\vec{r} \cdot (2\hat{i} - \hat{j} + \hat{k}) - b = 0$ સાપેક્ષ આરસી પ્રતિબિંબ $(-3, 5, 2)$ છે. તો $|a + b|$

નું મૂલ્ય _____ છે.

Response Type : Numeric

Evaluation Required For SA : Yes

Show Word Count : Yes

Answers Type : Equal

Text Areas : PlainText

Possible Answers :

100

Question Number : 89 **Question Id :** 8643516029 **Question Type :** SA

Correct Marks : 4 **Wrong Marks :** 0

Let ${}^n C_r$ denote the binomial coefficient of x^r in the expansion of $(1+x)^n$.

If $\sum_{k=0}^{10} (2^2 + 3k) {}^n C_k = \alpha \cdot 3^{10} + \beta \cdot 2^{10}$, $\alpha, \beta \in \mathbb{R}$, then $\alpha + \beta$ is equal to _____.

Response Type : Numeric

Evaluation Required For SA : Yes

Show Word Count : Yes

Answers Type : Equal

Text Areas : PlainText

Possible Answers :

100

Question Number : 89 **Question Id :** 8643516029 **Question Type :** SA

Correct Marks : 4 **Wrong Marks :** 0

ધારો કે $(1+x)^n$ નાં વિસ્તરણમાં x^r નો દ્વિપદી સહગુણક ${}^n C_r$ વડે દર્શાવાય છે. જો

$\sum_{k=0}^{10} (2^2 + 3k) {}^n C_k = \alpha \cdot 3^{10} + \beta \cdot 2^{10}$, $\alpha, \beta \in \mathbb{R}$ હોય તો $\alpha + \beta =$ _____.

Response Type : Numeric

Evaluation Required For SA : Yes

Show Word Count : Yes

Answers Type : Equal

Text Areas : PlainText

Possible Answers :

100

Question Number : 90 **Question Id :** 8643516030 **Question Type :** SA

Correct Marks : 4 **Wrong Marks :** 0

Let $f: \mathbb{R} \rightarrow \mathbb{R}$ satisfy the equation $f(x+y) = f(x) \cdot f(y)$ for all $x, y \in \mathbb{R}$ and $f(x) \neq 0$ for any $x \in \mathbb{R}$.

If the function f is differentiable at $x=0$ and $f'(0)=3$, then $\lim_{h \rightarrow 0} \frac{1}{h} (f(h) - 1)$ is equal to

_____.

Response Type : Numeric

Evaluation Required For SA : Yes

Show Word Count : Yes

Answers Type : Equal

Text Areas : PlainText

Possible Answers :

100

Question Number : 90 Question Id : 8643516030 Question Type : SA

Correct Marks : 4 Wrong Marks : 0

દરેક $x, y \in \mathbb{R}$ માટે ધારો કે $f: \mathbb{R} \rightarrow \mathbb{R}$ સમીકરણ $f(x+y) = f(x) \cdot f(y)$ નું સમાધાન કરે છે અને દરેક $x \in \mathbb{R}$ માટે

$f(x) \neq 0$. જો $x=0$ પાસે વિધેય f વિકલનીય હોય અને $f'(0) = 3$ હોય, તો $\lim_{h \rightarrow 0} \frac{1}{h} (f(h) - 1) = \underline{\hspace{2cm}}$.

Response Type : Numeric

Evaluation Required For SA : Yes

Show Word Count : Yes

Answers Type : Equal

Text Areas : PlainText

Possible Answers :

100

