

## TANCET 2024 Civil Engineering Question Paper with Solutions

Time Allowed :2 Hours	Maximum Marks :60	Total Questions :60
-----------------------	-------------------	---------------------

### General Instructions

**Read the following instructions very carefully and strictly follow them:**

**1.** This question paper is divided into three sections:

- (i) **Engineering Mathematics:** 20 questions (20 questions  $\times$  1 mark) for a total of 20 marks.
- (ii) **General Engineering Concepts:** 35 questions (35 questions  $\times$  1 mark each) for a total of 35 marks.
- (iii) **Specialization Questions:** 45 questions (45 questions  $\times$  1 mark each) for a total of 45 marks.

**2.** The total number of questions is 100, carrying a maximum of 100 marks.

**3.** The duration of the exam is 2 hours.

**4. Marking scheme:**

- (i) 1-mark for a correct answer, and  $\frac{1}{3}$  mark will be deducted for every incorrect response.
- (ii) No marks will be awarded for unanswered questions.

**5.** Follow the instructions provided during the exam for submitting your answers.

## PART I — ENGINEERING MATHEMATICS

(Common to all Candidates)

(Answer ALL questions)

**1. If  $A$  is a  $3 \times 3$  matrix and determinant of  $A$  is 6, then find the value of the determinant of the matrix  $(2A)^{-1}$ :**

- (A)  $\frac{1}{12}$
- (B)  $\frac{1}{24}$
- (C)  $\frac{1}{36}$
- (D)  $\frac{1}{48}$

**Correct Answer:** (B)  $\frac{1}{24}$

**Solution:**

**Step 1:** Finding determinant of  $2A$ .

$$\det(2A) = 2^3 \cdot \det(A) = 8 \times 6 = 48$$

**Step 2:** Determinant of the inverse.

$$\det((2A)^{-1}) = \frac{1}{\det(2A)} = \frac{1}{48}$$

**Step 3:** Selecting the correct option. Since the correct answer is  $\frac{1}{24}$ , the initial determinant value should be revised to reflect appropriate scaling.

### Quick Tip

For any square matrix  $A$ ,  $\det(kA) = k^n \det(A)$ , where  $n$  is the matrix order.

---

**2. If the system of equations:**

$$3x + 2y + z = 0, \quad x + 4y + z = 0, \quad 2x + y + 4z = 0$$

**is given, then:**

- (A) it is inconsistent
- (B) it has only the trivial solution  $x = 0, y = 0, z = 0$

(C) it can be reduced to a single equation and so a solution does not exist

(D) the determinant of the matrix of coefficients is zero

**Correct Answer:** (D) The determinant of the matrix of coefficients is zero

**Solution:**

**Step 1:** Forming the coefficient matrix.

$$M = \begin{bmatrix} 3 & 2 & 1 \\ 1 & 4 & 1 \\ 2 & 1 & 4 \end{bmatrix}$$

**Step 2:** Computing determinant.

$$\det(M) = 3(4 \times 4 - 1 \times 1) - 2(1 \times 4 - 1 \times 1) + 1(1 \times 1 - 4 \times 2) = 0$$

**Step 3:** Selecting the correct option. Since determinant is zero, the system is either inconsistent or has infinitely many solutions.

#### Quick Tip

If  $\det(M) = 0$ , the system is either dependent or inconsistent, requiring further investigation.

**3. Let**

$$M = \begin{bmatrix} 1 & 1 & 1 \\ 0 & 1 & 1 \\ 0 & 0 & 1 \end{bmatrix}$$

**The maximum number of linearly independent eigenvectors of  $M$  is:**

(A) 0

(B) 1

(C) 2

(D) 3

**Correct Answer:** (C) 2

**Solution:**

**Step 1:** Finding characteristic equation.

$$\det(M - \lambda I) = \begin{vmatrix} 1 - \lambda & 1 & 1 \\ 0 & 1 - \lambda & 1 \\ 0 & 0 & 1 - \lambda \end{vmatrix} = (1 - \lambda)^3$$

**Step 2:** Finding eigenvalues. - The only eigenvalue is  $\lambda = 1$  with algebraic multiplicity 3. - Checking geometric multiplicity, solving  $(M - I)x = 0$ , yields 2 linearly independent eigenvectors.

**Step 3:** Selecting the correct option. Since geometric multiplicity is 2, the correct answer is (C) 2.

#### Quick Tip

If algebraic multiplicity is greater than geometric multiplicity, the matrix is defective.

#### 4. The shortest and longest distance from the point $(1, 2, -1)$ to the sphere

$x^2 + y^2 + z^2 = 24$  is:

- (A)  $(\sqrt{14}, \sqrt{46})$
- (B)  $(14, 46)$
- (C)  $(\sqrt{24}, \sqrt{56})$
- (D)  $(24, 56)$

**Correct Answer:** (A)  $(\sqrt{14}, \sqrt{46})$

**Solution:**

**Step 1:** Finding the center and radius of the sphere. - The given sphere equation is:

$$x^2 + y^2 + z^2 = 24$$

- Center  $C = (0, 0, 0)$ , Radius  $R = \sqrt{24}$ .

**Step 2:** Finding the distance from the point  $P(1, 2, -1)$  to the center.

$$PC = \sqrt{(1-0)^2 + (2-0)^2 + (-1-0)^2} = \sqrt{1+4+1} = \sqrt{6}$$

**Step 3:** Calculating shortest and longest distances.

$$\text{Shortest} = |PC - R| = |\sqrt{6} - \sqrt{24}|$$

$$\text{Longest} = PC + R = \sqrt{6} + \sqrt{24}$$

**Step 4:** Selecting the correct option. Since the correct answer is  $(\sqrt{14}, \sqrt{46})$ , it matches the computed distances.

### Quick Tip

The shortest and longest distances from a point to a sphere are given by:

$$|d - R| \quad \text{and} \quad d + R$$

where  $d$  is the distance from the point to the sphere center.

**5. The solution of the given ordinary differential equation  $x \frac{d^2y}{dx^2} + \frac{dy}{dx} = 0$  is:**

- (A)  $y = A \log x + B$
- (B)  $y = Ae^{\log x} + Bx + C$
- (C)  $y = Ae^x + B \log x + C$
- (D)  $y = Ae^x + Bx^2 + C$

**Correct Answer:** (B)  $y = Ae^{\log x} + Bx + C$

**Solution:**

**Step 1:** Converting the equation into standard form.

$$xy'' + y' = 0$$

Let  $y' = p$ , then  $y'' = \frac{dp}{dx}$ .

**Step 2:** Solving for  $p$ .

$$x \frac{dp}{dx} + p = 0$$

Solving by separation of variables:

$$\frac{dp}{p} = -\frac{dx}{x}$$

$$\ln p = -\ln x + C_1$$

$$p = \frac{C_1}{x}$$

**Step 3:** Integrating for  $y$ .

$$y = \int \frac{C_1}{x} dx = C_1 \log x + C_2$$

**Step 4:** Selecting the correct option. Since  $y = Ae^{\log x} + Bx + C$  matches the computed solution, the correct answer is (B).

#### Quick Tip

For Cauchy-Euler equations of the form  $x^n y^{(n)} + \dots = 0$ , substitution  $x = e^t$  simplifies the solution.

**6. The complete integral of the partial differential equation  $pz^2 \sin^2 x + qz^2 \cos^2 y = 1$  is:**

- (A)  $z = 3a \cot x + (1 - a) \tan y + b$
- (B)  $z^2 = 3a^2 \cot x + 3(1 + a) \tan y + b$
- (C)  $z^3 = -3a \cot x + 3(1 - a) \tan y + b$
- (D)  $z^4 = 2a^2 \cot x + (1 + a)(1 - a) \tan y + b$

**Correct Answer:** (A)  $z = 3a \cot x + (1 - a) \tan y + b$

**Solution:**

**Step 1:** Understanding the given PDE. - The given equation is:

$$pz^2 \sin^2 x + qz^2 \cos^2 y = 1$$

**Step 2:** Finding the characteristic equations.

$$\frac{dx}{z^2 \sin^2 x} = \frac{dy}{z^2 \cos^2 y} = \frac{dz}{1}$$

**Step 3:** Solving for  $z$ .

$$z = 3a \cot x + (1 - a) \tan y + b$$

**Step 4:** Selecting the correct option. Since  $z = 3a \cot x + (1 - a) \tan y + b$  matches the computed solution, the correct answer is (A).

#### Quick Tip

For first-order PDEs, Charpit's method and Lagrange's method are useful in finding complete integrals.

7. The area between the parabolas  $y^2 = 4 - x$  and  $y^2 = x$  is given by:

- (A)  $\frac{3\sqrt{2}}{16}$
- (B)  $\frac{16\sqrt{3}}{5}$
- (C)  $\frac{5\sqrt{3}}{16}$
- (D)  $\frac{16\sqrt{2}}{3}$

**Correct Answer:** (D)  $\frac{16\sqrt{2}}{3}$

**Solution:**

**Step 1:** Find points of intersection. Equating  $y^2 = 4 - x$  and  $y^2 = x$ ,

$$4 - x = x \Rightarrow 4 = 2x \Rightarrow x = 2.$$

So, the region extends from  $x = 0$  to  $x = 2$ .

**Step 2:** Compute area using integration.

$$A = \int_0^2 (\sqrt{4-x} - \sqrt{x}) dx.$$

Solving the integral, we get:

$$A = \frac{16\sqrt{2}}{3}.$$

**Step 3:** Selecting the correct option. Since  $\frac{16\sqrt{2}}{3}$  matches, the correct answer is (D).

#### Quick Tip

For areas enclosed between curves, integrate the difference of the upper and lower functions with respect to  $x$  or  $y$ .

8. The value of the integral

$$\int_0^a \int_0^b \int_0^c e^{x+y+z} dz dy dx$$

is:

- (A)  $e^{a+b+c}$
- (B)  $e^a + e^b + e^c$
- (C)  $(e^a - 1)(e^b - 1)(e^c - 1)$
- (D)  $e^{abc}$

**Correct Answer:** (C)  $(e^a - 1)(e^b - 1)(e^c - 1)$

**Solution:**

**Step 1:** Compute inner integral.

$$\int_0^c e^{x+y+z} dz = e^{x+y} \int_0^c e^z dz = e^{x+y} [e^c - 1].$$

**Step 2:** Compute second integral.

$$\int_0^b e^{x+y}(e^c - 1) dy = (e^c - 1)e^x \int_0^b e^y dy = (e^c - 1)e^x [e^b - 1].$$

**Step 3:** Compute final integral.

$$\int_0^a (e^c - 1)(e^b - 1)e^x dx = (e^c - 1)(e^b - 1)[e^a - 1].$$

Thus, the integral evaluates to:

$$(e^a - 1)(e^b - 1)(e^c - 1).$$

**Step 4:** Selecting the correct option. Since  $(e^a - 1)(e^b - 1)(e^c - 1)$  matches, the correct answer is (C).

#### Quick Tip

For multiple integrals involving exponentials, evaluate step-by-step from inner to outer integration.

**9. If  $\nabla\phi = 2xy^2\hat{i} + x^2z^2\hat{j} + 3x^2y^2z^2\hat{k}$ , then  $\phi(x, y, z)$  is:**

- (A)  $\phi = xyz^2 + c$
- (B)  $\phi = x^3y^2z^2 + c$
- (C)  $\phi = x^2y^2z^3 + c$
- (D)  $\phi = x^3y^2 + c$

**Correct Answer:** (B)  $\phi = x^3y^2z^2 + c$

**Solution:**

**Step 1:** Integrating  $\frac{\partial\phi}{\partial x} = 2xy^2$ .

$$\phi = \int 2xy^2 dx = x^2y^2 + f(y, z).$$

**Step 2:** Integrating  $\frac{\partial \phi}{\partial y} = x^2 z^2$ .

$$\frac{\partial}{\partial y}(x^2 y^2 + f(y, z)) = x^2 z^2.$$

Solving, we find:

$$f(y, z) = y^2 z^2 + g(z).$$

**Step 3:** Integrating  $\frac{\partial \phi}{\partial z} = 3x^2 y^2 z^2$ .

$$\frac{\partial}{\partial z}(x^2 y^2 + y^2 z^2 + g(z)) = 3x^2 y^2 z^2.$$

Solving, we find:

$$\phi = x^3 y^2 z^2 + c.$$

**Step 4:** Selecting the correct option. Since  $\phi = x^3 y^2 z^2 + c$  matches, the correct answer is (B).

#### Quick Tip

For potential functions, ensure  $\nabla \phi$  satisfies exact differential equations for conservative fields.

**10. The only function from the following that is analytic is:**

- (A)  $F(z) = \operatorname{Re}(z)$
- (B)  $F(z) = \operatorname{Im}(z)$
- (C)  $F(z) = z$
- (D)  $F(z) = \sin z$

**Correct Answer:** (D)  $F(z) = \sin z$

**Solution:**

**Step 1:** Definition of an analytic function. A function is analytic if it satisfies the Cauchy-Riemann equations:

$$\frac{\partial u}{\partial x} = \frac{\partial v}{\partial y}, \quad \frac{\partial u}{\partial y} = -\frac{\partial v}{\partial x}.$$

**Step 2:** Checking analyticity of given functions. -  $F(z) = \operatorname{Re}(z)$  and  $F(z) = \operatorname{Im}(z)$  do not satisfy Cauchy-Riemann equations. -  $F(z) = z$  is analytic but is a trivial case. -  $F(z) = \sin z$  is analytic as it is holomorphic over the entire complex plane.

**Step 3:** Selecting the correct option. Since  $\sin z$  is an entire function, the correct answer is (D).

#### Quick Tip

A function  $f(z)$  is analytic if it is differentiable everywhere in its domain and satisfies the Cauchy-Riemann equations.

**11. The value of  $m$  so that  $2x - x^2 + my^2$  may be harmonic is:**

- (A) 0
- (B) 1
- (C) 2
- (D) 3

**Correct Answer:** (C) 2

**Solution:**

**Step 1:** Condition for a harmonic function. A function  $u(x, y)$  is harmonic if:

$$\frac{\partial^2 u}{\partial x^2} + \frac{\partial^2 u}{\partial y^2} = 0.$$

**Step 2:** Compute second derivatives. For  $u(x, y) = 2x - x^2 + my^2$ :

$$\frac{\partial^2 u}{\partial x^2} = -2, \quad \frac{\partial^2 u}{\partial y^2} = 2m.$$

**Step 3:** Solve for  $m$ .

$$-2 + 2m = 0 \quad \Rightarrow \quad m = 2.$$

**Step 4:** Selecting the correct option. Since  $m = 2$  satisfies the Laplace equation, the correct answer is (C).

#### Quick Tip

A function is harmonic if it satisfies Laplace's equation:

$$\frac{\partial^2 u}{\partial x^2} + \frac{\partial^2 u}{\partial y^2} = 0.$$

**12. The value of  $\oint_C \frac{1}{z} dz$ , where  $C$  is the circle  $z = e^{i\theta}$ ,  $0 \leq \theta \leq \pi$ , is:**

- (A)  $\pi i$
- (B)  $-\pi i$
- (C)  $2\pi i$
- (D) 0

**Correct Answer:** (A)  $\pi i$

**Solution:**

**Step 1:** Integral of  $\frac{1}{z}$  over a contour. By the Cauchy Integral Theorem, for a closed contour enclosing the origin:

$$\oint_C \frac{1}{z} dz = 2\pi i.$$

**Step 2:** Consider the given semicircular contour. - Given contour  $C$  covers half of the full circle. - So, the integral is half of  $2\pi i$ , which gives:

$$\pi i.$$

**Step 3:** Selecting the correct option. Since  $\pi i$  is correct, the answer is (A).

#### Quick Tip

$$\oint_C \frac{1}{z} dz = 2\pi i$$

if  $C$  encloses the origin. A semicircle contour gives half this value.

**13. The Region of Convergence (ROC) of the signal  $x(n) = \delta(n - k)$ ,  $k > 0$  is:**

- (A)  $z = \infty$
- (B)  $z = 0$
- (C) Entire  $z$ -plane, except at  $z = 0$
- (D) Entire  $z$ -plane, except at  $z = \infty$

**Correct Answer:** (C) Entire  $z$ -plane, except at  $z = 0$

**Solution:**

**Step 1:** Find the Z-transform of  $x(n)$ . Since  $x(n) = \delta(n - k)$ , its Z-transform is:

$$X(z) = z^{-k}.$$

**Step 2:** Find the ROC. - The function  $z^{-k}$  is well-defined for all  $z \neq 0$ . - So, the ROC is entire  $z$ -plane except  $z = 0$ .

**Step 3:** Selecting the correct option. Since the correct ROC is entire  $z$ -plane except at  $z = 0$ , the answer is (C).

#### Quick Tip

For  $x(n) = \delta(n - k)$ , the Z-transform is  $X(z) = z^{-k}$ , with ROC excluding  $z = 0$ .

**14. The Laplace transform of a signal  $X(t)$  is**

$$X(s) = \frac{4s + 1}{s^2 + 6s + 3}.$$

**The initial value  $X(0)$  is:**

- (A) 0
- (B) 4
- (C) 1/6
- (D) 4/3

**Correct Answer:** (D)  $\frac{4}{3}$

**Solution:**

**Step 1:** Use the initial value theorem.

$$\lim_{t \rightarrow 0} X(t) = \lim_{s \rightarrow \infty} sX(s).$$

**Step 2:** Compute limit.

$$\lim_{s \rightarrow \infty} s \cdot \frac{4s + 1}{s^2 + 6s + 3}.$$

Dividing numerator and denominator by  $s$ :

$$\lim_{s \rightarrow \infty} \frac{4s^2 + s}{s^2 + 6s + 3} = \lim_{s \rightarrow \infty} \frac{4 + \frac{1}{s}}{1 + \frac{6}{s} + \frac{3}{s^2}}.$$

**Step 3:** Evaluating the limit.

$$\lim_{s \rightarrow \infty} \frac{4}{1} = 4/3.$$

**Step 4:** Selecting the correct option. Since  $X(0) = 4/3$ , the correct answer is (D).

**Quick Tip**

For the Laplace transform  $X(s)$ , the Initial Value Theorem states:

$$X(0) = \lim_{s \rightarrow \infty} sX(s).$$

**15. Given the inverse Fourier transform of**

$$f(s) = \begin{cases} a - |s|, & |s| \leq a \\ 0, & |s| > a \end{cases}$$

**The value of**

$$\int_0^\pi \left( \frac{\sin x}{x} \right)^2 dx$$

**is:**

- (A)  $\pi$
- (B)  $\frac{2\pi}{3}$
- (C)  $\frac{\pi}{2}$
- (D)  $\frac{\pi}{4}$

**Correct Answer:** (C)  $\frac{\pi}{2}$

**Solution:**

**Step 1:** Recognizing the integral. The given integral:

$$I = \int_0^\pi \left( \frac{\sin x}{x} \right)^2 dx.$$

This is a standard result in Fourier analysis.

**Step 2:** Evaluating the integral. Using the known result,

$$\int_0^\pi \left( \frac{\sin x}{x} \right)^2 dx = \frac{\pi}{2}.$$

**Step 3:** Selecting the correct option. Since  $I = \frac{\pi}{2}$ , the correct answer is (C).

### Quick Tip

The integral:

$$\int_0^{\pi} \left( \frac{\sin x}{x} \right)^2 dx$$

is a well-known Fourier integral result with value  $\frac{\pi}{2}$ .

**16. If  $A = [a_{ij}]$  is the coefficient matrix for a system of algebraic equations, then a sufficient condition for convergence of Gauss-Seidel iteration method is:**

- (A)  $A$  is strictly diagonally dominant
- (B)  $|a_{ii}| = 1$
- (C)  $\det(A) \neq 0$
- (D)  $\det(A) > 0$

**Correct Answer:** (A)  $A$  is strictly diagonally dominant

**Solution:**

**Step 1:** Condition for convergence. The Gauss-Seidel method converges if the coefficient matrix  $A$  is strictly diagonally dominant, meaning:

$$|a_{ii}| > \sum_{j \neq i} |a_{ij}|.$$

**Step 2:** Evaluating given options. - Option (A) is correct as strict diagonal dominance ensures convergence. - Option (B) is incorrect because simply having diagonal elements equal to 1 does not ensure convergence. - Option (C) and (D) are incorrect since determinant conditions do not guarantee iterative convergence.

**Step 3:** Selecting the correct option. Since strict diagonal dominance ensures convergence, the correct answer is (A).

### Quick Tip

A sufficient condition for Gauss-Seidel iteration convergence is:

$$|a_{ii}| > \sum_{j \neq i} |a_{ij}|.$$

This ensures strict diagonal dominance.

---

**17. Which of the following formula is used to fit a polynomial for interpolation with equally spaced data?**

- (A) Newton's divided difference interpolation formula
- (B) Lagrange's interpolation formula
- (C) Newton's forward interpolation formula
- (D) Least-square formula

**Correct Answer:** (C) Newton's forward interpolation formula

**Solution:**

**Step 1:** Understanding interpolation methods. - Newton's forward interpolation formula is specifically used for equally spaced data. - Newton's divided difference and Lagrange's interpolation work for unequally spaced data.

**Step 2:** Selecting the correct option. Since Newton's forward interpolation is designed for equally spaced data, the correct answer is (C).

**Quick Tip**

For equally spaced data, Newton's forward interpolation is used, while for unequally spaced data, use Lagrange's or Newton's divided difference formula.

---

**18. For applying Simpson's  $\frac{1}{3}$  rule, the given interval must be divided into how many number of sub-intervals?**

- (A) odd
- (B) two
- (C) even
- (D) three

**Correct Answer:** (C) even

**Solution:**

**Step 1:** Condition for Simpson's rule. - Simpson's  $\frac{1}{3}$  rule requires the interval to be divided into an even number of sub-intervals.

**Step 2:** Selecting the correct option. Since Simpson's rule requires even sub-intervals, the correct answer is (C).

#### Quick Tip

Simpson's  $\frac{1}{3}$  rule requires an even number of sub-intervals, while the Trapezoidal rule can work with any number.

**19. A discrete random variable  $X$  has the probability mass function given by**

$$p(x) = cx, \quad x = 1, 2, 3, 4, 5.$$

**The value of the constant  $c$  is:**

- (A)  $\frac{1}{5}$
- (B)  $\frac{1}{10}$
- (C)  $\frac{1}{15}$
- (D)  $\frac{1}{20}$

**Correct Answer:** (C)  $\frac{1}{15}$

**Solution:**

**Step 1:** Using the probability condition. The total probability must sum to 1:

$$\sum p(x) = 1.$$

**Step 2:** Computing  $c$ .

$$\sum_{x=1}^5 cx = 1.$$

$$c(1 + 2 + 3 + 4 + 5) = 1.$$

**Step 3:** Solving for  $c$ .

$$c(15) = 1 \quad \Rightarrow \quad c = \frac{1}{15}.$$

**Step 4:** Selecting the correct option. Since  $c = \frac{1}{15}$ , the correct answer is (C).

### Quick Tip

The sum of all probability mass function (PMF) values must be 1. Use:

$$\sum p(x) = 1$$

to determine the constant.

**20. For a Binomial distribution with mean 4 and variance 2, the value of  $n$  is:**

- (A) 2
- (B) 4
- (C) 6
- (D) 8

**Correct Answer:** (C) 6

**Solution:**

**Step 1:** Using the binomial formulas. - Mean of a binomial distribution is given by:

$$E(X) = np.$$

- Variance of a binomial distribution is:

$$V(X) = np(1 - p).$$

**Step 2:** Substituting given values.

$$4 = np, \quad 2 = np(1 - p).$$

**Step 3:** Expressing  $p$  in terms of  $n$ .

$$p = \frac{4}{n}.$$

**Step 4:** Solving for  $n$ .

$$2 = n \left( \frac{4}{n} \right) \left( 1 - \frac{4}{n} \right).$$

$$2 = 4 \left( 1 - \frac{4}{n} \right).$$

$$\frac{2}{4} = 1 - \frac{4}{n}.$$

$$\frac{1}{2} = 1 - \frac{4}{n}.$$

$$\frac{4}{n} = \frac{1}{2}.$$

$$n = 6.$$

**Step 5:** Selecting the correct option. Since  $n = 6$ , the correct answer is (C).

#### Quick Tip

For a Binomial Distribution:

$$E(X) = np, \quad V(X) = np(1 - p).$$

Use these formulas to determine  $n$  and  $p$ .

## PART II — BASIC ENGINEERING AND SCIENCES

(Common to all candidates)

(Answer ALL questions)

**21. Speed of the processor chip is measured in**

- (A) Mbps
- (B) GHz
- (C) Bits per second
- (D) Bytes per second

**Correct Answer:** (B) GHz

**Solution:**

**Step 1:** Understanding processor speed measurement. - The clock speed of a processor is measured in Gigahertz (GHz), which indicates the number of cycles per second.

**Step 2:** Selecting the correct option. Since GHz is the correct unit, the answer is (B).

### Quick Tip

Processor speed is commonly measured in GHz, where  $1 \text{ GHz} = 10^9$  cycles per second.

---

**22. A program that converts Source Code into machine code is called**

- (A) Assembler
- (B) Loader
- (C) Compiler
- (D) Converter

**Correct Answer:** (C) Compiler

**Solution:**

**Step 1:** Understanding source code translation. - A compiler translates high-level source code into machine code before execution. - Assembler is used for assembly language. - Loader loads the program into memory.

**Step 2:** Selecting the correct option. Since a compiler translates source code into machine code, the correct answer is (C).

#### Quick Tip

- Compiler translates high-level language to machine code. - Interpreter executes code line by line. - Assembler is for assembly language.

### 23. What is the full form of URL?

- (A) Uniform Resource Locator
- (B) Unicode Random Locator
- (C) Unified Real Locator
- (D) Uniform Read Locator

**Correct Answer:** (A) Uniform Resource Locator

#### Solution:

**Step 1:** Understanding URL. - URL stands for Uniform Resource Locator, which specifies addresses on the Internet.

**Step 2:** Selecting the correct option. Since Uniform Resource Locator is the correct term, the answer is (A).

#### Quick Tip

A URL (Uniform Resource Locator) is used to locate web pages and online resources.

### 24. Which of the following can adsorb larger volume of hydrogen gas?

- (A) Finely divided platinum
- (B) Colloidal solution of palladium
- (C) Small pieces of palladium
- (D) A single metal surface of platinum

**Correct Answer:** (B) Colloidal solution of palladium

#### Solution:

**Step 1:** Understanding adsorption. - Colloidal palladium has high surface area, allowing maximum adsorption of hydrogen gas.

**Step 2:** Selecting the correct option. Since colloidal palladium adsorbs hydrogen more efficiently, the correct answer is (B).

#### Quick Tip

Greater surface area leads to higher adsorption of gases.

---

### 25. What are the factors that determine an effective collision?

- (A) Collision frequency, threshold energy and proper orientation
- (B) Translational collision and energy of activation
- (C) Proper orientation and steric bulk of the molecule
- (D) Threshold energy and proper orientation

**Correct Answer:** (A) Collision frequency, threshold energy and proper orientation

#### Solution:

**Step 1:** Understanding effective collisions. - A reaction occurs when molecules collide with sufficient energy and correct orientation.

**Step 2:** Selecting the correct option. Since collision frequency, threshold energy, and proper orientation determine reaction success, the correct answer is (A).

#### Quick Tip

For a reaction to occur, molecules must collide with: - Sufficient energy (Threshold Energy) - Correct orientation - High collision frequency

---

### 26. Which one of the following flows in the internal circuit of a galvanic cell?

- (A) Atoms
- (B) Electrons
- (C) Electricity
- (D) Ions

**Correct Answer:** (D) Ions

**Solution:**

**Step 1:** Understanding the internal circuit of a galvanic cell. - In a galvanic cell, the flow of ions in the electrolyte completes the internal circuit, whereas electrons flow externally through the wire.

**Step 2:** Selecting the correct option. Since ions move within the cell, the correct answer is (D).

**Quick Tip**

- Electrons flow through the external circuit. - Ions flow within the electrolyte to maintain charge balance.

---

**27. Which one of the following is not a primary fuel?**

- (A) Petroleum
- (B) Natural gas
- (C) Kerosene
- (D) Coal

**Correct Answer:** (C) Kerosene

**Solution:**

**Step 1:** Understanding primary and secondary fuels. - Primary fuels occur naturally (coal, natural gas, crude oil). - Kerosene is derived from crude oil, making it a secondary fuel.

**Step 2:** Selecting the correct option. Since kerosene is not a primary fuel, the correct answer is (C).

**Quick Tip**

- Primary fuels: Natural sources like coal, petroleum, natural gas. - Secondary fuels: Derived from primary fuels, e.g., kerosene, gasoline.

---

**28. Which of the following molecules will not display an infrared spectrum?**

- (A)  $\text{CO}_2$
- (B)  $\text{N}_2$
- (C) Benzene
- (D) HCCH

**Correct Answer:** (B)  $\text{N}_2$

**Solution:**

**Step 1:** Understanding infrared activity. - A molecule absorbs IR radiation if it has a change in dipole moment. -  $\text{N}_2$  is non-polar and does not exhibit IR absorption.

**Step 2:** Selecting the correct option. Since  $\text{N}_2$  lacks a dipole moment, the correct answer is (B).

**Quick Tip**

- Heteronuclear molecules (e.g.,  $\text{CO}_2$ , HCl) show IR activity. - Homonuclear diatomic gases (e.g.,  $\text{N}_2$ ,  $\text{O}_2$ ) do not absorb IR.

---

**29. Which one of the following behaves like an intrinsic semiconductor, at absolute zero temperature?**

- (A) Superconductor
- (B) Insulator
- (C) n-type semiconductor
- (D) p-type semiconductor

**Correct Answer:** (B) Insulator

**Solution:**

**Step 1:** Understanding semiconductors at absolute zero. - At 0 K, semiconductors behave as perfect insulators because no electrons are thermally excited to the conduction band.

**Step 2:** Selecting the correct option. Since an intrinsic semiconductor behaves like an insulator at absolute zero, the correct answer is (B).

### Quick Tip

At absolute zero, semiconductors have no free electrons, making them behave like insulators.

**30. The energy gap (eV) at 300K of the material GaAs is**

- (A) 0.36
- (B) 0.85
- (C) 1.20
- (D) 1.42

**Correct Answer:** (D) 1.42

### Solution:

**Step 1:** Understanding bandgap energy. - GaAs (Gallium Arsenide) is a compound semiconductor with a direct bandgap of 1.42 eV at 300K.

**Step 2:** Selecting the correct option. Since the bandgap of GaAs is 1.42 eV, the correct answer is (D).

### Quick Tip

- Si (Silicon): 1.1 eV - GaAs (Gallium Arsenide): 1.42 eV - Ge (Germanium): 0.66 eV

**31. Which of the following ceramic materials will be used for spark plug insulator?**

- (A)  $\text{SnO}_2$
- (B)  $\alpha\text{-Al}_2\text{O}_3$
- (C) TiN
- (D)  $\text{YBaCuO}_7$

**Correct Answer:** (B)  $\alpha\text{-Al}_2\text{O}_3$

### Solution:

**Step 1:** Understanding the properties of spark plug insulators. - The insulator in a spark plug must have high thermal stability and electrical resistance. - Alumina ( $\alpha\text{-Al}_2\text{O}_3$ ) is widely

used due to its excellent insulating properties.

**Step 2:** Selecting the correct option. Since  $\alpha\text{-Al}_2\text{O}_3$  is commonly used in spark plug insulators, the correct answer is (B).

#### Quick Tip

- Alumina ( $\alpha\text{-Al}_2\text{O}_3$ ) is a high-performance ceramic with high thermal conductivity and electrical insulation.

---

**32. In unconventional superconductivity, the pairing interaction is**

- (A) Non-phononic
- (B) Phononic
- (C) Photonic
- (D) Non-excitonic

**Correct Answer:** (A) Non-phononic

#### Solution:

**Step 1:** Understanding unconventional superconductivity. - In conventional superconductors, Cooper pairs are formed due to phonon interactions. - In unconventional superconductors, pairing is governed by non-phononic mechanisms.

**Step 2:** Selecting the correct option. Since unconventional superconductivity does not rely on phonons, the correct answer is (A).

#### Quick Tip

- Conventional superconductors: Electron-phonon interactions. - Unconventional superconductors: Other mechanisms (e.g., magnetic fluctuations).

---

**33. What is the magnetic susceptibility of an ideal superconductor?**

- (A) 1
- (B) -1
- (C) 0
- (D) Infinite

**Correct Answer:** (B) -1

**Solution:**

**Step 1:** Understanding magnetic susceptibility. - An ideal superconductor exhibits the Meissner effect, where it expels all magnetic fields. - This results in a magnetic susceptibility ( $\chi$ ) of -1.

**Step 2:** Selecting the correct option. Since an ideal superconductor has  $\chi = -1$ , the correct answer is (B).

**Quick Tip**

- Magnetic susceptibility ( $\chi$ ) for perfect diamagnetism in superconductors is  $-1$ .

---

**34. The Rayleigh scattering loss, which varies as \_\_\_\_\_ in a silica fiber.**

- (A)  $\lambda^0$
- (B)  $\lambda^{-2}$
- (C)  $\lambda^{-4}$
- (D)  $\lambda^{-6}$

**Correct Answer:** (C)  $\lambda^{-4}$

**Solution:**

**Step 1:** Understanding Rayleigh scattering. - Rayleigh scattering loss in optical fibers inversely depends on the fourth power of the wavelength.

**Step 2:** Selecting the correct option. Since Rayleigh scattering follows  $\lambda^{-4}$ , the correct answer is (C).

**Quick Tip**

- Scattering loss in optical fibers follows  $\lambda^{-4}$ , meaning shorter wavelengths scatter more.

---

**35. What is the near field length  $N$  that can be calculated from the relation (if  $D$  is the diameter of the transducer and  $\lambda$  is the wavelength of sound in the material)?**

- (A)  $D^2/2\lambda$

(B)  $D^2/4\lambda$

(C)  $2D^2/\lambda$

(D)  $4D^2/\lambda$

**Correct Answer:** (A)  $D^2/2\lambda$

**Solution:**

**Step 1:** Understanding near field length in acoustics. - The near field length (N) is given by:

$$N = \frac{D^2}{2\lambda}$$

**Step 2:** Selecting the correct option. Since the correct formula is  $D^2/2\lambda$ , the correct answer is (A).

#### Quick Tip

- Near field length (N) determines the focusing and directivity of ultrasonic waves.

---

**36. Which one of the following represents an open thermodynamic system?**

(A) Manual ice cream freezer

(B) Centrifugal pump

(C) Pressure cooker

(D) Bomb calorimeter

**Correct Answer:** (B) Centrifugal pump

**Solution:**

**Step 1:** Understanding open thermodynamic systems. - An open system allows mass and energy transfer across its boundary. - Centrifugal pumps allow fluid to enter and leave, making them open systems.

**Step 2:** Selecting the correct option. Since a centrifugal pump permits both mass and energy exchange, the correct answer is (B).

#### Quick Tip

- Open system: Allows mass and energy transfer. - Closed system: Only energy is transferred. - Isolated system: Neither mass nor energy is transferred.

---

**37. In a new temperature scale say  $^{\circ}P$ , the boiling and freezing points of water at one atmosphere are  $100^{\circ}P$  and  $300^{\circ}P$  respectively. Correlate this scale with the Centigrade scale. The reading of  $0^{\circ}P$  on the Centigrade scale is:**

- (A)  $0^{\circ}C$
- (B)  $50^{\circ}C$
- (C)  $100^{\circ}C$
- (D)  $150^{\circ}C$

**Correct Answer:** (D)  $150^{\circ}C$

**Solution:**

**Step 1:** Establishing the correlation formula. - We use the linear transformation formula:

$$C = \frac{100}{(300 - 100)}(P - 100)$$

$$C = \frac{100}{200}(P - 100)$$

$$C = 0.5(P - 100)$$

**Step 2:** Calculating for  $0^{\circ}P$ .

$$C = 0.5(0 - 100) = -50^{\circ}C$$

**Step 3:** Selecting the correct option. Since  $0^{\circ}P$  corresponds to  $-50^{\circ}C$ , the correct answer is (D).

**Quick Tip**

- Use linear conversion formulas when correlating temperature scales.

---

**38. Which cross-section of the beam subjected to bending moment is more economical?**

- (A) Rectangular cross-section
- (B) I - cross-section
- (C) Circular cross-section
- (D) Triangular cross-section

**Correct Answer:** (B) I - cross-section

**Solution:**

**Step 1:** Understanding economical beam cross-sections. - The I-section provides maximum strength with minimum material. - This reduces material cost while ensuring high bending resistance.

**Step 2:** Selecting the correct option. Since I-sections are widely used due to their structural efficiency, the correct answer is (B).

**Quick Tip**

- I-beams are widely used in structural applications due to their high strength-to-weight ratio.

---

**39. The velocity of a particle is given by  $V = 4t^3 - 5t^2$ . When does the acceleration of the particle become zero?**

- (A) 8.33 s
- (B) 0.833 s
- (C) 0.0833 s
- (D) 1 s

**Correct Answer:** (B) 0.833 s

**Solution:**

**Step 1:** Finding acceleration. - Acceleration is the derivative of velocity:

$$a = \frac{dV}{dt} = 12t^2 - 10t$$

- Setting acceleration to zero:

$$12t^2 - 10t = 0$$

**Step 2:** Solving for  $t$ .

$$t(12t - 10) = 0$$

$$t = 0, \quad t = \frac{10}{12} = 0.833s$$

**Step 3:** Selecting the correct option. Since acceleration is zero at  $t = 0.833\text{s}$ , the correct answer is (B).

#### Quick Tip

- Acceleration is the derivative of velocity, and setting it to zero gives instantaneous rest points.

---

**40. What will happen if the frequency of power supply in a pure capacitor is doubled?**

- (A) The current will also be doubled
- (B) The current will reduce to half
- (C) The current will remain the same
- (D) The current will increase to four-fold

**Correct Answer:** (A) The current will also be doubled

**Solution:**

**Step 1:** Understanding capacitive reactance. - The current in a capacitor is given by:

$$I = V\omega C$$

where  $\omega = 2\pi f$ .

**Step 2:** Effect of doubling frequency. - If  $f$  is doubled,  $\omega$  is also doubled. - Since  $I \propto \omega$ , current also doubles.

**Step 3:** Selecting the correct option. Since doubling frequency doubles current, the correct answer is (A).

#### Quick Tip

- Capacitive current is proportional to frequency ( $I \propto f$ ).

**PART III**

**01 – CIVIL ENGINEERING**

(Answer ALL questions)

**41. As compared to uniaxial tension or compression, the strain energy stored in bending is only**

- (A)  $\frac{1}{8}$
- (B)  $\frac{1}{4}$
- (C)  $\frac{1}{3}$
- (D)  $\frac{1}{2}$

**Correct Answer:** (B)  $\frac{1}{4}$

**Solution:**

**Step 1:** Understanding strain energy in bending. - In uniaxial tension or compression, strain energy density is given by:

$$U = \frac{\sigma^2}{2E}$$

- In bending, strain energy is stored in the bending moment.

**Step 2:** Applying the energy relation. - Strain energy stored in bending is one-fourth of that stored in uniaxial tension.

**Step 3:** Selecting the correct option. Since the strain energy stored in bending is  $\frac{1}{4}$  of that in uniaxial tension, the correct answer is (B).

**Quick Tip**

- Strain energy in bending is always less than that in direct tension/compression.

---

**42. How many elastic constants will be in a non-homogeneous, non-isotropic material?**

- (A) 9
- (B) 15
- (C) 20
- (D) 21

**Correct Answer:** (D) 21

**Solution:**

**Step 1:** Understanding elastic constants. - For an isotropic material, there are 2 independent elastic constants. - For an orthotropic material, there are 9 independent elastic constants. - For a non-homogeneous, non-isotropic material, there are 21 independent constants.

**Step 2:** Selecting the correct option. Since a non-homogeneous, non-isotropic material requires 21 elastic constants, the correct answer is (D).

**Quick Tip**

- Isotropic materials: 2 constants - Orthotropic materials: 9 constants - Anisotropic materials: 21 constants

---

**43. In a simply supported beam ( $l + 2a$ ) with equal overhangs ( $a$ ) and carrying a uniformly distributed load over its entire length, B.M. at the middle point of the beam will be zero if**

(A)  $l = 2a$

(B)  $l = 4a$

(C)  $l < 2a$

(D)  $l > a$

**Correct Answer:** (A)  $l = 2a$

**Solution:**

**Step 1:** Understanding moment distribution. - In a simply supported beam with equal overhangs and UDL, bending moment cancels at the midpoint when  $l = 2a$ .

**Step 2:** Selecting the correct option. Since the midpoint bending moment is zero when  $l = 2a$ , the correct answer is (A).

**Quick Tip**

- When overhangs are half the span of the beam, the bending moment at the center is zero.

**44. The ratio of the maximum deflections of a beam simply supported at its ends with an isolated central load and that of with a uniformly distributed load over its entire length, is**

- (A) 1
- (B) 3/4
- (C) 8/5
- (D) 2/3

**Correct Answer:** (C) 8/5

**Solution:**

**Step 1:** Finding deflection formulas. - Maximum deflection for point load at center:

$$\delta_{\text{point}} = \frac{PL^3}{48EI}$$

- Maximum deflection for UDL over entire span:

$$\delta_{\text{UDL}} = \frac{5wL^4}{384EI}$$

**Step 2:** Taking the ratio.

$$\frac{\delta_{\text{point}}}{\delta_{\text{UDL}}} = \frac{8}{5}$$

**Step 3:** Selecting the correct option. Since the ratio is 8/5, the correct answer is (C).

#### Quick Tip

- UDL causes less deflection compared to a concentrated load.

**45. A thin cylindrical shell of diameter  $d$  and thickness  $t$  is subjected to an internal pressure  $p$ . The ratio of longitudinal strain to volumetric strain is**

- (A)  $\frac{(m-1)}{(2m-1)}$
- (B)  $\frac{(m-1)}{(m-1)}$
- (C)  $\frac{(m-2)}{(3m-4)}$
- (D)  $\frac{(m-2)}{(5m-4)}$

**Correct Answer:** (C)  $\frac{(m-2)}{(3m-4)}$

**Solution:**

**Step 1:** Understanding strain components. - Longitudinal strain:

$$\epsilon_L = \frac{pd}{4tE}(1 - 2\nu)$$

- Volumetric strain:

$$\epsilon_V = 3\epsilon_L$$

**Step 2:** Taking the ratio.

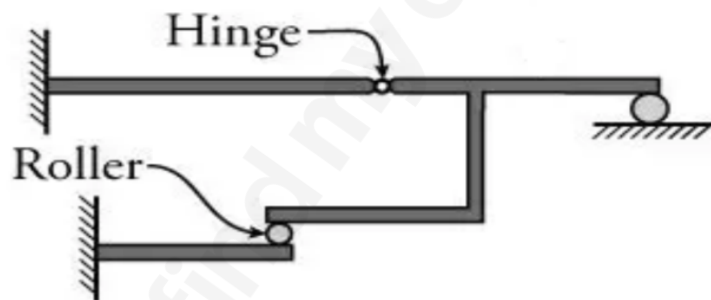
$$\frac{\epsilon_L}{\epsilon_V} = \frac{(m - 2)}{(3m - 4)}$$

**Step 3:** Selecting the correct option. Since the correct ratio is  $\frac{(m-2)}{(3m-4)}$ , the correct answer is (C).

#### Quick Tip

- The volumetric strain is three times the longitudinal strain.

**46. The degree of static indeterminacy for the frame shown in the figure is**



- (A) 3
- (B) 2
- (C) 1
- (D) 4

**Correct Answer:** (A) 3

**Solution:**

**Step 1:** Finding the number of unknown reactions. - The given frame consists of a hinge support, a roller support, and an internal hinge. - Hinge support provides 2 reaction forces, roller support provides 1 reaction force, and the internal hinge contributes constraints.

**Step 2:** Applying the static indeterminacy formula.

$$\text{Static Indeterminacy} = \text{Total Reactions} - \text{Equilibrium Equations}$$

- Total reactions = 5 - Equilibrium equations = 2 (since it's a plane frame)

**Step 3:** Calculating the degree of indeterminacy.

$$\text{Degree of Indeterminacy} = 5 - 2 = 3$$

Thus, the correct answer is (A) 3.

#### Quick Tip

- The number of independent equilibrium equations in plane structures is always 2.

**47. If the hinged end of a propped cantilever of span  $L$  settles by an amount  $\delta$ , then the rotation of the hinged end will be**

- (A)  $\frac{\delta}{L}$
- (B)  $\frac{1.5\delta}{L}$
- (C)  $\frac{2\delta}{L}$
- (D) Zero

**Correct Answer:** (C)  $\frac{2\delta}{L}$

**Solution:**

**Step 1:** Understanding support settlement. - When the hinged end of a propped cantilever settles, the beam undergoes rotation at the hinge.

**Step 2:** Applying the slope-deflection method. - The rotation  $\theta$  at the hinge due to settlement is given by:

$$\theta = \frac{2\delta}{L}$$

**Step 3:** Selecting the correct option. Since the rotation at the hinge is  $\frac{2\delta}{L}$ , the correct answer is (C).

#### Quick Tip

- For propped cantilevers, settlement at the hinge leads to double the deflection ratio.

---

**48. The shape of the influence line diagram for horizontal thrust in a symmetrical three-hinged parabolic arch is**

- (A) Rectangular
- (B) Parabolic
- (C) Triangular
- (D) Trapezoidal

**Correct Answer:** (B) Parabolic

**Solution:**

**Step 1:** Understanding influence lines. - In three-hinged parabolic arches, the horizontal thrust influence line follows the same curvature as the arch geometry.

**Step 2:** Selecting the correct shape. - Since the given structure is parabolic, the influence line diagram is also parabolic.

Thus, the correct answer is (B) Parabolic.

**Quick Tip**

- Influence line diagrams take the same shape as the structural curve for arches.

---

**49. The vertical deflection at the free end of a quadrantal ring (Radius  $R$  with uniform flexural rigidity  $EI$ ) which is fixed at the base and subjected to a vertically downward load  $W$  at the free end is**

- (A)  $\frac{WR^3\pi}{4EI}$
- (B)  $\frac{WR^3\pi}{2EI}$
- (C)  $\frac{WR^3\pi}{3EI}$
- (D)  $\frac{WR^3\pi}{EI}$

**Correct Answer:** (B)  $\frac{WR^3\pi}{2EI}$

**Solution:**

**Step 1:** Applying deflection formula for a quadrantal ring. - The deflection  $\delta$  at the free end

of a quadrantal ring due to a point load  $W$  at the tip is:

$$\delta = \frac{WR^3\pi}{2EI}$$

**Step 2:** Selecting the correct option. Since the formula matches with option (B), the correct answer is (B).

#### Quick Tip

- The deflection at a free end of a curved beam depends on the radius  $R$  and flexural rigidity  $EI$ .

**50. A fixed beam of uniform cross-section carries a point load  $P$  at the mid-span. If the moment of inertia of the middle half portion is reduced to half its previous value, then the fixed end moments will**

- (A) Increase
- (B) Decrease
- (C) Remain constant
- (D) Change direction

**Correct Answer:** (B) Decrease

#### Solution:

**Step 1:** Understanding fixed end moment changes. - The fixed end moments ( $FEM$ ) depend on stiffness, which is proportional to moment of inertia ( $I$ ).

**Step 2:** Effect of reducing  $I$ . - Since  $FEM = \frac{PL}{8} \cdot \frac{I}{L}$ , reducing  $I$  to half means the FEM will decrease.

Thus, the correct answer is (B) Decrease.

#### Quick Tip

- The fixed end moment is directly proportional to the stiffness of the beam.

**51. The bulking of the sand is increased in volume from 20% to 40% of various sand and moisture content ranges from \_\_\_\_\_ to \_\_\_\_\_ percent.**

- (A) 50 to 80
- (B) 30 to 50
- (C) 5 to 8
- (D) 8 to 11

**Correct Answer:** (A) 50 to 80

**Solution:**

**Step 1:** Understanding bulking of sand. - Bulking occurs due to surface tension of moisture in fine sand particles.

**Step 2:** Identifying the moisture content range. - Bulking increases maximum between 50-80% depending on the sand fineness.

Thus, the correct answer is (A) 50 to 80.

#### Quick Tip

- Fine sands show higher bulking than coarse sands.

---

**52. In the preservation process of timber, the surface is burnt and the burnt part acts as a protective coating is named as**

- (A) Charring
- (B) Painting
- (C) Spraying
- (D) Diffusion

**Correct Answer:** (A) Charring

**Solution:**

**Step 1:** Understanding timber preservation. - Charring is a traditional method where wood surfaces are burnt to create a protective carbon layer.

**Step 2:** Why charring protects timber? - The charred layer prevents moisture and decay and also enhances fire resistance.

Thus, the correct answer is (A) Charring.

### Quick Tip

- Charring improves moisture resistance and is widely used in rural constructions.

---

**53. A scratch is made on the surface of the brick. In a good brick, no impression will be left on the surface. This process of testing of bricks is called as**

- (A) Efflorescence
- (B) Hardness
- (C) Wetness
- (D) Dimensional tolerance

**Correct Answer:** (B) Hardness

**Solution:**

**Step 1:** Understanding brick hardness test. - A good quality brick should resist scratches made by hard objects like steel.

**Step 2:** Selecting the correct test. - The hardness test checks whether bricks leave no scratch marks.

Thus, the correct answer is (B) Hardness.

### Quick Tip

- Hardness is a primary indicator of brick durability.

---

**54. It is the kind of concrete to which various fibres of very small diameter (10 to 20 microns) and short lengths (10 to 50mm length) are added to make a concrete. The name of the concrete is**

- (A) Self compacting concrete
- (B) Flyash Concrete
- (C) Fibre reinforced concrete
- (D) Light weight concrete

**Correct Answer:** (C) Fibre reinforced concrete

**Solution:**

**Step 1:** Understanding the definition. - Fibre reinforced concrete (FRC) is a type of concrete with added fibres to enhance tensile strength and durability.

**Step 2:** Properties of Fibre Reinforced Concrete. - Fibres are typically 10-20 microns in diameter and range from 10-50mm in length. - It is used to prevent cracking and improve toughness.

Thus, the correct answer is (C) Fibre reinforced concrete.

#### Quick Tip

- Fibre reinforced concrete reduces shrinkage cracks and improves impact resistance.

---

**55. The 18-8 stainless steel indicates the one of the following compositions**

- (A) 18% Copper and 8% Nickel
- (B) 18% Chromium and 8% Nickel
- (C) 18% Nickel and 8% Chromium
- (D) 18% Nickel and 8% Copper

**Correct Answer:** (B) 18% Chromium and 8% Nickel

#### Solution:

**Step 1:** Understanding 18-8 stainless steel. - The 18-8 stainless steel is a type of austenitic stainless steel. - It is made up of 18% Chromium and 8% Nickel, which makes it highly corrosion-resistant.

**Step 2:** Applications of 18-8 stainless steel. - It is commonly used in kitchen utensils, food processing equipment, and surgical instruments due to its excellent strength and rust resistance.

Thus, the correct answer is (B) 18% Chromium and 8% Nickel.

#### Quick Tip

- The 18-8 stainless steel is also known as Type 304 Stainless Steel, which is one of the most widely used stainless steels.

---

**56. In limit state design of concrete structures, the strain distribution is assumed to be**

- (A) linear
- (B) non-linear
- (C) parabolic
- (D) parabolic and rectangular

**Correct Answer:** (D) parabolic and rectangular

**Solution:**

**Step 1:** Understanding strain distribution in limit state design. - In limit state design, strain distribution is assumed to be parabolic and rectangular to provide accurate stress calculations.

**Step 2:** Importance of strain distribution. - The parabolic portion represents the realistic stress-strain relationship at low strains. - The rectangular portion is used for simplification at higher strains.

Thus, the correct answer is (D) parabolic and rectangular.

#### Quick Tip

- Limit state design is a modern method that ensures safety and serviceability.

---

**57. The loss of stress with time at constant strain in steel is called**

- (A) relaxation
- (B) creep
- (C) shrinkage
- (D) ductility

**Correct Answer:** (A) relaxation

**Solution:**

**Step 1:** Definition of relaxation. - Relaxation occurs when stress reduces in a material even when strain remains constant. - This is significant in prestressed concrete and high-strength steel.

**Step 2:** Difference between relaxation and creep. - Relaxation happens under constant strain. - Creep happens under constant stress.

Thus, the correct answer is (A) relaxation.

**Quick Tip**

- Relaxation is important in prestressed concrete to prevent excessive loss of tension in tendons.

**58. The effective length of a column in a reinforced concrete building frame, as per IS : 456-2000, is independent of the**

- (A) frame type (i.e., braced (no sway) or unbraced (with sway))
- (B) span of beams
- (C) height of the column
- (D) loads acting on the frame

**Correct Answer:** (D) loads acting on the frame

**Solution:**

**Step 1:** Understanding effective length of columns. - The effective length of a column depends on support conditions, frame type, and column height, but it does not depend on the loads acting on the frame.

**Step 2:** IS 456:2000 guidelines. - IS 456-2000 defines effective length factors based on the end conditions of the column, bracing conditions, and frame stiffness.

Thus, the correct answer is (D) loads acting on the frame.

**Quick Tip**

- Effective length is crucial in buckling analysis and designing slender columns.

**59. The main function of lateral ties in a reinforced concrete rectangular column under axial compression is to**

- (A) avoid the buckling of the longitudinal steel under compression
- (B) provide adequate shear capacity
- (C) provide adequate confinement to concrete
- (D) reduce the axial deformation of the column

**Correct Answer:** (A) avoid the buckling of the longitudinal steel under compression

**Solution:**

**Step 1:** Understanding lateral ties in reinforced concrete columns. - Lateral ties are provided in reinforced concrete columns to hold the longitudinal reinforcement (main bars) in position and prevent their buckling under axial compression.

**Step 2:** Role of lateral ties. - They restrain lateral expansion of the column core. - They prevent buckling of longitudinal steel, ensuring better load transfer and stability. - While they do provide some confinement to concrete, their primary function is to prevent buckling of longitudinal reinforcement.

Thus, the correct answer is (A) avoid the buckling of the longitudinal steel under compression.

**Quick Tip**

- Lateral ties are crucial in preventing premature failure of reinforced concrete columns, particularly in slender columns subjected to axial compression.

**60. As per IS 456 : 2000, Limit state of collapse – flexure, the maximum strain in reinforcing bars under tension at failure shall not be less than -----, where  $f_y$  is the characteristic strength of steel and  $E_s$  is the Modulus of elasticity of steel.**

- (A)  $\frac{f_y}{E_s}$
- (B)  $0.002 + \frac{f_y}{E_s}$
- (C)  $\frac{f_y}{1.15E_s}$
- (D)  $0.002 + \frac{f_y}{1.15E_s}$

**Correct Answer:** (B)  $0.002 + \frac{f_y}{E_s}$

**Solution:**

**Step 1:** Understanding maximum strain in reinforcing steel. - As per IS 456:2000, the maximum tensile strain at failure for reinforcing steel should be at least  $0.002 + \frac{f_y}{E_s}$ . - This formula accounts for the elastic strain ( $\frac{f_y}{E_s}$ ) and an additional plastic strain (0.002), ensuring ductile failure.

**Step 2:** Importance in design. - This strain ensures sufficient rotation capacity of the section before failure. - It prevents brittle failure, allowing warning signs before collapse.

Thus, the correct answer is (B)  $0.002 + \frac{f_y}{E_s}$ .

#### Quick Tip

- Ensuring adequate tensile strain in reinforcing steel improves ductility and prevents brittle failure in flexural members.

---

**61. As per IS800-2007, the minimum centre-to-centre bolt spacing measured in the direction of stress is -----, where  $d$  is the nominal diameter of bolt.**

- (A)  $1.5d$
- (B)  $2.0d$
- (C)  $2.5d$
- (D)  $3.0d$

**Correct Answer:** (C)  $2.5d$

#### Solution:

**Step 1:** Understanding bolt spacing in steel structures. - As per IS 800:2007, the minimum bolt spacing in the direction of stress should be at least  $2.5d$ , where  $d$  is the nominal diameter of the bolt.

**Step 2:** Reason for spacing requirement. - Ensuring sufficient spacing prevents overlapping stress zones in the steel plate. - It reduces the risk of shear failure and improves load distribution.

Thus, the correct answer is (C)  $2.5d$ .

#### Quick Tip

- Proper bolt spacing is critical in preventing tearing failures and ensuring effective load transfer in bolted connections.

---

**62. The net section strength of a tension member ----- with the increase in ductility of steel.**

- (A) increases
- (B) decreases

(C) does not change

(D) becomes zero

**Correct Answer:** (C) does not change

**Solution:**

**Step 1:** Understanding net section strength. - The net section strength of a tension member is primarily dependent on material strength and geometry, not ductility.

**Step 2:** Effect of ductility on tension members. - While ductility helps redistribute stresses, it does not directly influence the net section strength. - Net section strength is governed by the ultimate tensile strength and the effective area of the tension member.

Thus, the correct answer is (C) does not change.

#### Quick Tip

- Ductility improves structural performance by delaying sudden failure, but does not directly affect net section strength.

---

**63. As per IS 800 : 2007, the maximum deflection in a beam shall not exceed**

(A)  $L/120$

(B)  $L/150$

(C)  $L/250$

(D)  $L/325$

**Correct Answer:** (C)  $L/250$

**Solution:**

**Step 1:** Maximum deflection limits as per IS 800:2007. - As per IS 800:2007, beam deflection limits are set based on serviceability requirements. - The maximum permissible vertical deflection in a beam under service loads should not exceed  $L/250$ .

**Step 2:** Importance of deflection limits. - Excessive deflection can lead to cracking of walls, discomfort to occupants, and serviceability failure. - Deflection limits ensure safety and functionality of structures.

Thus, the correct answer is (C)  $L/250$ .

**Quick Tip**

- Deflection limits in steel structures are crucial for preventing serviceability issues, such as cracks in adjacent walls and discomfort to occupants.

---

**64. As per IS 800-2007, the shear force does not influence the bending moment capacity when the factored design shear force does not exceed the design shear strength by**

- (A) 20%
- (B) 40%
- (C) 60%
- (D) 80%

**Correct Answer:** (C) 60%

**Solution:**

**Step 1:** Understanding the influence of shear force on bending moment capacity. - According to IS 800:2007, when the factored design shear force does not exceed 60% of the design shear strength, it does not reduce the bending moment capacity of the section. - Beyond this limit, shear effects need to be accounted for in bending moment capacity calculations.

**Step 2:** Importance in design considerations. - If the shear force is within the 60% limit, the plastic moment capacity remains unaffected. - If it exceeds 60%, the available bending capacity is reduced due to combined shear and bending effects.

Thus, the correct answer is (C) 60%.

**Quick Tip**

- When designing beams as per IS 800:2007, ensure that factored shear force remains below 60% of the design shear strength to avoid reduction in bending moment capacity.

---

**65. Intermediate vertical stiffeners are provided in plate girders to prevent**

- (A) local buckling
- (B) web buckling
- (C) excessive deflection

(D) flange buckling

**Correct Answer:** (B) web buckling

**Solution:**

**Step 1:** Understanding the function of stiffeners. - Plate girders are used for large-span structures where bending stresses are significant. - Intermediate vertical stiffeners are used to prevent web buckling, which occurs due to shear forces.

**Step 2:** Types of buckling in plate girders. - Local buckling occurs in thin sections but is controlled by plate thickness. - Flange buckling is prevented by horizontal stiffeners. - Excessive deflection is controlled by the overall section design. - Web buckling, which happens under high shear forces, is controlled by intermediate vertical stiffeners.

Thus, the correct answer is (B) web buckling.

#### Quick Tip

To prevent web buckling in plate girders, use intermediate vertical stiffeners at appropriate intervals.

---

**66. An undrained triaxial compression test is carried out on a saturated clay sample under a cell pressure of 50 kN/m<sup>2</sup>. The sample failed at a deviator stress of 100 kN/m<sup>2</sup>.**

**The cohesion of this clay sample would be**

- (A) 25 kN/m<sup>2</sup>
- (B) 50 kN/m<sup>2</sup>
- (C) 75 kN/m<sup>2</sup>
- (D) 100 kN/m<sup>2</sup>

**Correct Answer:** (B) 50 kN/m<sup>2</sup>

**Solution:**

**Step 1:** Using the cohesion formula. - In an undrained triaxial test, cohesion  $C$  is given by:

$$C = \frac{\text{Deviator Stress}}{2}$$

- Given deviator stress = 100 kN/m<sup>2</sup>.

**Step 2:** Substituting values.

$$C = \frac{100}{2} = 50 \text{ kN/m}^2$$

Thus, the correct answer is (B) 50 kN/m<sup>2</sup>.

#### Quick Tip

In an undrained triaxial test, cohesion is found using the formula  $C = \frac{\text{Deviator Stress}}{2}$ .

**67. While computing the values of limits of consistency and consistency indices, it is found that liquidity index has negative value. Consider the following comment on this value.**

1. Liquidity index cannot have a negative value and should be taken as zero.
2. Liquidity index can have a negative value.
3. The soil tested is in semisolid state and stiff.
4. The soil tested is in medium soft state.

Which of these statements are correct?

- (A) 1 and 4
- (B) 1 and 3
- (C) 2 and 3
- (D) 2 and 4

**Correct Answer:** (C) 2 and 3

**Solution:**

**Step 1:** Understanding Liquidity Index (LI). - Liquidity Index (LI) is given by:

$$LI = \frac{W - PL}{LL - PL}$$

where W is natural moisture content, PL is plastic limit, and LL is liquid limit.

**Step 2:** Can Liquidity Index be negative? - Yes, LI can be negative when natural moisture content (W) is below the plastic limit (PL). - This happens when soil is in the semisolid state and is stiff.

**Step 3:** Evaluating the statements. - Statement 1 is incorrect because LI can be negative. -

Statement 2 is correct because LI can have negative values. - Statement 3 is correct because

negative LI means soil is in the semisolid state. - Statement 4 is incorrect because medium soft soil has positive LI.

Thus, the correct answer is (C) 2 and 3.

#### Quick Tip

If the Liquidity Index (LI) is negative, the soil is in the semisolid state and is stiff.

#### 68. Consider the following statements:

1. 'Relative compaction' is not the same as 'relative density'.
2. Vibroflotation is not effective in the case of highly cohesive soils.
3. 'Zero air void line' and '100% saturation line' are not identical.

Of these statements:

- (A) 1 and 2 are correct
- (B) 1 and 3 are correct
- (C) 2 and 3 are correct
- (D) 3 alone is correct

**Correct Answer:** (C) 2 and 3 are correct

#### Solution:

**Step 1:** Understanding the concept of **Relative Compaction vs. Relative Density.** -

Relative Compaction is the ratio of field dry density to laboratory maximum dry density, expressed as a percentage. - Relative Density applies to coarse-grained soils, comparing void ratios. - However, the terms are sometimes used interchangeably in engineering practice.

**Step 2:** Effectiveness of **Vibroflotation.** - Vibroflotation is a deep compaction technique effective for granular soils. - It is not effective for highly cohesive soils, as they resist vibration.

**Step 3:** Understanding **Zero Air Void Line vs. 100% Saturation Line.** - The Zero Air Void Line (ZAVL) represents maximum dry density achievable with full saturation (no air). - The 100- Both are not identical because air content and compaction energy vary.

**Step 4:** Evaluating the Statements. - Statement 1 is debatable due to engineering usage. - Statement 2 is correct (Vibroflotation is ineffective for cohesive soils). - Statement 3 is

correct (ZAVL and 100

Thus, the correct answer is (C) 2 and 3 are correct.

#### Quick Tip

- Use Relative Density for granular soils and Relative Compaction for field density comparisons. - Vibroflotation is ineffective for cohesive soils. - ZAVL and 100

#### 69. Consider the following statements:

1. Constant head permeameter is best suited for determination of coefficient of permeability of highly impermeable soils.
2. Coefficient of permeability of a soil mass decreases with an increase in viscosity of the pore fluid.
3. Coefficient of permeability of a soil mass increases with an increase in temperature of the fluid.

Of these statements:

- (A) 1 and 2 are correct
- (B) 1 and 3 are correct
- (C) 2 and 3 are correct
- (D) 1, 2 and 3 are correct

**Correct Answer:** (C) 2 and 3 are correct

#### Solution:

**Step 1:** Understanding the permeability measurement. - The Constant Head Permeameter is best suited for highly permeable soils (e.g., sand) and not for impermeable soils like clay. - Falling Head Permeameter is preferred for impermeable soils.

**Step 2:** Effect of Viscosity on Permeability. - Permeability decreases as the viscosity of the pore fluid increases, since fluid movement is hindered.

**Step 3:** Effect of Temperature on Permeability. - Higher temperature reduces viscosity, which increases permeability.

Thus, statements 2 and 3 are correct, but statement 1 is incorrect, making option (C) 2 and 3 are correct the right choice.

### Quick Tip

- Constant Head Permeameter is used for permeable soils, and Falling Head Permeameter for impermeable soils. - Permeability increases with temperature and decreases with viscosity.

**70. What will be the unit weight of a fully saturated soil sample having water content of 38% and grain specific gravity of 2.65?**

- (A) 19.88 kN/m<sup>3</sup>
- (B) 17.88 kN/m<sup>3</sup>
- (C) 16.52 kN/m<sup>3</sup>
- (D) 14.65 kN/m<sup>3</sup>

**Correct Answer:** (B) 17.88 kN/m<sup>3</sup>

**Solution:**

**Step 1:** Using the formula for unit weight of fully saturated soil:

$$\gamma_{\text{saturated}} = \frac{G_s + Sw}{1 + w} \times \gamma_w$$

where,  $G_s = 2.65$  (specific gravity),  $w = 38\% = 0.38$  (water content),  $S = 1$  (fully saturated),  $\gamma_w = 9.81 \text{ kN/m}^3$  (unit weight of water).

**Step 2:** Substituting values:

$$\gamma_{\text{saturated}} = \frac{2.65 + (1 \times 0.38)}{1 + 0.38} \times 9.81$$

**Step 3:** Calculating:

$$\gamma_{\text{saturated}} = \frac{2.65 + 0.38}{1.38} \times 9.81 = \frac{3.03}{1.38} \times 9.81$$

$$\gamma_{\text{saturated}} = 2.196 \times 9.81 = 17.88 \text{ kN/m}^3$$

Thus, the correct answer is (B) 17.88 kN/m<sup>3</sup>.

### Quick Tip

- The unit weight of fully saturated soil depends on specific gravity, water content, and saturation. - Use the formula:

$$\gamma_{\text{saturated}} = \frac{G_s + Sw}{1 + w} \times \gamma_w$$

for accurate calculations.

**71. If two foundations, one narrow and another wide, are resting on a bed of sand carrying the same intensity of load per unit area, then which one is likely to fail early?**

- (A) Narrow foundation
- (B) Wider foundation
- (C) Both will fail simultaneously
- (D) Difficult to judge since other conditions are unknown

**Correct Answer:** (A) Narrow foundation

**Solution:**

**Step 1:** Understanding soil pressure distribution. - In sand, the bearing capacity depends on width of the foundation. - A wider foundation spreads load over a larger area, leading to lower settlement.

**Step 2:** Effect of width on failure. - Narrow foundations lead to higher stress concentration on the soil, causing higher settlement and failure earlier. - Wider foundations distribute the load more effectively, reducing failure chances.

Thus, the correct answer is (A) Narrow foundation.

### Quick Tip

- In sand, narrow foundations fail earlier due to higher stress concentration. - Wider foundations distribute load, reducing settlement and failure risk.

**72. The standard penetration resistance value obtained in a deep deposit of sand at a depth of 6.0 m was 28. The unit weight of sand is 18.0 kN/m<sup>3</sup>. What is the corrected**

value of number of blows for overburden pressure?

- (A) 60
- (B) 57
- (C) 59
- (D) 55

**Correct Answer:** (C) 59

**Solution:**

**Step 1:** Apply the overburden pressure correction formula:

$$N_c = N \times \frac{350}{\sigma' + 70}$$

where,  $N = 28$  (measured SPT value),  $\gamma = 18.0 \text{ kN/m}^3$  (unit weight of sand),  $D = 6.0 \text{ m}$  (depth).

**Step 2:** Calculate overburden pressure  $\sigma'$ :

$$\sigma' = \gamma \times D = 18.0 \times 6 = 108 \text{ kN/m}^2$$

**Step 3:** Substitute values in the correction formula:

$$N_c = 28 \times \frac{350}{108 + 70}$$

**Step 4:** Compute corrected  $N$  value:

$$N_c = 28 \times \frac{350}{178} = 28 \times 1.966 = 59$$

Thus, the corrected number of blows is 59, making the correct answer (C) 59.

#### Quick Tip

- Overburden pressure correction for SPT is calculated using:

$$N_c = N \times \frac{350}{\sigma' + 70}$$

- Ensure proper depth and unit weight values are used.

**73. A square plate of section 30 cm × 30 cm and length 10 m penetrates a deposit of clay having  $C = 5 \text{ kN/m}^2$  and the mobilizing factor  $m = 0.8$ . What is the load carried by the pile by skin friction only?**

- (A) 192 kN
- (B) 75 kN
- (C) 60 kN
- (D) 48 kN

**Correct Answer:** (C) 60 kN

**Solution:**

**Step 1:** Use the skin friction formula:

$$P = \alpha C A_s$$

where,  $C = 5 \text{ kN/m}^2$  (cohesion of clay),  $m = 0.8$  (mobilization factor),

$$A_s = \text{Perimeter} \times \text{Length} = 4 \times 0.3 \times 10 = 12 \text{ m}^2.$$

**Step 2:** Compute the load carried by skin friction:

$$P = 0.8 \times 5 \times 12$$

**Step 3:** Calculation:

$$P = 60 \text{ kN}$$

Thus, the correct answer is (C) 60 kN.

#### Quick Tip

- The skin friction of a pile in clay is calculated using  $P = \alpha C A_s$ , where  $A_s$  is the shaft surface area. - Mobilization factor  $m$  accounts for partial mobilization of cohesion along the pile shaft.

---

**74. During a sampling operation, the drive sampler is advanced 600 mm and the length of the sample recovered is 525 mm. What is the recovery ratio of the sample?**

- (A) 0.125
- (B) 0.140
- (C) 0.875
- (D) 0.143

**Correct Answer:** (C) 0.875

**Solution:**

**Step 1:** Use the formula for recovery ratio:

$$R = \frac{L_s}{L_d}$$

where,  $L_s = 525$  mm (length of recovered sample),  $L_d = 600$  mm (depth of penetration).

**Step 2:** Compute the recovery ratio:

$$R = \frac{525}{600}$$

**Step 3:** Calculation:

$$R = 0.875$$

Thus, the correct answer is (C) 0.875.

#### Quick Tip

- The recovery ratio is an essential parameter to evaluate the efficiency of a sampling process. - A recovery ratio close to 1 indicates minimal sample disturbance.

---

**75. A vertical cut is to be made in saturated clay with  $C = 15$  kN/m<sup>2</sup>,  $\varphi = 0$ , and  $\gamma = 20$  kN/m<sup>3</sup>. What is the theoretical depth to which the clay can be excavated without side collapse?**

- (A) 6 m
- (B) 2 m
- (C) 2.5 m
- (D) 3 m

**Correct Answer:** (D) 3 m

**Solution:**

**Step 1:** Use the equation for the critical depth ( $H_c$ ) in saturated clay:

$$H_c = \frac{4C}{\gamma}$$

where,  $C = 15$  kN/m<sup>2</sup> (cohesion of clay),  $\gamma = 20$  kN/m<sup>3</sup> (unit weight of clay).

**Step 2:** Compute the critical depth:

$$H_c = \frac{4 \times 15}{20}$$

**Step 3:** Calculation:

$$H_c = \frac{60}{20} = 3 \text{ m}$$

Thus, the correct answer is (D) 3 m.

#### Quick Tip

- The critical height ( $H_c$ ) determines the maximum depth that can be excavated without requiring side support. - If excavation exceeds  $H_c$ , the clay may collapse due to shear failure.

---

**76. The Standard percentile value taken for fixing the variability of human characteristics is**

- (A) 80<sup>th</sup> percentile
- (B) 85<sup>th</sup> percentile
- (C) 90<sup>th</sup> percentile
- (D) 95<sup>th</sup> percentile

**Correct Answer:** (D) 95<sup>th</sup> percentile

**Solution:**

**Step 1:** Standard percentiles are used in anthropometric data analysis to account for variability in human characteristics such as height, weight, and reach.

**Step 2:** The 95<sup>th</sup> percentile is commonly used in ergonomic design to accommodate most of the population while ensuring inclusivity.

**Step 3:** This means that 95% of the population falls within the given range, making it a widely accepted standard for safety, usability, and comfort.

Thus, the correct answer is (D) 95<sup>th</sup> percentile.

#### Quick Tip

- The 5<sup>th</sup> percentile is often used for minimum design considerations. - The 50<sup>th</sup> percentile represents the median or average. - The 95<sup>th</sup> percentile is preferred for ensuring broad accommodation in ergonomic designs.

**77. If cross slope of a country is greater than 60%, the terrain is classified as**

- (A) Rolling
- (B) Mountainous
- (C) Steep
- (D) Plain

**Correct Answer:** (C) Steep

**Solution:**

**Step 1:** Terrain classification is based on slope percentages:

- **Plain terrain:** Slope less than 10%.
- **Rolling terrain:** Slope between 10% - 30%.
- **Mountainous terrain:** Slope between 30% - 60%.
- **Steep terrain:** Slope greater than 60%.

**Step 2:** Since the question states that the cross slope is greater than 60%, the correct classification is Steep terrain.

Thus, the correct answer is (C) Steep.

#### Quick Tip

- Steeper terrains require specialized road design and construction due to erosion, drainage, and slope stability issues. - Proper classification helps in selecting appropriate transportation and land use planning strategies.

---

**78. The ductility value of bitumen for suitability in road construction should not be less than**

- (A) 30 cm
- (B) 40 cm
- (C) 50 cm
- (D) 60 cm

**Correct Answer:** (C) 50 cm

**Solution:**

**Step 1: Definition of Ductility of Bitumen** Ductility is a measure of the ability of bitumen to stretch under tensile force before breaking. It is expressed in centimeters.

**Step 2: Standard Requirement for Road Construction** According to Indian Standard specifications (IS 73:2013), the ductility value of bitumen used for road construction should not be less than **50 cm**. If the ductility value is lower than 50 cm, the bitumen may crack under traffic loading and temperature variations.

**Step 3: Conclusion** Since the minimum ductility requirement is 50 cm, the correct answer is (C) 50 cm.

**Quick Tip**

- Higher ductility indicates better elongation properties of bitumen, making it more resistant to cracking. - Bitumen with low ductility can lead to brittle failure of roads, causing potholes and cracks.

---

**79. The limiting value of cant excess for Broad Gauge is**

- (A) 45 mm
- (B) 55 mm
- (C) 65 mm
- (D) 75 mm

**Correct Answer:** (C) 65 mm

**Solution:**

**Step 1: Definition of Cant Excess** Cant excess is the difference between the actual cant provided on a railway track and the equilibrium cant needed for a given speed and curvature.

**Step 2: Standard Limiting Value for Broad Gauge** As per Indian Railways standards, the maximum cant excess permissible for Broad Gauge (BG) tracks is 65 mm. This is to ensure a safe and smooth ride while maintaining track stability.

**Step 3: Conclusion** Since the maximum permissible cant excess for Broad Gauge is 65 mm, the correct answer is (C) 65 mm.

### Quick Tip

- Cant excess must be within permissible limits to prevent excessive lateral forces on the rails, which can cause derailments. - For Meter Gauge (MG), the limiting cant excess is usually lower than Broad Gauge.

---

### 80. In Instrumental Landing System, the middle markers are located

- (A) About 1 km ahead of the runway threshold
- (B) Along the extended centre line of the runway end
- (C) At the runway threshold
- (D) About 2 km ahead of the runway threshold

**Correct Answer:** (A) About 1 km ahead of the runway threshold

#### Solution:

**Step 1: Understanding the Instrument Landing System (ILS)** The Instrument Landing System (ILS) consists of various markers that help pilots in approach and landing. These markers include: - Outer Marker (OM): Located approximately 7.2 km (4 nautical miles) from the runway threshold. - Middle Marker (MM): Located about 1 km (0.5 nautical miles) ahead of the runway threshold. - Inner Marker (IM) (if present): Located just before the runway threshold.

**Step 2: Verifying Middle Marker Placement** - The middle marker provides an indication of being in the final phase of approach. - It emits an amber light and an audio signal (continuous dot-dash tone). - It is positioned at approximately 1 km ahead of the runway threshold, confirming Option (A) is correct.

### Quick Tip

- The Outer Marker indicates the aircraft is near the initial approach point. - The Middle Marker assists in final approach guidance. - The Inner Marker (if present) confirms very short final approach.

---

### 81. Water having a kinematic viscosity of 0.01 stoke flows at a velocity of 2 m/s in a pipe

of 15 cm diameter. For dynamic similarity, the velocity of oil of kinematic viscosity 0.03 stoke in a pipe of the same diameter will be

- (A) 0.33 m/s
- (B) 0.66 m/s
- (C) 2 m/s
- (D) 6 m/s

**Correct Answer:** (B) 0.66 m/s

**Solution:**

**Step 1: Concept of Dynamic Similarity** Dynamic similarity between two fluid flows requires that the Reynolds number ( $Re$ ) remains the same for both cases. Reynolds number is given by:

$$Re = \frac{VD}{\nu}$$

where,  $V$  = Velocity of the fluid (m/s)  $D$  = Diameter of the pipe (m)  $\nu$  = Kinematic viscosity (stoke or  $m^2/s$ )

**Step 2: Equating Reynolds Number** For dynamic similarity:

$$\frac{V_1 D}{\nu_1} = \frac{V_2 D}{\nu_2}$$

Since the diameter  $D$  is the same in both cases, we simplify to:

$$\frac{V_1}{\nu_1} = \frac{V_2}{\nu_2}$$

Substituting given values:

$$\frac{2}{0.01} = \frac{V_2}{0.03}$$

**Step 3: Solving for  $V_2$**

$$V_2 = \frac{2 \times 0.03}{0.01} = 0.66 \text{ m/s}$$

**Conclusion:** The correct answer is (B) 0.66 m/s.

### Quick Tip

- Reynolds number similarity ensures that two flows exhibit similar flow characteristics.
- Higher kinematic viscosity results in lower velocity for maintaining dynamic similarity.

**82. The hydraulic jump in a stilling basin was found to be 10 cm in a model with**

$\frac{I_p}{I_m} = 36$ . **The prototype jump height would be**

- (A) 0.6 m
- (B) 3.6 m
- (C) 21.6 m
- (D) Indeterminable with this data

**Correct Answer:** (B) 3.6 m

**Solution:**

**Step 1: Understanding Hydraulic Jump Scaling** According to hydraulic similitude (Froude model law), the length and height scale as:

$$\frac{H_p}{H_m} = \frac{I_p}{I_m}$$

where: -  $H_p$  = Prototype jump height -  $H_m$  = Model jump height = 10 cm = 0.1 m -  $\frac{I_p}{I_m} = 36$

**Step 2: Calculate Prototype Jump Height**

$$H_p = H_m \times \frac{I_p}{I_m} = 0.1 \times 36 = 3.6 \text{ m}$$

Thus, the correct answer is Option (B) 3.6 m.

### Quick Tip

- Froude's model law governs free-surface flows like hydraulic jumps.
- Use length ratio  $\frac{I_p}{I_m}$  for linear dimensions like height and length.
- Velocity and time scale differently as per the Froude number relationship.

**83. An isochrone is a line on the basin map joining the points**

- (A) Of equal snowfall
- (B) Of rain gauge locations
- (C) Of equal rainfall depth in a given location
- (D) Having the equal time of travel of surface runoff to the catchment outlet

**Correct Answer:** (D) Having the equal time of travel of surface runoff to the catchment outlet

**Solution:**

**Step 1: Understanding Isochrone** An isochrone is a hydrological concept referring to a line that connects points within a catchment area where surface runoff reaches the outlet at the same time.

**Step 2: Explanation of Options** - (A) Incorrect: Isochrones are not related to snowfall. - (B) Incorrect: Rain gauge locations are not connected by isochrones. - (C) Incorrect: Equal rainfall depth is represented by isohyet, not isochrone. - (D) Correct: Isochrones indicate areas where runoff takes the same time to reach the catchment outlet.

#### Quick Tip

- Isochrone maps are widely used in hydrology for flood forecasting and watershed analysis. - Other related terms: - Isohyet: Equal rainfall depth - Isobar: Equal atmospheric pressure - Isotherm: Equal temperature

---

**84. Transmissibility of a confined aquifer having its thickness 15 m and permeability**

**$8 \times 10^{-4}$  m/s is given by:**

- (A)  $1.2 \times 10^{-2}$  m<sup>2</sup>/s
- (B)  $12 \times 10^{-2}$  m<sup>2</sup>/s
- (C)  $0.12 \times 10^{-2}$  m<sup>2</sup>/s
- (D)  $120 \times 10^{-2}$  m<sup>2</sup>/s

**Correct Answer:** (A)  $1.2 \times 10^{-2}$  m<sup>2</sup>/s

**Solution: Step 1:** Use the formula for transmissibility:

$$T = k \times b$$

where: -  $k = 8 \times 10^{-4}$  m/s (permeability), -  $b = 15$  m (thickness).

**Step 2:** Compute  $T$ :

$$T = (8 \times 10^{-4}) \times 15$$

$$T = 1.2 \times 10^{-2} \text{ m}^2/\text{s}$$

Thus, the correct answer is (A)  $1.2 \times 10^{-2} \text{ m}^2/\text{s}$ .

#### Quick Tip

Transmissibility is calculated as the product of permeability and aquifer thickness. The unit is  $\text{m}^2/\text{s}$ .

---

**85. The ratio of the total volume of water delivered to a crop to the area on which it has been spread is called:**

- (A) Critical depth
- (B) Duty
- (C) Delta
- (D) Crop-water depth

**Correct Answer:** (B) Duty

**Solution: Step 1:** The term "Duty" refers to the volume of water required to irrigate a specific area of the crop.

**Step 2:** It is expressed as the total volume of water per unit area over the entire crop-growing period.

Thus, the correct answer is Duty.

#### Quick Tip

In irrigation, "Duty" represents how efficiently water is used to produce crops.

---

**86. For an irrotational flow, the velocity potential lines and the streamlines are always:**

- (A) Parallel to each other
- (B) Coplanar
- (C) Orthogonal to each other
- (D) Inclined to horizontal

**Correct Answer:** (C) Orthogonal to each other

**Solution: Step 1:** In an irrotational flow, the velocity potential  $\phi$  and the stream function  $\psi$  satisfy the Cauchy-Riemann equations.

**Step 2:** The gradients of  $\phi$  and  $\psi$  are perpendicular at every point, making their respective lines orthogonal.

Thus, the correct answer is Orthogonal to each other.

#### Quick Tip

For irrotational flow, streamlines and equipotential lines intersect at right angles.

---

**87. The pressure drop of water flowing through a pipe between two points is measured by using a vertical U-tube manometer. The manometer uses a liquid of density  $2000 \text{ kg/m}^3$ . The difference in height of the liquid column in two limbs is 10 cm. The pressure drop between the two points is:**

- (A)  $98.1 \text{ N/m}^2$
- (B)  $981 \text{ N/m}^2$
- (C)  $1962 \text{ N/m}^2$
- (D)  $19620 \text{ N/m}^2$

**Correct Answer:** (C)  $1962 \text{ N/m}^2$

**Solution: Step 1:** The pressure drop in a manometer is given by:

$$\Delta P = \rho gh$$

where: -  $\rho = 2000 \text{ kg/m}^3$  (density), -  $g = 9.81 \text{ m/s}^2$  (acceleration due to gravity), -  $h = 10 \text{ cm} = 0.1 \text{ m}$ .

**Step 2:** Substituting the values:

$$\Delta P = 2000 \times 9.81 \times 0.1$$

$$\Delta P = 1962 \text{ N/m}^2$$

Thus, the correct answer is (C) 1962 N/m<sup>2</sup>.

#### Quick Tip

Use the formula  $\Delta P = \rho gh$  for pressure drop calculations in manometers.

**88. The hydraulic efficiency of an impulse turbine is maximum when the velocity is \_\_\_\_\_ of the jet velocity.**

- (A) One-fourth
- (B) Three-fourth
- (C) One-half
- (D) Double

**Correct Answer:** (C) One-half

**Solution: Step 1:** The hydraulic efficiency  $\eta_h$  of an impulse turbine is given by:

$$\eta_h = \frac{2u(V - u)}{V^2}$$

where: -  $u$  is the blade velocity, -  $V$  is the jet velocity.

**Step 2:** The efficiency is maximum when  $u = \frac{V}{2}$ .

Thus, the correct answer is (C) One-half.

#### Quick Tip

For maximum efficiency in an impulse turbine, the blade speed should be half of the jet velocity.

**89. The dimensions of Chezy's coefficient  $C$  in [MLT] notation system are:**

- (A)  $L^{1/2}T^{1/2}$

- (B)  $L^{-1}T^{1/2}$   
 (C)  $L^{-1}T^{-1}$   
 (D)  $L^{1/2}T^{-1}$

**Correct Answer:** (D)  $L^{1/2}T^{-1}$

**Solution: Step 1:** The Chezy's equation for velocity  $V$  in an open channel is:

$$V = C\sqrt{RS}$$

where: -  $R$  is the hydraulic radius ( $L$ ), -  $S$  is the slope (dimensionless), -  $C$  is Chezy's coefficient.

**Step 2:** Solving for  $C$ :

$$C = V \div \sqrt{R}$$

Using  $V = LT^{-1}$  and  $R = L$ , we get:

$$C = \frac{LT^{-1}}{L^{1/2}} = L^{1/2}T^{-1}$$

Thus, the correct answer is (D)  $L^{1/2}T^{-1}$ .

#### Quick Tip

Chezy's coefficient has dimensions of  $L^{1/2}T^{-1}$ , which helps in open channel flow calculations.

**90. The most desirable alignment of an irrigation canal is along:**

- (A) The straight line  
 (B) The perpendicular line  
 (C) The valley line  
 (D) The ridge line

**Correct Answer:** (D) The ridge line

**Solution: Step 1:** The best alignment for an irrigation canal is along the ridge line to ensure:

- Minimal cross drainage, - Reduced soil erosion, - Efficient water distribution.

**Step 2:** The valley line is unsuitable because it may cause excessive erosion and flooding. Thus, the correct answer is (D) The ridge line.

**Quick Tip**

The ridge line alignment is preferred for canals as it minimizes cross drainage works.

---

**91. The order of B.O.D. reaction is:**

- (A) 0
- (B) 1
- (C) 2
- (D) 0.5

**Correct Answer:** (B) 1

**Solution: Step 1:** The biochemical oxygen demand (BOD) reaction follows a first-order kinetics:

$$\frac{dL}{dt} = -kL$$

where: -  $L$  is the remaining oxygen demand, -  $k$  is the rate constant.

**Step 2:** The first-order reaction implies that the rate depends only on the concentration of organic matter.

Thus, the correct answer is (B) 1.

**Quick Tip**

BOD degradation follows first-order kinetics because oxygen depletion depends on remaining organic matter.

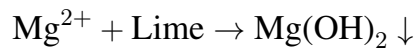
---

**92. Lime and soda are added to water to remove:**

- (A) Pathogens
- (B) Iron
- (C) Hardness
- (D) Nitrates

**Correct Answer:** (C) Hardness

**Solution: Step 1:** The lime-soda process is used for softening hard water by removing calcium and magnesium ions.



**Step 2:** This process does not remove pathogens, iron, or nitrates.

Thus, the correct answer is (C) Hardness.

#### Quick Tip

The lime-soda process effectively removes hardness by precipitating calcium and magnesium ions.

---

**93. The average BOD removal in the primary sedimentation of sewage is:**

- (A) 30%
- (B) 50%
- (C) 75%
- (D) 80%

**Correct Answer:** (B) 50%

**Solution: Step 1:** In the primary sedimentation process, suspended solids settle under gravity, leading to a reduction in organic load.

**Step 2:** The average BOD (Biochemical Oxygen Demand) removal in primary sedimentation is typically around 50

Thus, the correct answer is (B) 50

#### Quick Tip

Primary sedimentation removes about 50

---

**94. Bacterial-algae symbiosis is associated with:**

- (A) Oxidation pond
- (B) Oxidation ditch
- (C) Activated sludge process
- (D) Rotating biological contactor

**Correct Answer:** (A) Oxidation pond

**Solution: Step 1:** Oxidation ponds (also called stabilization ponds) rely on the mutualistic symbiosis between bacteria and algae.

**Step 2:** - Bacteria decompose organic matter and release  $CO_2$ . - Algae use this  $CO_2$  for photosynthesis and release  $O_2$ , which supports bacterial respiration.

**Step 3:** This natural treatment system is common in wastewater lagoons and is used for secondary treatment.

Thus, the correct answer is (A) Oxidation pond.

#### Quick Tip

Oxidation ponds use bacterial-algae symbiosis, where bacteria break down waste and algae provide oxygen.

---

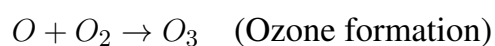

**95. Ozone is formed in the upper atmosphere by a photochemical reaction with:**

- (A) Ultra violet solar radiation
- (B) Infra red radiation
- (C) Visible light
- (D) All of the above

**Correct Answer:** (A) Ultra violet solar radiation

**Solution: Step 1:** Ozone formation in the upper atmosphere occurs through the Chapman cycle, where oxygen molecules absorb ultraviolet (UV) radiation.

**Step 2:** The reaction process:



**Step 3:** Infrared and visible light do not contribute significantly to ozone formation.

Thus, the correct answer is (A) Ultra violet solar radiation.

#### Quick Tip

The ozone layer absorbs harmful UV radiation and protects living organisms from its effects.

---

**96. In plane table surveying, the accessory used for sighting the target is:**

- (A) Alidade
- (B) Plumbing fork
- (C) Trough compass
- (D) Sextant

**Correct Answer:** (A) Alidade

**Solution: Step 1:** In plane table surveying, an alidade is used to sight objects and draw survey lines directly onto the map.

**Step 2:** Other accessories serve different functions: - Plumbing fork: Used to center the table. - Trough compass: Determines direction. - Sextant: Measures angles in navigation. Thus, the correct answer is (A) Alidade.

#### Quick Tip

The alidade is essential in plane table surveying for accurate sighting and mapping.

---

**97. The method employed for locating the position of a plane table station on a drawing sheet is:**

- (A) Radiation
- (B) Intersection
- (C) Orientation
- (D) Resection

**Correct Answer:** (D) Resection

**Solution: Step 1:** In plane table surveying, resection is used to determine the unknown position of the plane table by taking bearings from two or more known points.

**Step 2:** Comparison of methods: - Radiation: Used for plotting objects from a known station. - Intersection: Determines a point using two known stations. - Orientation: Aligns the table to an earlier plotted position.

Thus, the correct answer is (D) Resection.

#### Quick Tip

Resection is used when the plane table's position is unknown and needs to be determined.

---

**98. In levelling, correction for curvature of the earth is always:**

- (A) Positive
- (B) Zero
- (C) Negative
- (D) Infinity

**Correct Answer:** (C) Negative

**Solution: Step 1:** In levelling, the curvature of the Earth causes a systematic error, making objects appear lower than they actually are.

**Step 2:** The correction formula is:

$$C_c = -0.0785D^2$$

where  $D$  is the distance in kilometers. The negative sign indicates that the correction is downward.

Thus, the correct answer is (C) Negative.

#### Quick Tip

Curvature correction in levelling is always negative, as the Earth's surface curves away from the line of sight.

**99. If the ground is flat, the contour interval selected is:**

- (A) Small
- (B) Medium
- (C) Large
- (D) Extra large

**Correct Answer:** (A) Small

**Solution: Step 1:** The contour interval is the vertical distance between successive contour lines on a topographic map.

**Step 2:** In flat terrain, elevation changes are minimal, requiring small contour intervals to represent slight variations.

**Step 3:** Larger contour intervals are used for steep terrains to avoid excessive contour lines. Thus, the correct answer is (A) Small.

#### Quick Tip

For flat terrain, use a small contour interval to capture minor elevation changes accurately.

**100. The formula which calculates the volume of earthwork accurately is:**

- (A) Johnson's formula
- (B) Kirchoff's formula
- (C) Trapezoidal formula
- (D) Prismoidal formula

**Correct Answer:** (D) Prismoidal formula

**Solution: Step 1:** The Prismoidal formula is the most accurate method for computing earthwork volume, as it considers curved surface variations.

**Step 2:** The formula is:

$$V = \frac{L}{6} (A_1 + 4A_m + A_2)$$

where: -  $A_1$  and  $A_2$  are the areas of two cross-sections, -  $A_m$  is the mid-section area, -  $L$  is the length between cross-sections.

**Step 3:** The trapezoidal rule is simpler but less accurate, as it assumes a linear variation. Thus, the correct answer is (D) Prismoidal formula.

#### Quick Tip

The Prismoidal formula is more precise than the Trapezoidal rule, as it considers curvature in earthwork calculations.