



Notations :

- 1.Options shown in **green** color and with  icon are correct.
- 2.Options shown in **red** color and with  icon are incorrect.

Question Paper Name :	Engineering English 4th Aug 2021 Shift 1
Subject Name :	Engineering (English)
Creation Date :	2021-08-04 15:48:49
Duration :	180
Total Marks :	160
Display Marks:	No
Calculator :	None
Magnifying Glass Required? :	No
Ruler Required? :	No
Eraser Required? :	No
Scratch Pad Required? :	No
Rough Sketch/Notepad Required? :	No
Protractor Required? :	No
Show Watermark on Console? :	Yes
Highlighter :	No
Auto Save on Console? :	Yes

Engineering (English)

Group Number : 1
Group Id : 3426041
Group Maximum Duration : 0



Group Minimum Duration :	180
Show Attended Group? :	No
Edit Attended Group? :	No
Break time :	0
Group Marks :	160
Is this Group for Examiner? :	No

Mathematics

Section Id :	3426041
Section Number :	1
Section type :	Online
Mandatory or Optional :	Mandatory
Number of Questions :	80
Number of Questions to be attempted :	80
Section Marks :	80
Enable Mark as Answered Mark for Review and Clear Response :	Yes
Sub-Section Number :	1
Sub-Section Id :	3426041
Question Shuffling Allowed :	Yes



Question Number : 1 Question Id : 3426041 Question Type : MCQ Option Shuffling : Yes

Display Question Number : Yes Is Question Mandatory : No Option Orientation : Vertical

Correct Marks : 1 Wrong Marks : 0

If $f: \mathbb{R} \rightarrow \mathbb{R}$ is defined as $f(x+y) = f(x) + f(y)$, $\forall x, y \in \mathbb{R}$ and $f(1) = 10$, then,

$$\sum_{r=1}^n (f(r))^2 =$$

Options :

$$\frac{7}{2}n(n+1)$$

1. ✘

$$5n(n+1)$$

2. ✘

$$\frac{50}{3}n(n+1)(2n+1)$$

3. ✔

$$\frac{100}{4}n^2(n+1)^2$$

4. ✘

Question Number : 2 Question Id : 3426042 Question Type : MCQ Option Shuffling : Yes
Display Question Number : Yes Is Question Mandatory : No Option Orientation : Vertical
Correct Marks : 1 Wrong Marks : 0

If $f: \mathbb{R} \rightarrow \mathbb{R}$ is defined as $f(x) = \frac{3^x + 3^{-x}}{2}$, $\forall x \in \mathbb{R}$ and it satisfies
 $f(x+y) + f(x-y) = a f(x)f(y)$, then $a =$

Options :

✔

✘

2

1.

1

2.

 find my college

4

3. ✘

8

4. ✘

Question Number : 3 Question Id : 3426043 Question Type : MCQ Option Shuffling : Yes
Display Question Number : Yes Is Question Mandatory : No Option Orientation : Vertical
Correct Marks : 1 Wrong Marks : 0

For any $n \in \mathbb{N}$, $\frac{1}{2.5} + \frac{1}{5.8} + \dots + \frac{1}{(3n-1)(3n+2)} =$

Options :

$\frac{n}{6n+4}$

1. ✔

$\frac{n^2}{6n+4}$

2. ✘

✘

✘

$$\frac{1}{2} \cdot \frac{n^2}{6n+4}$$

3.

4.

 find my college

$$\frac{n}{6n^2 + 4}$$

Question Number : 4 Question Id : 3426044 Question Type : MCQ Option Shuffling : Yes
Display Question Number : Yes Is Question Mandatory : No Option Orientation : Vertical
Correct Marks : 1 Wrong Marks : 0

If the system of equations $3x - 2y + z = 0$, $\lambda x - 14y + 15z = 0$, $x + 2y - 3z = 0$ has a solution other than $x = y = z = 0$, then $\lambda =$

Options :

1

1. ✘

2

2. ✘

3

3. ✘

5

4. ✔

Question Number : 5 Question Id : 3426045 Question Type : MCQ Option Shuffling : Yes

Display Question Number : Yes Is Question Mandatory : No Option Orientation : Vertical

Correct Marks : 1 Wrong Marks : 0

find my college

$$\text{If } \Delta = \begin{vmatrix} 1 & a & a^2 \\ 1 & b & b^2 \\ 1 & c & c^2 \end{vmatrix} = K(a-b)(b-c)(c-a), \text{ then } K =$$

Options :

-1

1. ✘

1

2. ✔

2

3. ✘

3

4. ✘

Question Number : 6 Question Id : 3426046 Question Type : MCQ Option Shuffling : Yes

Display Question Number : Yes Is Question Mandatory : No Option Orientation : Vertical

Correct Marks : 1 Wrong Marks : 0



If $x = \alpha, y = \beta, z = \gamma$ is the unique solution of the system of equations $5x - 7y + 3z = 0,$
 $7x + 10y - 8z = 3$ and $2x + 3y - 4z + 4 = 0,$ then $\beta =$

Options :

1.

find my college

$\frac{1}{2}$

2. ✓

2

3. ✗

-2

4. ✗

$-\frac{1}{2}$

Question Number : 7 Question Id : 3426047 Question Type : MCQ Option Shuffling : Yes
Display Question Number : Yes Is Question Mandatory : No Option Orientation : Vertical
Correct Marks : 1 Wrong Marks : 0

If $(a + ib)^{\frac{1}{4}} = 2 + 3i$, then $3b - 2a =$

Options :

-22

1. ✗

✓

-122

2.

 find my college

−598

3. ✖

−698

4. ✖

Question Number : 8 Question Id : 3426048 Question Type : MCQ Option Shuffling : Yes Display Question Number : Yes Is Question Mandatory : No Option Orientation : Vertical Correct Marks : 1 Wrong Marks : 0

ω is a complex cube root of unity. Match the items of List-I to the items of List-II

List-I

List-II

A) $\omega^{1010} + \omega^{2020}$

I) 0

B) $(1 + \omega - \omega^2)(1 - \omega + \omega^2)$

II) 1

C) $(2 + \omega^2 + \omega^4)^5$

III) −1

D) $(3 + 5\omega + 3\omega^2)^3$

IV) 4

V) 8

The correct match is

Options :

✖

A

B

C

D

III

IV

I

V

1.

 find my college

A	B	C	D
I	IV	II	V

2. ✘

A	B	C	D
III	IV	II	V

3. ✔

A	B	C	D
III	I	II	IV

4. ✘

Question Number : 9 Question Id : 3426049 Question Type : MCQ Option Shuffling : Yes Display Question Number : Yes Is Question Mandatory : No Option Orientation : Vertical Correct Marks : 1 Wrong Marks : 0

If the roots of the equation $(z-4)^3 = 8i$ are $a-2i, b+i$, and $c+i$, then $\sqrt{abc} =$

Options :

$13\sqrt{3}$

1. ✘

✘

✔

$$4\sqrt{13}$$

2.

3.

 find my college

$$2\sqrt{13}$$

$$5\sqrt{3}$$

4. ✖

Question Number : 10 Question Id : 34260410 Question Type : MCQ Option Shuffling : Yes Display Question Number : Yes Is Question Mandatory : No Option Orientation : Vertical Correct Marks : 1 Wrong Marks : 0

If $\frac{\alpha}{\alpha+1}$ and $\frac{\beta}{\beta+1}$ are the roots of the quadratic equation $x^2 + 7x + 3 = 0$, then the equation having roots α and β is

Options :

$$3x^2 - x - 3 = 0$$

1. ✖

$$11x^2 + 13x + 3 = 0$$

2. ✔

$$13x^2 + 11x + 13 = 0$$

3. ✖

✖

$$11x^2 + 3x + 13 = 0$$

4.

 find my college

Question Number : 11 Question Id : 34260411 Question Type : MCQ Option Shuffling : Yes

Display Question Number : Yes Is Question Mandatory : No Option Orientation : Vertical

Correct Marks : 1 Wrong Marks : 0

If $y = \frac{x^2 + 14x + 9}{x^2 + 2x + 3} \forall x \in \mathbb{R}$, then the interval of maximum length in which y lies is

Options :

1. ✓ $[-5, 4]$

2. ✗ $[-4, 5]$

3. ✗ $\left[\frac{1}{3}, 3\right]$

4. ✗ $\left[\frac{-1}{3}, 3\right]$

Question Number : 12 Question Id : 34260412 Question Type : MCQ Option Shuffling : Yes

Display Question Number : Yes Is Question Mandatory : No Option Orientation : Vertical

Correct Marks : 1 Wrong Marks : 0

The equation whose roots are squares of the roots of $x^4 - 2x^3 + 6x - 21 = 0$ is

Options :

 find my college

1. ✓ $x^4 - 4x^3 - 18x^2 - 36x + 441 = 0$

2. ✗ $x^4 + 18x^3 - 4x^2 + 36x + 441 = 0$

3. ✗ $x^4 - 2x^3 + 4x^2 + 6x + 441 = 0$

4. ✗ $x^4 + 3x^3 - 5x^2 + 6x + 441 = 0$

Question Number : 13 Question Id : 34260413 Question Type : MCQ Option Shuffling : Yes Display Question Number : Yes Is Question Mandatory : No Option Orientation : Vertical Correct Marks : 1 Wrong Marks : 0

If α, β, γ are the roots of $x^3 - x + 1 = 0$, then $\frac{1+\alpha}{1-\alpha} + \frac{1+\beta}{1-\beta} + \frac{1+\gamma}{1-\gamma} =$

Options :

1. ✓ 1

2. ✗ 0

✗

2

3.

 find my college

-2

4. ✘

Question Number : 14 Question Id : 34260414 Question Type : MCQ Option Shuffling : Yes
 Display Question Number : Yes Is Question Mandatory : No Option Orientation : Vertical
 Correct Marks : 1 Wrong Marks : 0

$${}_{34}C_5 + \sum_{r=0}^4 (38-r) {}_{C_4} =$$

Options :

$$22 \times 39 {}_{C_4}$$

1. ✘

$$39 {}_{C_4}$$

2. ✘

$$3 \times 39 {}_{C_5}$$

3. ✘

$$39 {}_{C_5}$$

4.

Question Number : 15 Question Id : 34260415 Question Type : MCQ Option Shuffling : Yes
Display Question Number : Yes Is Question Mandatory : No Option Orientation : Vertical



If ${}^{22}P_{r+1} : {}^{20}P_{r+2} = 11:52$ then $r =$

Options :

3

1. ✘

5

2. ✘

7

3. ✔

9

4. ✘

Question Number : 16 Question Id : 34260416 Question Type : MCQ Option Shuffling : Yes

Display Question Number : Yes Is Question Mandatory : No Option Orientation : Vertical

Correct Marks : 1 Wrong Marks : 0



The value of the numerically greatest term in the expansion of $(2x + 3y)^{11}$ when $x = \frac{1}{2}$

and $y = \frac{1}{3}$ is

Options :

462

1.

find my college

$${}^{11}C_5 \left(\frac{2}{3}\right)^6$$

2. ✖

$${}^{11}C_6 \left(\frac{3}{2}\right)^5$$

3. ✖

576

4. ✖

Question Number : 17 Question Id : 34260417 Question Type : MCQ Option Shuffling : Yes Display Question Number : Yes Is Question Mandatory : No Option Orientation : Vertical Correct Marks : 1 Wrong Marks : 0

The coefficient of x^4 in the expansion of $(1-x-x^2+x^3)^6$ is

Options :

120

1. ✖

15

2. ✖

✖

-75

3.

 find my college

-60

4. ✓

Question Number : 18 Question Id : 34260418 Question Type : MCQ Option Shuffling : Yes Display Question Number : Yes Is Question Mandatory : No Option Orientation : Vertical Correct Marks : 1 Wrong Marks : 0

The sum of the coefficients in the expansion of $\left(1 + \frac{x}{2}\right)^{12}$ is

Options :

1. ✗ 0

2. ✗ 2^{11}

3. ✓ $\left(\frac{3}{2}\right)^{12}$

4. ✗ 2^{12}

Question Number : 19 Question Id : 34260419 Question Type : MCQ Option Shuffling : Yes

Display Question Number : Yes Is Question Mandatory : No Option Orientation : Vertical

Correct Marks : 1 Wrong Marks : 0

 find my college

For any quadratic polynomial $f(x)$, it is true that

$$f(x) = f(a) + f'(a)(x-a) + \frac{f''(a)}{2!}(x-a)^2, \text{ where } a \text{ is any real number.}$$

If $\frac{3x^2 + 4x + 7}{(x-2)^3} = \frac{A}{(x-2)^3} + \frac{B}{(x-2)^2} + \frac{C}{(x-2)}$ and $g(x) = 3x^2 + 4x + 7$ then

$$A + B + C =$$

Options :

$$g(2) + g'(2) + g''(2)$$

1. ✘

$$g''(2) + 2g(2) + \frac{g'(1)}{2!}$$

2. ✘

$$g(2) + g'(2) + \frac{g''(2)}{2!}$$

3. ✔

$$2g(2) + 2g'(2) + \frac{g''(2)}{2!}$$

4. ✘

Question Number : 20 Question Id : 34260420 Question Type : MCQ Option Shuffling : Yes

Display Question Number : Yes Is Question Mandatory : No Option Orientation : Vertical

Correct Marks : 1 Wrong Marks : 0

 find my college

$$\cot \frac{\pi}{16} \cdot \cot \frac{2\pi}{16} \cdot \cot \frac{3\pi}{16} \cdot \cot \frac{4\pi}{16} \cdot \cot \frac{5\pi}{16} \cdot \cot \frac{6\pi}{16} \cdot \cot \frac{7\pi}{16} =$$

Options :

0

1. ✘

1

2. ✔

$\frac{1}{2}$

3. ✘

2

4. ✘

Question Number : 21 Question Id : 34260421 Question Type : MCQ Option Shuffling : Yes

Display Question Number : Yes Is Question Mandatory : No Option Orientation : Vertical

Correct Marks : 1 Wrong Marks : 0

Let $\triangle ACB$ be a triangle with right-angle at C . Let $AB = 29$ units, $BC = 21$ units and

$\angle ABC = \theta$. Then $\cos^2 \theta - \sin^2 \theta =$

Options :

✘

✔

1

1.

2.

 find my college

$$\frac{41}{841}$$

3. ✘

$$\frac{40}{441}$$

4. ✘

$$\frac{41}{800}$$

Question Number : 22 Question Id : 34260422 Question Type : MCQ Option Shuffling : Yes
Display Question Number : Yes Is Question Mandatory : No Option Orientation : Vertical
Correct Marks : 1 Wrong Marks : 0

$$\frac{1 - \cos 2\theta + \sin 2\theta}{1 + \cos 2\theta + \sin 2\theta} =$$

Options :

1. ✘

$$\cot \theta$$

2. ✘

$$\cos 2\theta$$



$\tan \theta$

3.

 find my college

$\tan 2\theta$

4. ✘

Question Number : 23 Question Id : 34260423 Question Type : MCQ Option Shuffling : Yes Display Question Number : Yes Is Question Mandatory : No Option Orientation : Vertical Correct Marks : 1 Wrong Marks : 0

Let $y = 4\sin^2\theta - \cos 2\theta$. If l and m are the minimum and maximum values of y respectively, then

Options :

1. ✔ $lm = \frac{m}{l}$

2. ✘ $lm = \frac{l}{m}$

3. ✘ $l + m = \frac{l}{m}$

4. ✘ $\frac{lm}{l-m} = 1 + m$

Question Number : 24 Question Id : 34260424 Question Type : MCQ Option Shuffling : Yes
Display Question Number : Yes Is Question Mandatory : No Option Orientation : Vertical
Correct Marks : 1 Wrong Marks : 0



If $\cos \theta = -\frac{1}{\sqrt{2}}$ and $\tan \theta = 1$, then the general value of θ is

Options :

1. ✘ $2n\pi + \frac{\pi}{4}, n = 0, 1, 2, 3, \dots$

2. ✔ $(2n+1)\pi + \frac{\pi}{4}, n = 0, 1, 2, 3, \dots$

3. ✘ $n\pi + \frac{\pi}{4}, n = 0, 1, 2, 3, \dots$

4. ✘ $n\pi \pm \frac{\pi}{4}, n = 0, 1, 2, 3, \dots$

Question Number : 25 Question Id : 34260425 Question Type : MCQ Option Shuffling : Yes

Display Question Number : Yes Is Question Mandatory : No Option Orientation : Vertical

Correct Marks : 1 Wrong Marks : 0

If $\sin^{-1} x < \cos^{-1} x$, then

Options :

✔ $-1 \leq x < \frac{1}{\sqrt{2}}$

1.

 find my college

$$-\sqrt{3} \leq x < -1$$

2. ✘

$$\frac{1}{\sqrt{2}} < x \leq 1$$

3. ✘

$$1 < x < \sqrt{3}$$

4. ✘

Question Number : 26 Question Id : 34260426 Question Type : MCQ Option Shuffling : Yes Display Question Number : Yes Is Question Mandatory : No Option Orientation : Vertical Correct Marks : 1 Wrong Marks : 0

$$\text{Cot } h^{-1}(2) + \text{Cosec } h^{-1}(-2\sqrt{2}) =$$

Options :

$$\log \sqrt{\frac{3}{2}}$$

1. ✔

$$\log \sqrt{6}$$

2. ✘

✘

✘

$$\log \frac{3}{\sqrt{2}}$$

3.

4.

 find my college

$$\log \frac{3}{2}$$

Question Number : 27 Question Id : 34260427 Question Type : MCQ Option Shuffling : Yes
Display Question Number : Yes Is Question Mandatory : No Option Orientation : Vertical
Correct Marks : 1 Wrong Marks : 0

In $\triangle ABC$, $\angle B = \frac{\pi}{4}$, $\angle C = \frac{\pi}{3}$. If the area of the triangle is $54 + 18\sqrt{3}$ sq. units, then $a =$

Options :

1. ✘ $\sqrt{3} + 1$
2. ✘ $2(\sqrt{3} + 1)$
3. ✘ $4(\sqrt{3} + 1)$
4. ✔ $6(\sqrt{3} + 1)$

Question Number : 28 Question Id : 34260428 Question Type : MCQ Option Shuffling : Yes

Display Question Number : Yes Is Question Mandatory : No Option Orientation : Vertical

Correct Marks : 1 Wrong Marks : 0



If a, b, c are the sides of a ΔABC and exradii r_1, r_2, r_3 are respectively 12, 6, 4 then

$$a + 2b + 3c =$$

Options :

24

1. ✘

44

2. ✔

30

3. ✘

54

4. ✘

Question Number : 29 Question Id : 34260429 Question Type : MCQ Option Shuffling : Yes

Display Question Number : Yes Is Question Mandatory : No Option Orientation : Vertical

Correct Marks : 1 Wrong Marks : 0

In a triangle ABC, if $a : b : c = 4 : 5 : 6$, then $\frac{1}{4R} [r_1 + r_2 + r_3] =$

Options :

✔

✘

$$\frac{71}{64}$$

1.

2.

 find my college

$$\frac{4}{5}$$

$$\frac{81}{84}$$

3. ✘

$$\frac{7}{9}$$

4. ✘

Question Number : 30 Question Id : 34260430 Question Type : MCQ Option Shuffling : Yes Display Question Number : Yes Is Question Mandatory : No Option Orientation : Vertical Correct Marks : 1 Wrong Marks : 0

In a triangle ABC, with usual notation, if $a = 12$, $b = 16$, $c = 20$, then the ratio of the exradii of the triangle opposite to the angles in the order $\angle C, \angle B, \angle A$ is

Options :

$$3 : 4 : 5$$

1. ✘

$$6 : 3 : 2$$

2. ✔

✘

✘

12 : 7 : 5

3.

4.

 find my college

2 : 3 : 5

Question Number : 31 Question Id : 34260431 Question Type : MCQ Option Shuffling : Yes
Display Question Number : Yes Is Question Mandatory : No Option Orientation : Vertical
Correct Marks : 1 Wrong Marks : 0

If the vectors $-3\bar{i} + 4\bar{j} + \lambda\bar{k}$ and $\mu\bar{i} + 8\bar{j} + 6\bar{k}$ are collinear, then $\lambda - \mu =$

Options :

0

1. ✘

-3

2. ✘

6

3. ✘

9

4. ✔

Question Number : 32 Question Id : 34260432 Question Type : MCQ Option Shuffling : Yes
Display Question Number : Yes Is Question Mandatory : No Option Orientation : Vertical

Correct Marks : 1 Wrong Marks : 0

The angle between the vectors $2\bar{k} - 3\bar{j}$ and $\bar{i} - 2\bar{k}$ is

 find my college

Options :

$$\cos^{-1}\left(\frac{8}{\sqrt{65}}\right)$$

1. ✘

$$\cos^{-1}\left(\frac{-4}{\sqrt{65}}\right)$$

2. ✔

$$\cos^{-1}\left(\frac{2}{\sqrt{65}}\right)$$

3. ✘

$$\cos^{-1}\left(\frac{3}{\sqrt{13}}\right)$$

4. ✘

Question Number : 33 Question Id : 34260433 Question Type : MCQ Option Shuffling : Yes

Display Question Number : Yes Is Question Mandatory : No Option Orientation : Vertical

Correct Marks : 1 Wrong Marks : 0

Three vectors \vec{a} , \vec{b} and \vec{c} satisfy $\vec{a} + \vec{b} + \vec{c} = \vec{0}$. If $|\vec{a}| = 3$, $|\vec{b}| = 4$, $|\vec{c}| = 2$, then

$$\vec{a} \cdot \vec{b} + \vec{b} \cdot \vec{c} + \vec{c} \cdot \vec{a} + 2(|\vec{a}| + |\vec{b}| + |\vec{c}|) =$$

Options :

✘

$$\frac{-7}{2}$$

1.

 find my college

2. ✓ $\frac{7}{2}$

3. ✗ $\frac{-11}{2}$

4. ✗ $\frac{11}{2}$

Question Number : 34 Question Id : 34260434 Question Type : MCQ Option Shuffling : Yes
Display Question Number : Yes Is Question Mandatory : No Option Orientation : Vertical
Correct Marks : 1 Wrong Marks : 0

$$(\bar{a} + 2\bar{b} - \bar{c}) \cdot \{(\bar{a} - \bar{b}) \times (\bar{a} - \bar{b} - \bar{c})\} =$$

Options :

1. ✗ $2[abc]$

2. ✗ $[abc]$



3 [abc]

3.

4.

 find my college

$$[abc]^2$$

Question Number : 35 Question Id : 34260435 Question Type : MCQ Option Shuffling : Yes
 Display Question Number : Yes Is Question Mandatory : No Option Orientation : Vertical
 Correct Marks : 1 Wrong Marks : 0

If $\vec{a} = \vec{i} + \vec{j} + \vec{k}$, $\vec{c} = \vec{j} - \vec{k}$ are given vectors, then a vector \vec{b} satisfying the equations
 $\vec{a} \times \vec{b} = \vec{c}$ and $\vec{a} \cdot \vec{b} = 3$ is

Options :

$$5\vec{i} + 2\vec{j} + 2\vec{k}$$

1. ✘

$$\frac{5}{2}\vec{i} + \vec{j} + \vec{k}$$

2. ✘

$$\frac{5}{3}\vec{i} + \frac{2}{3}\vec{j} + \frac{2}{3}\vec{k}$$

3. ✔

$$\vec{i} + \frac{2}{5}\vec{j} + \frac{2}{5}\vec{k}$$

4. ✘

Question Number : 36 Question Id : 34260436 Question Type : MCQ Option Shuffling : Yes
Display Question Number : Yes Is Question Mandatory : No Option Orientation : Vertical
Correct Marks : 1 Wrong Marks : 0

 find my college

Let $\vec{a} = 2\vec{i} - 3\vec{j} + \vec{k}$, $\vec{b} = \vec{i} + 2\vec{j} - 3\vec{k}$, $\vec{c} = \vec{i} - \vec{j}$ and $\vec{d} = \vec{i} + \vec{j} + x\vec{k}$. If $(\vec{a} \times \vec{b}) \times \vec{c}$ is perpendicular to \vec{d} , then $x =$

Options :

1. ✖ $\frac{3}{2}$

2. ✖ 2

3. ✖ $\frac{2}{3}$

4. ✔ 1

Question Number : 37 Question Id : 34260437 Question Type : MCQ Option Shuffling : Yes Display Question Number : Yes Is Question Mandatory : No Option Orientation : Vertical Correct Marks : 1 Wrong Marks : 0

If 10 is the mean of the data 2, 3, 5, 18, 17, 15, 13, x , 9 and 7, then the mean deviation of this data about its mean is

✖

Options :

4.7

1.

 find my college

4.8

2. ✓

4.9

3. ✘

5.0

4. ✘

Question Number : 38 Question Id : 34260438 Question Type : MCQ Option Shuffling : Yes Display Question Number : Yes Is Question Mandatory : No Option Orientation : Vertical Correct Marks : 1 Wrong Marks : 0

A, B, C are aiming to shoot a balloon. A will succeed 4 times out of 6 attempts. The chance of B to shoot the balloon is 3 out of 5 and that of C is 2 out of 3. If the three aim to shoot the balloon simultaneously, then the probability that at least two of them hit the balloon is

Options :

 $\frac{5}{9}$

1. ✘

✘

✘

$$\frac{9}{25}$$

2.

$$\frac{4}{9}$$

3.

 find my college

$$\frac{32}{45}$$

4. ✓

Question Number : 39 Question Id : 34260439 Question Type : MCQ Option Shuffling : Yes

Display Question Number : Yes Is Question Mandatory : No Option Orientation : Vertical

Correct Marks : 1 Wrong Marks : 0

ω is a complex cube root of unity. When an unbiased die is thrown 3 times, if $\beta_1, \beta_2, \beta_3$ are the numbers appeared on the die, then the probability that β_1, β_2 and β_3 satisfy $\omega^{\beta_1} + \omega^{\beta_2} = -\omega^{\beta_3}$, is

Options :

$$\frac{212}{513}$$

1. ✗

$$\frac{1}{3}$$

2. ✗

$$\frac{3}{5}$$

3. ✗

✓

$$\frac{2}{9}$$

4.

 find my college

Question Number : 40 Question Id : 34260440 Question Type : MCQ Option Shuffling : Yes
Display Question Number : Yes Is Question Mandatory : No Option Orientation : Vertical
Correct Marks : 1 Wrong Marks : 0

If $P\left(\frac{A}{B}\right) = \frac{3}{10}$, $P\left(\frac{B}{A}\right) = \frac{4}{5}$ and $P(A \cup B) = K P(B)$, then $\frac{1}{K} =$

Options :

1. ✘ $\frac{40}{49}$

2. ✔ $\frac{40}{43}$

3. ✘ $\frac{100}{101}$

4. ✘ 1

Question Number : 41 Question Id : 34260441 Question Type : MCQ Option Shuffling : Yes
Display Question Number : Yes Is Question Mandatory : No Option Orientation : Vertical
Correct Marks : 1 Wrong Marks : 0

If the probability that an individual will suffer a bad reaction from an injection is 0.001, then the probability that out of 2000 individuals, exactly 3 individuals suffer a bad reaction is

Options :

1. ✓ $\frac{4}{3e^2}$

2. ✗ $\frac{2}{e^2}$

3. ✗ $\frac{2}{3e^2}$

4. ✗ $\frac{4}{5e^2}$

Question Number : 42 Question Id : 34260442 Question Type : MCQ Option Shuffling : Yes

Display Question Number : Yes Is Question Mandatory : No Option Orientation : Vertical

Correct Marks : 1 Wrong Marks : 0

A fair coin is tossed 15 times. The probability that the tail will appear atleast thrice is

Options :

1.

 find my college

$$1 - \frac{10^5}{2^{15}}$$

2. ✓

$$1 - \frac{121}{2^{15}}$$

3. ✘

$$1 - \frac{1}{2^{15}}$$

4. ✘

$$1 - \frac{16}{2^{15}}$$

Question Number : 43 Question Id : 34260443 Question Type : MCQ Option Shuffling : Yes Display Question Number : Yes Is Question Mandatory : No Option Orientation : Vertical Correct Marks : 1 Wrong Marks : 0

A rod of length 6 units slides with its ends on the coordinate axes. The locus of the midpoint of the rod is

Options :

$$x^2 + y^2 = 9$$

1. ✓

✘

$$x + y = 3$$

2.

 find my college

$$x^2 + y^2 = 36$$

3. ✖

$$x + y = 6$$

4. ✖

Question Number : 44 Question Id : 34260444 Question Type : MCQ Option Shuffling : Yes Display Question Number : Yes Is Question Mandatory : No Option Orientation : Vertical Correct Marks : 1 Wrong Marks : 0

The transformed equation of the curve $2x^2 + y^2 - 3x + 5y - 8 = 0$ when the origin is translated to the point $(-1, 2)$ is

Options :

$$2x^2 + y^2 - 7x + 9y + 11 = 0$$

1. ✔

$$2x^2 + y^2 + 7x + 9y + 11 = 0$$

2. ✖

$$2x^2 + y^2 - x + y + 11 = 0$$

3. ✖

✖

$$2x^2 + y^2 + 7x - 9y + 11 = 0$$

4.

 find my college

Question Number : 45 Question Id : 34260445 Question Type : MCQ Option Shuffling : Yes

Display Question Number : Yes Is Question Mandatory : No Option Orientation : Vertical

Correct Marks : 1 Wrong Marks : 0

The point on the line $4x - y - 2 = 0$ which is equidistant from the points $(-5, 6)$ and $(3, 2)$ is

Options :

1. ✘ $(2, 6)$

2. ✔ $(4, 14)$

3. ✘ $(1, 2)$

4. ✘ $(3, 10)$

Question Number : 46 Question Id : 34260446 Question Type : MCQ Option Shuffling : Yes

Display Question Number : Yes Is Question Mandatory : No Option Orientation : Vertical

Correct Marks : 1 Wrong Marks : 0

The incentre of the triangle having the vertices $(1, \sqrt{3})$, $(0, 0)$ and $(2, 0)$ is

Options :

1.



$$\left(1, \frac{\sqrt{3}}{2}\right)$$

2. ✘

$$\left(\frac{2}{3}, \frac{1}{\sqrt{3}}\right)$$

3. ✘

$$\left(\frac{2}{3}, \frac{\sqrt{3}}{2}\right)$$

4. ✔

$$\left(1, \frac{1}{\sqrt{3}}\right)$$

Question Number : 47 Question Id : 34260447 Question Type : MCQ Option Shuffling : Yes Display Question Number : Yes Is Question Mandatory : No Option Orientation : Vertical Correct Marks : 1 Wrong Marks : 0

If $P'(a, b)$ is the image of the point $P(-1, 2)$ with respect to the line $x - 2y + 3 = 0$, then the length of the perpendicular from P' on to the line $2x + y - 7 = 0$ is

Options :

✘

$$\frac{3}{\sqrt{5}}$$

1.

 find my college

5

2. ✘

$$\frac{7}{\sqrt{5}}$$

3. ✔

7

4. ✘

Question Number : 48 Question Id : 34260448 Question Type : MCQ Option Shuffling : Yes Display Question Number : Yes Is Question Mandatory : No Option Orientation : Vertical Correct Marks : 1 Wrong Marks : 0

If the vertices of a triangle ABC are A(1, 7), B(-5, -1) and C(7, 4), then the equation of a bisector of ABC is

Options :

$$7x - 9y + 26 = 0$$

1. ✔

$$9x - 7y + 38 = 0$$

2. ✘

✘

✔

$$7x + 9y + 44 = 0$$

3.

$$9x + 7y + 52 = 0$$

4.

 find my college

Note: For this question, ambiguity is found in question/answer. Candidate will get full marks for this question if any of the correct options are chosen.

Question Number : 49 Question Id : 34260449 Question Type : MCQ Option Shuffling : Yes Display Question Number : Yes Is Question Mandatory : No Option Orientation : Vertical Correct Marks : 1 Wrong Marks : 0

The combined equation of the two diameters of a circle which divide the circle into 4 sectors is $ax^2 + 2hxy + by^2 = 0$. If the area of the bigger sector is 5 times the area of the

smaller sector, then $\frac{|a+b|}{\sqrt{(a-b)^2 + 4h^2}} =$

Options :

1. ✘ $\frac{1}{2}$

2. ✔ $\frac{\sqrt{3}}{2}$

3. ✘ $\frac{1}{\sqrt{2}}$

1

4. ✖

Question Number : 50 Question Id : 34260450 Question Type : MCQ Option Shuffling : Yes

find my college

Display Question Number : Yes Is Question Mandatory : No Option Orientation : Vertical

Correct Marks : 1 Wrong Marks : 0

If $9x^2 - 24xy + 16y^2 + \alpha x + \beta y + 6$ represents a pair of parallel lines of 1 unit apart and

one of those lines passes through (1,1) then $\frac{\alpha}{\beta} =$

Options :

1. ✘ $\frac{2}{3}$

2. ✘ 1

3. ✘ $\frac{-3}{2}$

4. ✔ $\frac{-3}{4}$

Question Number : 51 Question Id : 34260451 Question Type : MCQ Option Shuffling : Yes

Display Question Number : Yes Is Question Mandatory : No Option Orientation : Vertical

Correct Marks : 1 Wrong Marks : 0

If (a, b) is the centre of the circle passing through the vertices of the triangle formed by $x + y = 6$, $2x + y = 4$ and $x + 2y = 5$, then (a, b) is

Options :

 find my college

$(-17, -16)$

1. ✘

$\left(\frac{17}{2}, \frac{19}{2}\right)$

2. ✔

$(17, 18)$

3. ✘

$\left(\frac{-17}{2}, \frac{-19}{2}\right)$

4. ✘

Question Number : 52 Question Id : 34260452 Question Type : MCQ Option Shuffling : Yes Display Question Number : Yes Is Question Mandatory : No Option Orientation : Vertical Correct Marks : 1 Wrong Marks : 0

The locus of the mid points of the chords of the circle $x^2 - 2x + y^2 = 0$ drawn from a point $(0, 0)$ on it is

Options :

$x^2 + y^2 - x = 0$

1. ✔

✘

✘

$$2x^2 + y - 2 = 0$$

2.

3.

 find my college

$$y^2 + x - 1 = 0$$

$$y + x^2 + 2x - 3 = 0$$

4. ✘

Question Number : 53 Question Id : 34260453 Question Type : MCQ Option Shuffling : Yes Display Question Number : Yes Is Question Mandatory : No Option Orientation : Vertical Correct Marks : 1 Wrong Marks : 0

The number of possible common tangents that can be drawn to the circles $x^2 + y^2 + 4x - 6y - 3 = 0$ and $x^2 + y^2 + 4x - 2y + 1 = 0$ is

Options :

4

1. ✘

3

2. ✘

1

3. ✔

0

4.

Question Number : 54 Question Id : 34260454 Question Type : MCQ Option Shuffling : Yes
Display Question Number : Yes Is Question Mandatory : No Option Orientation : Vertical

 find my college

The equation of the circle passing through (1, 1) and through the points of intersection of the circles $x^2 + y^2 + 13x - 3y = 0$ and $2x^2 + 2y^2 + 4x - 7y - 25 = 0$ is

Options :

$$4x^2 + 4y^2 + 30x - 13y - 25 = 0$$

1. ✓

$$2x^2 + 2y^2 + 15x - 19y = 0$$

2. ✗

$$4x^2 + 4y^2 + 25x + 12y - 45 = 0$$

3. ✗

$$4x^2 + 4y^2 + 13x - 30y + 9 = 0$$

4. ✗

Question Number : 55 Question Id : 34260455 Question Type : MCQ Option Shuffling : Yes

Display Question Number : Yes Is Question Mandatory : No Option Orientation : Vertical

Correct Marks : 1 Wrong Marks : 0

If the circles $(x-2)^2 + (y-3)^2 = 25$ and $25x^2 + 25y^2 - 40x - 70y - 160 = 0$ touch internally at (α, β) then $\alpha + \beta =$

✗

Options :

0

1.



2. ✓
-2

3. ✘
-1

4. ✘
1

Question Number : 56 Question Id : 34260456 Question Type : MCQ Option Shuffling : Yes Display Question Number : Yes Is Question Mandatory : No Option Orientation : Vertical Correct Marks : 1 Wrong Marks : 0

A point on the parabola whose focus and vertex are respectively at $\left(\frac{5}{4}, -2\right)$ and $(1, -2)$ is

Options :

1. ✘
(4, 0)

2. ✘
(15, 2)

✘

✓

$(3, -1)$

3.

4.

 find my college

(10, 1)

Question Number : 57 Question Id : 34260457 Question Type : MCQ Option Shuffling : Yes
Display Question Number : Yes Is Question Mandatory : No Option Orientation : Vertical
Correct Marks : 1 Wrong Marks : 0

The parametric equations of the parabola $y^2 - 4x - 8y - 12 = 0$ are

Options :

1. ✘ $x = 7 + 2t, \quad y = -4 + t^2$

2. ✘ $x = -7 + 2t, \quad y = 4 + 2t$

3. ✘ $x = -7 + t^2, \quad y = -4 + 2t$

4. ✔ $x = -7 + t^2, \quad y = 4 + 2t$

Question Number : 58 Question Id : 34260458 Question Type : MCQ Option Shuffling : Yes

Display Question Number : Yes Is Question Mandatory : No Option Orientation : Vertical

Correct Marks : 1 Wrong Marks : 0

 find my college

A focus of an ellipse having eccentricity $\frac{1}{2}$ is at $(0, 0)$ and a directrix is the line $x = 4$.

Then the equation of one such ellipse is

Options :

$$\frac{9x^2}{64} + \frac{3y^2}{16} = 1$$

1. ✘

$$\frac{(2x+1)^2}{32} + \frac{y^2}{16} = 1$$

2. ✘

$$\frac{(3x+4)^2}{64} + \frac{y^2}{32} = 1$$

3. ✘

$$(3x+4)^2 + 12y^2 = 64$$

4. ✔

Question Number : 59 Question Id : 34260459 Question Type : MCQ Option Shuffling : Yes

Display Question Number : Yes Is Question Mandatory : No Option Orientation : Vertical

Correct Marks : 1 Wrong Marks : 0

The area (in square units) of the quadrilateral formed by joining the foci of the two

ellipses $\frac{x^2}{9} + \frac{y^2}{5} = 1$ and $\frac{x^2}{5} + \frac{y^2}{9} = 1$ is

Options :



4

1. ✘

2

2. ✘

6

3. ✘

8

4. ✔

Question Number : 60 Question Id : 34260460 Question Type : MCQ Option Shuffling : Yes Display Question Number : Yes Is Question Mandatory : No Option Orientation : Vertical Correct Marks : 1 Wrong Marks : 0

The lines $x \cos \alpha + y \sin \alpha = P, \alpha \in \mathbb{R}$ are chords of the hyperbola $\frac{x^2}{9} - \frac{y^2}{36} = 1$ and they subtend a right angle at the centre of the hyperbola. The locus of the poles of these lines with respect to the given hyperbola is

Options :

$$x^2 - 16y^2 = 108$$

1. ✘

✘

$$16x^2 - y^2 = 108$$

2.

 find my college

$$16x^2 + y^2 = 108$$

3. ✓

$$x^2 + 16y^2 = 108$$

4. ✗

Question Number : 61 Question Id : 34260461 Question Type : MCQ Option Shuffling : Yes
Display Question Number : Yes Is Question Mandatory : No Option Orientation : Vertical
Correct Marks : 1 Wrong Marks : 0

If $\left(\frac{9}{4}, \frac{5}{4}, \frac{15}{4}\right)$ is the centroid of a tetrahedron whose vertices are $(a, 2, 1)$, $(1, b, 4)$,
 $(4, 0, c)$ and $(1, 1, 7)$, then

Options :

$$a = b = c$$

1. ✗

$$a = b = c + 1$$

2. ✗

$$b = c = a + 1$$

3. ✗

✓

$$a = c = b + 1$$

4.

 find my college

Question Number : 62 Question Id : 34260462 Question Type : MCQ Option Shuffling : Yes
Display Question Number : Yes Is Question Mandatory : No Option Orientation : Vertical
Correct Marks : 1 Wrong Marks : 0

The direction cosines of the line making angles $\frac{\pi}{4}, \frac{\pi}{3}$ and θ ($0 < \theta < \frac{\pi}{2}$) respectively
with x, y and z axes, are

Options :

1. ✓ $\frac{1}{\sqrt{2}}, \frac{1}{2}, \frac{1}{2}$

2. ✗ $\frac{1}{\sqrt{2}}, \frac{1}{2}, \frac{\sqrt{3}}{2}$

3. ✗ $\frac{1}{\sqrt{2}}, \frac{1}{2}, \frac{1}{\sqrt{2}}$

4. ✗ $\frac{1}{\sqrt{2}}, \frac{\sqrt{3}}{2}, \frac{1}{\sqrt{2}}$

**Question Number : 63 Question Id : 34260463 Question Type : MCQ Option Shuffling : Yes
Display Question Number : Yes Is Question Mandatory : No Option Orientation : Vertical
Correct Marks : 1 Wrong Marks : 0**

 find my college

The point on the plane $2x - 2y + 4z + 5 = 0$ that is nearer to $\left(1, \frac{3}{2}, 2\right)$ is

Options :

$$\left(0, \frac{5}{2}, 0\right)$$

1. ✓

$$\left(-5, \frac{-5}{2}, 0\right)$$

2. ✗

$$\left(0, 0, \frac{-5}{4}\right)$$

3. ✗

$$\left(-\frac{1}{2}, 0, -1\right)$$

4. ✗

Question Number : 64 Question Id : 34260464 Question Type : MCQ Option Shuffling : Yes

Display Question Number : Yes Is Question Mandatory : No Option Orientation : Vertical

Correct Marks : 1 Wrong Marks : 0

$$\lim_{x \rightarrow 1} \frac{\log x}{(1-x)} =$$

Options :

1.

 find my college

1

2. ✓ -1

3. ✗ 0

4. ✗ $\frac{-1}{2}$

Question Number : 65 Question Id : 34260465 Question Type : MCQ Option Shuffling : Yes Display Question Number : Yes Is Question Mandatory : No Option Orientation : Vertical Correct Marks : 1 Wrong Marks : 0

Let $f(x) = \frac{2 - \sqrt{x+4}}{\sin 2x}$, $x \neq 0$. In order that $f(x)$ is continuous at $x = 0$, $f(0)$ is to be defined as

Options :

1. ✓ $\frac{-1}{8}$

✗

$\frac{1}{2}$

2.

 find my college

1

3. ✘

$\frac{1}{8}$

4. ✘

Question Number : 66 Question Id : 34260466 Question Type : MCQ Option Shuffling : Yes

Display Question Number : Yes Is Question Mandatory : No Option Orientation : Vertical

Correct Marks : 1 Wrong Marks : 0

If $f(x) = \begin{cases} 1 + \cos x, & x \leq 0 \\ a - x, & 0 < x \leq 2 \\ x^2 - b^2, & x > 2 \end{cases}$ is continuous everywhere, then $a^2 + b^2 =$

Options :

4

1. ✘

8

2. ✔

✘

✘

6

3.

4.

 find my college

Question Number : 67 Question Id : 34260467 Question Type : MCQ Option Shuffling : Yes
Display Question Number : Yes Is Question Mandatory : No Option Orientation : Vertical
Correct Marks : 1 Wrong Marks : 0

If $x = 5(1 - \sin t)$, $y = 5(t + \cos t)$, then $\frac{dx}{dy} =$

Options :

1. ✘ $\frac{\sin t - 1}{\cos t}$

2. ✔ $\frac{\cos t}{\sin t - 1}$

3. ✘ $\tan \frac{t}{2}$

✘

$$\frac{\cos \frac{t}{2} - \sin \frac{t}{2}}{\cos \frac{t}{2} + \sin \frac{t}{2}}$$

4.

 find my college

Question Number : 68 Question Id : 34260468 Question Type : MCQ Option Shuffling : Yes

Display Question Number : Yes Is Question Mandatory : No Option Orientation : Vertical

Correct Marks : 1 Wrong Marks : 0

Let $g: [-2, 2] \rightarrow \mathbb{R}$ and $f: [-2, 2] \rightarrow \mathbb{R}$ are two functions defined as

$$g(x) = \begin{cases} -1, & \text{if } -2 \leq x < 0 \\ x^2 - 1, & \text{if } 0 \leq x \leq 2 \end{cases} \quad \text{and} \quad f(x) = |g(x)| + g(|x|) + 2. \quad \text{In the interval}$$

$(-2, 2)$, f is not differentiable at $x =$

Options :

0

1. ✘

1

2. ✔

$\frac{1}{2}$

3. ✘

-1

4. ✘

Question Number : 69 Question Id : 34260469 Question Type : MCQ Option Shuffling : Yes

Display Question Number : Yes Is Question Mandatory : No Option Orientation : Vertical

Correct Marks : 1 Wrong Marks : 0

 find my college

Consider the following statements.

- a) If a function is differentiable at a point 'p' then it is not continuous at 'p'
- b) If a function is not continuous at $x = a$, then it is not differentiable at $x = a$
- c) If $f(x) = |x|$ then $f(x)$ is not differentiable but continuous on \mathbb{R}
- d) If $f(x) = x - [x]$, then $f'(1) = 1$

Which of the above statements are (is) correct?

Options :

Only (b)

1. ✘

(b) and (c)

2. ✔

Only (c)

3. ✘

(c) and (d)

4. ✘

Question Number : 70 Question Id : 34260470 Question Type : MCQ Option Shuffling : Yes

Display Question Number : Yes Is Question Mandatory : No Option Orientation : Vertical

Correct Marks : 1 Wrong Marks : 0

If $x^2 + xy + y^2 = k$, then $\frac{d^2y}{dx^2} =$

Options :

1.

 find my college

$$\frac{-6k}{(x+2y)^3}$$

2. ✖

$$\frac{-6k}{(x+2y)^2}$$

3. ✖

$$\frac{x^2 + xy + y^2}{(2x+y)^2}$$

4. ✖

0

Question Number : 71 Question Id : 34260471 Question Type : MCQ Option Shuffling : Yes Display Question Number : Yes Is Question Mandatory : No Option Orientation : Vertical Correct Marks : 1 Wrong Marks : 0

The approximate value of $(8.01)^{\frac{4}{3}} + (8.01)^2$ upto 3 decimal places is

Options :

80.116

1. ✖

✖

80.216

2.

 find my college

80

3. ✘

80.186

4. ✔

Question Number : 72 Question Id : 34260472 Question Type : MCQ Option Shuffling : Yes

Display Question Number : Yes Is Question Mandatory : No Option Orientation : Vertical

Correct Marks : 1 Wrong Marks : 0

If the tangent at a point P on the curve $y = 4x^4 + x$ is perpendicular to the tangent to the same curve at $(0, 0)$, then the point P is

Options :

$$\left(\frac{-1}{2}, \frac{-1}{4}\right)$$

1. ✔

$$\left(\frac{1}{2}, \frac{3}{4}\right)$$

2. ✘

$$(1, 5)$$

3. ✘

4.

Question Number : 73 Question Id : 34260473 Question Type : MCQ Option Shuffling : Yes
Display Question Number : Yes Is Question Mandatory : No Option Orientation : Vertical



Correct Marks : 1 Wrong Marks : 0

The angle between the curves $2x^2 + y^2 = 20$ and $4y^2 - x^2 = 8$ at a point where they intersect in the 4th quadrant is

Options :

0

1. ✘

$\frac{\pi}{2}$

2. ✔

$\frac{\pi}{4}$

3. ✘

$\frac{\pi}{6}$

4. ✘

Question Number : 74 Question Id : 34260474 Question Type : MCQ Option Shuffling : Yes

Display Question Number : Yes Is Question Mandatory : No Option Orientation : Vertical

Correct Marks : 1 Wrong Marks : 0

If the function $f(x) = x(x+3)e^{\frac{-x}{2}}$ satisfies all the conditions of Rolle's theorem in $[-3, 0]$, then a root of $f'(x) = 0$ is

✘

Options :

3

1.



-1

2. ✘

-2

3. ✔

-3

4. ✘

Question Number : 75 Question Id : 34260475 Question Type : MCQ Option Shuffling : Yes
 Display Question Number : Yes Is Question Mandatory : No Option Orientation : Vertical
 Correct Marks : 1 Wrong Marks : 0

$$\int \frac{dx}{\sin x + \cos x} =$$

Options :

$$\frac{1}{\sqrt{2}} \log \left| \tan \left(\frac{x}{2} + \frac{\pi}{8} \right) \right| + C$$

1. ✔

$$\frac{1}{\sqrt{2}} \log \left| \tan \left(\frac{x}{2} + \frac{\pi}{4} \right) \right| + C$$

2. ✘

✘

 find my college

$$\frac{1}{\sqrt{2}} \log \left| \tan \left(\frac{x}{4} + \frac{\pi}{2} \right) \right| + C$$

$$\frac{1}{\sqrt{2}} \log \left| \tan \left(\frac{x}{8} + \frac{\pi}{2} \right) \right| + C$$

4. ✖

Question Number : 76 Question Id : 34260476 Question Type : MCQ Option Shuffling : Yes
 Display Question Number : Yes Is Question Mandatory : No Option Orientation : Vertical
 Correct Marks : 1 Wrong Marks : 0

$$\int (x+2)\sqrt{x+3} dx =$$

Options :

$$\frac{2}{15} \sqrt{x+3} (3x^2 - 13x + 12) + C$$

1. ✖

$$\frac{2}{15} \sqrt{x+3} (3x^2 + 13x + 12) + C$$

2. ✔

$$\frac{2}{5} \sqrt{x+3} (3x^2 - 12x + 13) + C$$

✖

✖

3.

4.

 find my college

$$\frac{2}{5}\sqrt{x+3}(3x^2+12x+13)+C$$

Question Number : 77 Question Id : 34260477 Question Type : MCQ Option Shuffling : Yes
 Display Question Number : Yes Is Question Mandatory : No Option Orientation : Vertical
 Correct Marks : 1 Wrong Marks : 0

$$\int \frac{(1-\cos x)^{2/7}}{(1+\cos x)^{9/7}} dx =$$

Options :

$$\frac{7}{11} \left(\tan \frac{x}{2} \right)^{\frac{11}{7}} + C$$

1. ✓

$$\frac{7}{11} \left(\tan \frac{x}{2} \right)^{\frac{7}{11}} + C$$

2. ✗

$$\frac{7}{11} \left(\cot \frac{x}{2} \right)^{\frac{11}{7}} + C$$

3. ✗

$$\frac{11}{7} \left(\cot \frac{x}{2} \right)^{\frac{7}{11}} + C$$

✗

4.

 find my college

Question Number : 78 Question Id : 34260478 Question Type : MCQ Option Shuffling : Yes

Display Question Number : Yes Is Question Mandatory : No Option Orientation : Vertical

Correct Marks : 1 Wrong Marks : 0

$$\int_5^9 \frac{\log 3x^2}{\log 3x^2 + \log(588 - 84x + 3x^2)} dx =$$

Options :

1. ✓ 2

2. ✗ 1

3. ✗ $\frac{1}{2}$

4. ✗ 4

Question Number : 79 Question Id : 34260479 Question Type : MCQ Option Shuffling : Yes

Display Question Number : Yes Is Question Mandatory : No Option Orientation : Vertical

Correct Marks : 1 Wrong Marks : 0

$$\int_{-1}^1 \frac{\log(1+x)}{1+x^2} dx = \int_0^1 \frac{\log(1+x)}{1+x^2} dx + \int_0^1 f(x) dx \text{ then } f(x) =$$

Options :

1.

find my college

$$\frac{\log(1+x)}{1+x^2}$$

2. ✘

$$-\frac{\log(1+x)}{1+x^2}$$

3. ✔

$$\frac{\log(1-x)}{1+x^2}$$

4. ✘

0

Question Number : 80 Question Id : 34260480 Question Type : MCQ Option Shuffling : Yes Display Question Number : Yes Is Question Mandatory : No Option Orientation : Vertical Correct Marks : 1 Wrong Marks : 0

The general solution of $\frac{dy}{dx} = x + \sin x \cos y + x \cos y + \sin x$ is

Options :

1. ✘

$$\tan \frac{x}{2} = \frac{y^2}{2} - \cos y + C$$

✔

$$\tan \frac{y}{2} = \frac{x^2}{2} - \cos x + C$$

2.

 find my college

3.

4.

Physics

Section Id :	3426042
Section Number :	2
Section type :	Online
Mandatory or Optional :	Mandatory
Number of Questions :	40
Number of Questions to be attempted :	40
Section Marks :	40
Enable Mark as Answered Mark for Review and Clear Response :	Yes
Sub-Section Number :	1
Sub-Section Id :	3426042
Question Shuffling Allowed :	Yes

Question Number : 81 Question Id : 34260481 Question Type : MCQ Option Shuffling : Yes

Display Question Number : Yes Is Question Mandatory : No Option Orientation : Vertical

Correct Marks : 1 Wrong Marks : 0

Which of the following statement is incorrect?

$$\tan \frac{x}{2} = \frac{1 - \cos x}{1 + \cos x}$$

Options :

Conservation laws have deep connection with symmetries of nature

1. ✘
2. ✔ Weak nuclear force is weakest among all fundamental forces of nature
3. ✘ A conservation law is a hypothesis based on observations and experiments
4. ✘ In a nuclear process mass gets converted to energy or vice versa

Question Number : 82 Question Id : 34260482 Question Type : MCQ Option Shuffling : Yes

Display Question Number : Yes Is Question Mandatory : No Option Orientation : Vertical

Correct Marks : 1 Wrong Marks : 0

The dimensions of σb^4 where ' σ ' is Stefan's constant and 'b' is Wien's constant are

Options :

1. ✘ $[M^0L^0T^0]$
2. ✔ $[ML^4T^{-3}]$
3. ✘ $[ML^{-2}T]$
- ✘ $[ML^6T^{-3}]$

4.

 find my college

Question Number : 83 Question Id : 34260483 Question Type : MCQ Option Shuffling : Yes

Display Question Number : Yes Is Question Mandatory : No Option Orientation : Vertical

Correct Marks : 1 Wrong Marks : 0

A car travels in a straight line along a road. Its distance 'x' from a stop sign is given as a function of 't' by the equation $x(t) = \alpha t + \beta t^3$, where $\alpha = 2.0 \text{ m/s}$, $\beta = 0.01 \text{ m/s}^3$. Calculate the average velocity of the car in the time interval $t = 2.00 \text{ sec}$ to 4.00 sec .

Options :

1. ✓ 2.28 m/s

2. ✗ 4.94 m/s

3. ✗ 3.34 m/s

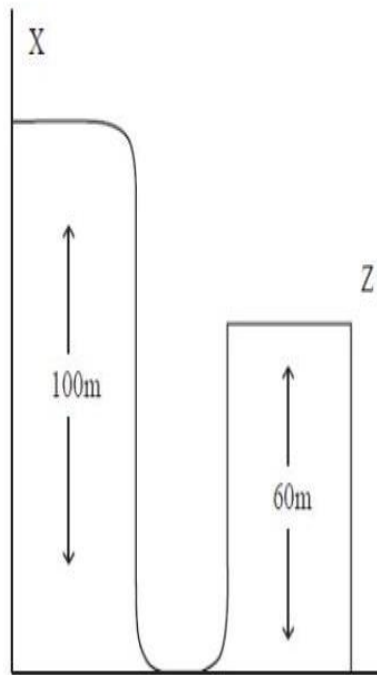
4. ✗ 4.12 m/s

Question Number : 84 Question Id : 34260484 Question Type : MCQ Option Shuffling : Yes

Display Question Number : Yes Is Question Mandatory : No Option Orientation : Vertical

Correct Marks : 1 Wrong Marks : 0

A car driver is trying to jump across a path as shown in figure by driving horizontally off a cliff 'X' at the speed 10 m/s. When he touches peak Z (ignore air resistance), what would be speed?
 (use $g = 10 \text{ m/s}^2$)



Options :

1. ✓ 30 m/s
2. ✗ 40 m/s
3. ✗ 15 m/s
4. 50 m/s

Question Number : 85 Question Id : 34260485 Question Type : MCQ Option Shuffling : Yes
Display Question Number : Yes Is Question Mandatory : No Option Orientation : Vertical

 find my college

Correct Marks : 1 Wrong Marks : 0

Find the angle between the two vectors: $\vec{a} = 3i + 2j + 5k$, $\vec{b} = 5i + 3j + k$

Options :

1. ✓ $\cos^{-1}\left(\frac{26}{\sqrt{1330}}\right)$

2. ✗ $\sin^{-1}\left(\frac{26}{\sqrt{1330}}\right)$

3. ✗ $\cos^{-1}\left(\frac{26}{\sqrt{1335}}\right)$

4. ✗ $\tan^{-1}\left(\frac{26}{\sqrt{1330}}\right)$

Question Number : 86 Question Id : 34260486 Question Type : MCQ Option Shuffling : Yes

Display Question Number : Yes Is Question Mandatory : No Option Orientation : Vertical

Correct Marks : 1 Wrong Marks : 0

A particle moves over a xy plane with a constant acceleration

$\vec{a} = (4.0 \text{ m/s}^2)\hat{i} + (4.0 \text{ m/s}^2)\hat{j}$. At time $t = 0$, the velocity is $(4.0 \text{ m/s})\hat{i}$. The speed of the particle when it is displaced by 6.0 m parallel to the x-axis is

Options :



1. ✓ $4\sqrt{5}$ m/s

2. ✗ $\sqrt{60}$ m/s

3. ✗ $3\sqrt{10}$ m/s

4. ✗ $\sqrt{20}$ m/s

Question Number : 87 Question Id : 34260487 Question Type : MCQ Option Shuffling : Yes Display Question Number : Yes Is Question Mandatory : No Option Orientation : Vertical Correct Marks : 1 Wrong Marks : 0

Block A of mass 3 kg rests on another block B of mass 7 kg. The coefficient of friction between A and B is 0.4 while the coefficient of friction between B and the horizontal floor on which B rests is 0.55. Find the force of friction between A and B, when a horizontal force of 50 N is applied on the block B.
(Use $g=10$ m/s²)

Options :

1. ✓ 0

✗ 5 N

✗

2.

4 N

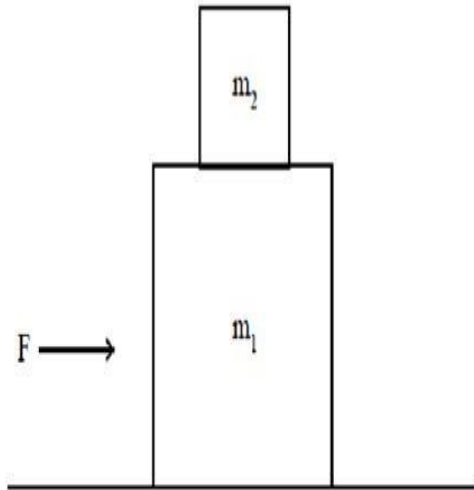
3.

 find my college

1.2 N

4. ✖

Question Number : 88 Question Id : 34260488 Question Type : MCQ Option Shuffling : Yes Display Question Number : Yes Is Question Mandatory : No Option Orientation : Vertical Correct Marks : 1 Wrong Marks : 0



What is the maximum force F that can be applied on block m_1 , so that both m_1 & m_2 will move together? There is no friction between m_1 and the horizontal table. The coefficient of friction between ' m_1 ' and ' m_2 ' is μ .

Options :

1. ✖ $\mu m_2 g$

2. ✔ $\mu(m_1 + m_2)g$

✖ $\mu \frac{m_1 m_2}{(m_1 + m_2)} g$

✖

✖

3.

$\mu m_1 g$

4.

 find my college

Question Number : 89 Question Id : 34260489 Question Type : MCQ Option Shuffling : Yes
Display Question Number : Yes Is Question Mandatory : No Option Orientation : Vertical
Correct Marks : 1 Wrong Marks : 0

The potential energy of a particle in a central field has the form $U(r) = \frac{1}{r^2} - \frac{1}{r}$, where 'r'
is the distance from the centre of the field. The magnitude of the maximum attractive
force in Newton is

Options :

1. ✓ $\frac{1}{27}$

2. ✗ $\frac{1}{9}$

3. ✗ $\frac{1}{3}$

4. ✗ 1

**Question Number : 90 Question Id : 34260490 Question Type : MCQ Option Shuffling : Yes
Display Question Number : Yes Is Question Mandatory : No Option Orientation : Vertical
Correct Marks : 1 Wrong Marks : 0**



Consider a rocket is being fired. The kinetic energy of the rocket is increased by 16 times where as its total mass is reduced by half through the burning of fuel. The factor by which its momentum increases is

Options :

1. ✘ 8

2. ✔ $2\sqrt{2}$

3. ✘ 4

4. ✘ $4\sqrt{2}$

Question Number : 91 Question Id : 34260491 Question Type : MCQ Option Shuffling : Yes

Display Question Number : Yes Is Question Mandatory : No Option Orientation : Vertical

Correct Marks : 1 Wrong Marks : 0

A rigid body of mass M and radius R rolls without slipping on an inclined plane of inclination θ , under gravity. Match the type of body Column I with magnitude of the force of friction Column II.

Column I	Column II
A) For ring	I) $\frac{Mg \sin \theta}{2.5}$
B) For solid sphere	II) $\frac{Mg \sin \theta}{3}$
C) For solid cylinder	III) $\frac{Mg \sin \theta}{3.5}$
D) For hallow cylinder	IV) $\frac{Mg \sin \theta}{2}$

Options :

1. ✓

A	B	C	D
IV	III	II	IV

2. ✘

A	B	C	D
I	II	IV	IV

A

B

C

D

II

I

IV

III

3. ✖

 find my college

A	B	C	D
II	IV	I	III

4. ✘

Question Number : 92 Question Id : 34260492 Question Type : MCQ Option Shuffling : Yes

Display Question Number : Yes Is Question Mandatory : No Option Orientation : Vertical

Correct Marks : 1 Wrong Marks : 0

A small disc of mass 500 gm and radius 5 cm rolls down an inclined plane without slipping. Speed of its center of mass when it reaches the bottom of the incline plane depends on

Options :

mass & radius

1. ✘

mass & height of the incline

2. ✘

height of the incline

3. ✘

height of the incline and acceleration due to gravity

4. ✔

Question Number : 93 Question Id : 34260493 Question Type : MCQ Option Shuffling : Yes

Display Question Number : Yes Is Question Mandatory : No Option Orientation : Vertical

Correct Marks : 1 Wrong Marks : 0

 find my college

A body of mass 1 kg is executing simple harmonic motion (SHM). Its displacement

y (in cm) at time t given by $y = \left[6 \sin \left(100t + \frac{\pi}{4} \right) \right]$ cm. Its maximum kinetic energy is

Options :

1. ✘ 1.8 J

2. ✔ 18 J

3. ✘ 180 J

4. ✘ 0.18 J

Question Number : 94 Question Id : 34260494 Question Type : MCQ Option Shuffling : Yes

Display Question Number : Yes Is Question Mandatory : No Option Orientation : Vertical

Correct Marks : 1 Wrong Marks : 0

What is the change in mass of a body, when taken 64 km below the surface of the earth?

[Take radius of the earth as 6400 km]

Options :

1. ✘ Increases by 2%



Remain constant

2.

3.



Increases by 1%

Decrease by 1%

4. ✘

Question Number : 95 Question Id : 34260495 Question Type : MCQ Option Shuffling : Yes Display Question Number : Yes Is Question Mandatory : No Option Orientation : Vertical Correct Marks : 1 Wrong Marks : 0

Consider a rod of length 1.0 m with a cross-sectional area of 0.50 cm^2 . The rod supports a 500-kg platform that hangs attached to the rod's lower end. What is elongation of the rod under the stress ignoring the weight of the rod? Consider the Young's modulus to be 10^{11} Pa and $g = 10 \text{ m/s}^2$.

Options :

1. ✘ 2 mm

2. ✘ 0.5 mm

3. ✘ 1.5 mm

4. ✔ 1 mm

Question Number : 96 Question Id : 34260496 Question Type : MCQ Option Shuffling : Yes

Display Question Number : Yes Is Question Mandatory : No Option Orientation : Vertical

Correct Marks : 1 Wrong Marks : 0

 find my college

Water is pumped steadily out of a flooded basement, at the speed of 10 m/s through a hose (tube) of radius 1 cm, passing through a window 3 m above the water level. The power of the pump is

(Assume $g = 10 \text{ m/s}^2$, density of water = 1000 kg/m^3)

Options :

1. ✓ $80\pi \text{ W}$

2. ✗ $30\pi \text{ W}$

3. ✗ $50\pi \text{ W}$

4. ✗ $90\pi \text{ W}$

Question Number : 97 Question Id : 34260497 Question Type : MCQ Option Shuffling : Yes

Display Question Number : Yes Is Question Mandatory : No Option Orientation : Vertical

Correct Marks : 1 Wrong Marks : 0

A U-shaped tube is partially filled with an incompressible liquid of density 1.2 g/cm^3 . Oil which does not mix with the liquid is next poured into left side of the U-tube until the liquid rises by 15 cm on the right side of U-tube. If the density of the oil is 0.9 g/cm^3 , the oil level will stand higher than the liquid level of right side of U-tube by

Options :

✗ 15 cm

✓

1.

10 cm

2.

 find my college

3. ✘ 12 cm

4. ✘ 9 cm

Question Number : 98 Question Id : 34260498 Question Type : MCQ Option Shuffling : Yes Display Question Number : Yes Is Question Mandatory : No Option Orientation : Vertical Correct Marks : 1 Wrong Marks : 0

The ratio of linear expansivity to the co-efficient of a real expansion of a rectangular sheet of a solid is

Options :

1. ✘ 2

2. ✔ 0.5

3. ✘ 1

4. ✘ 1.5

Question Number : 99 Question Id : 34260499 Question Type : MCQ Option Shuffling : Yes

Display Question Number : Yes Is Question Mandatory : No Option Orientation : Vertical

Correct Marks : 1 Wrong Marks : 0



Two rods whose lengths are l_1 and l_2 with heat conductivity co-efficients k_1 and k_2 are placed end to end. The heat conductivity coefficient of a uniform rod of length $l_1 + l_2$ whose conductivity is same as that of the system of these two rods is

Options :

1. ✓
$$\frac{(l_1 + l_2)k_1k_2}{k_2 l_1 + k_1 l_2}$$

2. ✗
$$\frac{(l_1 + l_2)k_1k_2}{k_1 l_1 + k_2 l_2}$$

3. ✗
$$\frac{k_1 l_1 + k_2 l_2}{(l_1 + l_2)k_1 k_2}$$

4. ✗
$$\frac{k_1 l_2 + k_2 l_1}{(l_1 + l_2)k_1 k_2}$$

Question Number : 100 Question Id : 342604100 Question Type : MCQ Option Shuffling : Yes

Display Question Number : Yes Is Question Mandatory : No Option Orientation : Vertical

Correct Marks : 1 Wrong Marks : 0

Consider a two stage Carnot engine. In the first stage heat Q_1 is absorbed at temperature T and heat Q_2 is expelled at temperature αT (where $\alpha < 1$). In the second stage heat Q_2 is absorbed at temperature αT and heat Q_3 is expelled at temperature βT ($\beta < \alpha$). The efficiency of the Carnot engine will be

Options :

1. ✘ $1 - \alpha - \beta$
2. ✘ $1 - \alpha$
3. ✔ $1 - \beta$
4. ✘ $1 - \alpha\beta$

Question Number : 101 Question Id : 342604101 Question Type : MCQ Option Shuffling : Yes
Display Question Number : Yes Is Question Mandatory : No Option Orientation : Vertical
Correct Marks : 1 Wrong Marks : 0

A diatomic gas of volume 2 m^3 at a pressure $2 \times 10^5 \text{ N/m}^2$ is compressed adiabatically to a volume 0.5 m^3 . The work done in this process is.

[Use $4^{1.4} = 6.96$]

Options :

✘ $2.96 \times 10^5 \text{ J}$

✘

1.

2.

 find my college

$$- 2.96 \times 10^5 \text{ J}$$

3. ✓ $- 7.4 \times 10^5 \text{ J}$

4. ✗ $7.4 \times 10^5 \text{ J}$

Question Number : 102 Question Id : 342604102 Question Type : MCQ Option Shuffling : Yes

Display Question Number : Yes Is Question Mandatory : No Option Orientation : Vertical

Correct Marks : 1 Wrong Marks : 0

As per kinetic theory of gases which of the following statements is / are true?

- a) Temperature of a gas is a measure of average kinetic energy of a molecule
- b) Temperature of a gas depends on the nature of the gas
- c) Heavier molecule has lower average speed
- d) Lighter molecule has lower average speed

Options :

1. ✗ a & b are true

2. ✗ b & c are true

3. ✓ a & c are true

✗

b & d are true

4.

 find my college

Question Number : 103 Question Id : 342604103 Question Type : MCQ Option Shuffling : Yes Display Question Number : Yes Is Question Mandatory : No Option Orientation : Vertical Correct Marks : 1 Wrong Marks : 0

A wave is represented by the equation $y = (0.02 \text{ m})\sin(5\pi x - 20t)$. The minimum distance between the two particles always having the same speed is. (Assume x and t are in SI units)

Options :

1. ✘ 0.02 m

2. ✘ 0.4 m

3. ✘ 0.8 m

4. ✔ 0.2 m

Question Number : 104 Question Id : 342604104 Question Type : MCQ Option Shuffling : Yes Display Question Number : Yes Is Question Mandatory : No Option Orientation : Vertical Correct Marks : 1 Wrong Marks : 0

A screen is placed 90 cm from an object. The image is formed by using a convex lens twice on the screen by putting the lens at two different locations separated by 20 cm. The focal length of the lens is approximately equal to

Options :

1. 21.38 cm

find my college

2. ✘ 30.0 cm

3. ✘ 35.0 cm

4. ✘ 24 cm

Question Number : 105 Question Id : 342604105 Question Type : MCQ Option Shuffling : Yes Display Question Number : Yes Is Question Mandatory : No Option Orientation : Vertical Correct Marks : 1 Wrong Marks : 0

What would be the angular separation between the consecutive bright fringes in Young's double slit experiment with blue green light of wavelength 400 nm? The separation between the slits is 0.001 m.

Options :

1. ✔ 4×10^{-4} rad

2. ✘ 3×10^{-4} rad

3. ✘ 2×10^{-4} rad

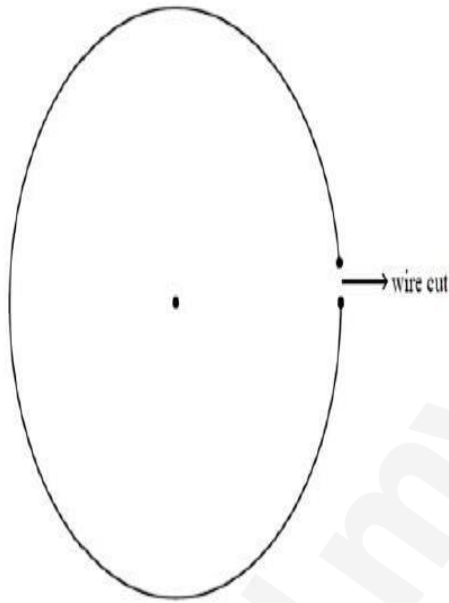
✘

4.

 $1 \times 10^{-4} \text{ rad}$  find my college

A circular wire loop of radius 10 cm carries a total charge of 10^{-5} C distributed uniformly over its length. A small length of 3.14×10^{-6} m of wire is cut off. The magnitude of electric field at the center due to the remaining wire is

(Assume $\frac{1}{4\pi\epsilon_0} = 9 \times 10^9$ SI units)



Options :

1.

2.

3.

4.

find my college

✘ 30 N/C

✘ 40 N/C

✘ 35 N/C

✔ 45 N/C

Question Number : 107 Question Id : 342604107 Question Type : MCQ Option Shuffling : Yes Display Question Number : Yes Is Question Mandatory : No Option Orientation : Vertical Correct Marks : 1 Wrong Marks : 0

Consider the charged cylindrical capacitor. The magnitude of electric field \vec{E} in its annular region

Options :

1. ✓ Varies as $\frac{1}{r}$, where r is the distance from its axis

2. ✗ Zero

3. ✗ Is same throughout and $|\vec{E}| > 0$

4. ✗ Varies as $\frac{1}{r^2}$, where r is the distance from its axis

Question Number : 108 Question Id : 342604108 Question Type : MCQ Option Shuffling : Yes Display Question Number : Yes Is Question Mandatory : No Option Orientation : Vertical Correct Marks : 1 Wrong Marks : 0

A spherical capacitor consists of two concentric spherical conductors. Find the capacitance of the spherical capacitor if the outer radius is $2R$ and the inner radius is R .

Options :

 find my college

1. ✘ $4\pi\epsilon_0 R$

2. ✔ $8\pi\epsilon_0 R$

3. ✘ $\frac{8\pi\epsilon_0}{R}$

4. ✘ $\frac{4\pi\epsilon_0}{R}$

Question Number : 109 Question Id : 342604109 Question Type : MCQ Option Shuffling : Yes
 Display Question Number : Yes Is Question Mandatory : No Option Orientation : Vertical
 Correct Marks : 1 Wrong Marks : 0

A wire of length l carries a current I along the X- axis. The magnetic force acting on the wire is given by $\vec{F} = IB_0 L (\hat{k} - \hat{j})$ T where B_0 is a constant. The existing magnetic field

\vec{B} is

Options :

1. ✘ $B_0 (\hat{i})$

$$B_0(\hat{i} + \hat{j} - \hat{k})$$

2.

 find my college

3. ✓ $B_0 (\hat{i} + \hat{j} + \hat{k})$

4. ✗ $B_0 (\hat{i} - \hat{j} - \hat{k})$

Question Number : 110 Question Id : 342604110 Question Type : MCQ Option Shuffling : Yes Display Question Number : Yes Is Question Mandatory : No Option Orientation : Vertical Correct Marks : 1 Wrong Marks : 0

Two long wires with no contact are placed perpendicular to each other. i_1 and i_2 are currents flowing through these wires respectively. The magnetic force on a small length ' dl ' of the second wire situated at a distance ' l ' from first wire is proportional to

Options :

1. ✓ $i_1 i_2$

2. ✗ l

3. ✗ $\frac{1}{i_1 i_2}$

✗ l^2

4.

 find my college

Question Number : 111 Question Id : 342604111 Question Type : MCQ Option Shuffling : Yes

Display Question Number : Yes Is Question Mandatory : No Option Orientation : Vertical

Correct Marks : 1 Wrong Marks : 0

A solenoid has a core of a material with relative permeability 501. The windings of the solenoid are insulated from the core and carry a current of 2.5 A. If the number of turns are 900 per metre. The magnetization in A/m is

Options :

1. ✓ 1.125×10^6
2. ✗ 2.8×10^6
3. ✗ 2.25×10^6
4. ✗ 1.69×10^6

Question Number : 112 Question Id : 342604112 Question Type : MCQ Option Shuffling : Yes

Display Question Number : Yes Is Question Mandatory : No Option Orientation : Vertical

Correct Marks : 1 Wrong Marks : 0

A long straight solenoid with cross sectional radius 'a' and number of turns per unit length 'n' has a current varying with time as $I(As^{-1})$. The magnitude of the electric field as a function of distance 'r' from the solenoid axis is

Options :



$$\frac{n\mu_0 a^2 I}{2r}$$

1.

 find my college

2. ✘ $\frac{\mu_0 I n}{2a}$

3. ✘ $\frac{n a^2 I}{2 \mu_0 r}$

4. ✘ $\frac{\mu_0 I a}{2n}$

Question Number : 113 Question Id : 342604113 Question Type : MCQ Option Shuffling : Yes Display Question Number : Yes Is Question Mandatory : No Option Orientation : Vertical Correct Marks : 1 Wrong Marks : 0

An alternating current is given by $i = 2 \sin \omega t + 6 \cos \omega t$. The rms current in amperes is

Options :

1. ✔ $2\sqrt{5}$

2. ✘ $2\sqrt{10}$

✘

✘

3.

$$\sqrt{5}$$

4.

$$10\sqrt{2}$$

 find my college

Question Number : 114 Question Id : 342604114 Question Type : MCQ Option Shuffling : Yes

Display Question Number : Yes Is Question Mandatory : No Option Orientation : Vertical

Correct Marks : 1 Wrong Marks : 0

For an EM Wave, the electric and magnetic fields are 300 V/m and 7.9 A/m respectively.
The maximum rate of energy flow is

Options :

1. ✘ $2730 \frac{\text{watt}}{\text{m}^2}$

2. ✘ $2790 \frac{\text{watt}}{\text{m}^2}$

3. ✔ $2370 \frac{\text{watt}}{\text{m}^2}$

4. ✘ $2390 \frac{\text{watt}}{\text{m}^2}$

Question Number : 115 Question Id : 342604115 Question Type : MCQ Option Shuffling : Yes

Display Question Number : Yes Is Question Mandatory : No Option Orientation : Vertical

Correct Marks : 1 Wrong Marks : 0

Which of the following particle has the shortest de-Broglie wavelength?



Options :

1. ✘ Proton
2. ✘ Electron
3. ✔ α – particle
4. ✘ X – rays

Question Number : 116 Question Id : 342604116 Question Type : MCQ Option Shuffling : Yes
Display Question Number : Yes Is Question Mandatory : No Option Orientation : Vertical
Correct Marks : 1 Wrong Marks : 0

Hydrogen atom in the ground state absorbs ΔE amount of energy. If the orbital angular momentum of the electron is increased by $\frac{h}{2\pi}$ ($h \equiv$ Plank constant), then the magnitude of ΔE is

Options :

1. ✘ 12.09 eV
2. ✘ 12.75 eV



3. 10.2 eV

 find my college

13.6 eV

4. ✘

Question Number : 117 Question Id : 342604117 Question Type : MCQ Option Shuffling : Yes Display Question Number : Yes Is Question Mandatory : No Option Orientation : Vertical Correct Marks : 1 Wrong Marks : 0

In a nuclear reactor, the main purpose of the moderator is to

Options :

1. ✘ Initiate the fission process by giving away its neutron
2. ✔ Slow down the fast neutrons
3. ✘ Cool down the excess of heat generated in the reactor
4. ✘ Absorb excess of neutrons and control the reaction rate

Question Number : 118 Question Id : 342604118 Question Type : MCQ Option Shuffling : Yes Display Question Number : Yes Is Question Mandatory : No Option Orientation : Vertical Correct Marks : 1 Wrong Marks : 0

If the temperature of the semi-conductor is increased, which of the following is correct statement?

Options :

1.

 find my college

It's resistance increases

2. ✘ The number of electrons in valence band increases

3. ✔ The number of electrons in conduction band increases

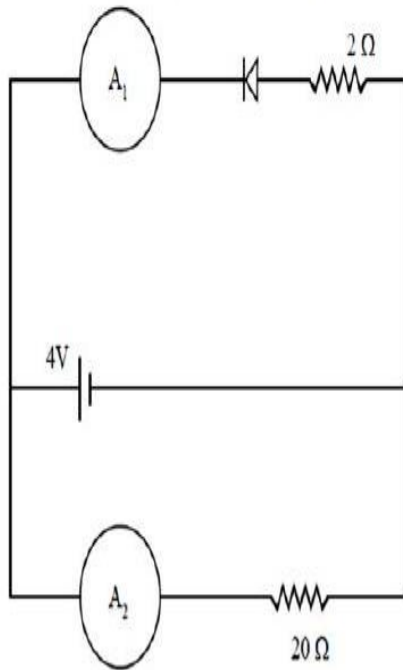
4. ✘ The number of holes in valence band decreases

Question Number : 119 Question Id : 342604119 Question Type : MCQ Option Shuffling : Yes

Display Question Number : Yes Is Question Mandatory : No Option Orientation : Vertical

Correct Marks : 1 Wrong Marks : 0

Two ammeters A_1 and A_2 are connected as shown in the given figure. By neglecting the internal resistance of the ammeters, the reading in the meter A_1 is



Options :

1.

2 A

2. ✓ 0 A

3. ✗ 1 A

4. ✗ 4 A

Question Number : 120 Question Id : 342604120 Question Type : MCQ Option Shuffling : Yes Display Question Number : Yes Is Question Mandatory : No Option Orientation : Vertical Correct Marks : 1 Wrong Marks : 0

A message signal of frequency f_m is used to modulate a carrier of frequency f_c . If the side bands are f_1 and f_2 then the ratio $\frac{f_c}{f_m}$ is

Options :

1. ✓ $\left| \frac{f_1 + f_2}{f_2 - f_1} \right|$

✗ $\frac{(f_1 + f_2)^2}{f_1 f_2}$

✗

✗

2.

3.



$$\left| \frac{f_1 - f_2}{f_2 + f_1} \right|$$

4.

Chemistry

Section Id :	3426043
Section Number :	3
Section type :	Online
Mandatory or Optional :	Mandatory
Number of Questions :	40
Number of Questions to be attempted :	40
Section Marks :	40
Enable Mark as Answered Mark for Review and Clear Response :	Yes
Sub-Section Number :	1
Sub-Section Id :	3426043
Question Shuffling Allowed :	Yes

Question Number : 121 Question Id : 342604121 Question Type : MCQ Option Shuffling : Yes

Display Question Number : Yes Is Question Mandatory : No Option Orientation : Vertical

Correct Marks : 1 Wrong Marks : 0

Heisenberg's uncertainty principle is in general significant to

$$\frac{f_1 f_2}{(f_1 + f_2)^2}$$

✘

find my college

Options :

1. ✘ planets
2. ✘ cricket ball of 500 g
3. ✘ cars
4. ✔ micro particles having a very high speed

Question Number : 122 Question Id : 342604122 Question Type : MCQ Option Shuffling : Yes

Display Question Number : Yes Is Question Mandatory : No Option Orientation : Vertical

Correct Marks : 1 Wrong Marks : 0

Which of the following relations is correct, if the wavelength (λ) is equal to the distance travelled by the electron in one second?

h is the planck's constant and m is the mass of electron

Options :

1. ✘ $\lambda = h/p$
2. ✘ $\lambda = h/m$

✘

$$\lambda = \sqrt{h/p}$$

3.

 find my college

$$\lambda = \sqrt{h/m}$$

4. ✓

Question Number : 123 Question Id : 342604123 Question Type : MCQ Option Shuffling : Yes Display Question Number : Yes Is Question Mandatory : No Option Orientation : Vertical Correct Marks : 1 Wrong Marks : 0

The set of amphoteric oxides among the given oxides are
 Ga_2O_3 , As_4O_{10} , Sb_4O_{10} , B_2O_3 , Tl_2O

Options :

1. ✗ Tl_2O , B_2O_3

2. ✗ Sb_4O_{10} , B_2O_3 , Ga_2O_3

3. ✗ Ga_2O_3 , Tl_2O , As_4O_{10}

4. ✓ Ga_2O_3 , As_4O_{10} , Sb_4O_{10}

Question Number : 124 Question Id : 342604124 Question Type : MCQ Option Shuffling : Yes Display Question Number : Yes Is Question Mandatory : No Option Orientation : Vertical Correct Marks : 1 Wrong Marks : 0

The first ionisation energies (in kJ mol^{-1}) of four consecutive elements of the second period are given in the options. The first ionisation energy of nitrogen is

 find my college

Options :

1. ✘ 1086
2. ✔ 1402
3. ✘ 1681
4. ✘ 1314

Question Number : 125 Question Id : 342604125 Question Type : MCQ Option Shuffling : Yes
Display Question Number : Yes Is Question Mandatory : No Option Orientation : Vertical
Correct Marks : 1 Wrong Marks : 0

Highest covalent character is found in which of the following?

Options :

1. ✘ CaF_2
2. ✘ CaCl_2
- ✘ CaBr_2
- ✔ CaI_2

3.

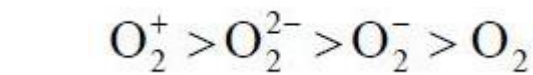
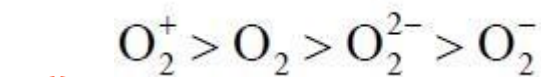
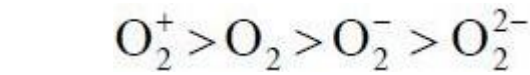
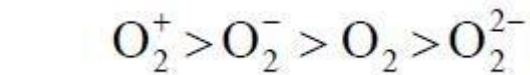
4.

 find my college

Question Number : 126 Question Id : 342604126 Question Type : MCQ Option Shuffling : Yes
Display Question Number : Yes Is Question Mandatory : No Option Orientation : Vertical
Correct Marks : 1 Wrong Marks : 0

The correct sequence of bond order is

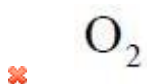
Options :



Question Number : 127 Question Id : 342604127 Question Type : MCQ Option Shuffling : Yes
Display Question Number : Yes Is Question Mandatory : No Option Orientation : Vertical
Correct Marks : 1 Wrong Marks : 0

The most probable velocity of a gas at 7200 K is equal to the RMS velocity of He gas at 27 °C. The gas is

Options :



✘

1.

2.

 find my college

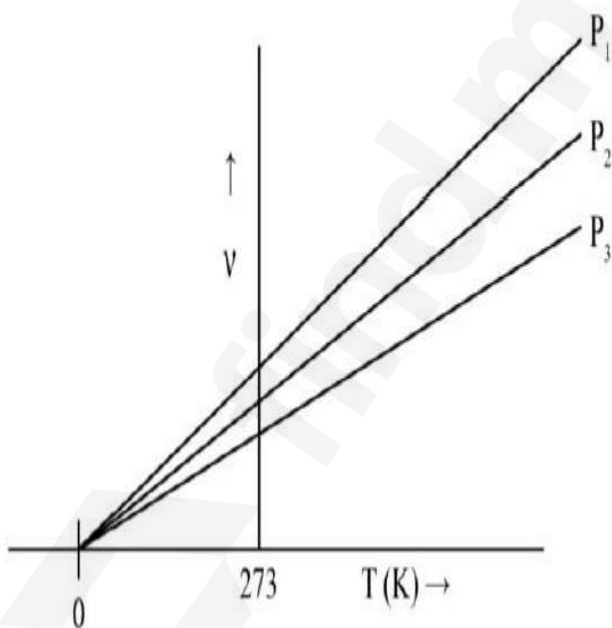
CO

3. ✘ N_2

4. ✔ SO_2

Question Number : 128 Question Id : 342604128 Question Type : MCQ Option Shuffling : Yes Display Question Number : Yes Is Question Mandatory : No Option Orientation : Vertical Correct Marks : 1 Wrong Marks : 0

A plot of volume of the gas Versus T (K) is shown below. Which of the options is correct for the plot?



Options :

✔ $P_1 < P_2 < P_3$

✘

1.

2.

 find my college

$$P_3 < P_2 < P_1$$

3. ✘ $P_1 = P_2 \neq P_3$

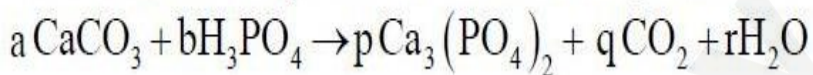
4. ✘ $P_1 = P_2 = P_3 = 0$ at 273 K

Question Number : 129 Question Id : 342604129 Question Type : MCQ Option Shuffling : Yes

Display Question Number : Yes Is Question Mandatory : No Option Orientation : Vertical

Correct Marks : 1 Wrong Marks : 0

In the balanced equation of the following reaction, the ratio of a/b is a



Options :

1. ✘ $2/3$

2. ✔ $3/2$

3. ✘ $1/2$

4. $7/5$

Question Number : 130 Question Id : 342604130 Question Type : MCQ Option Shuffling : Yes

Display Question Number : Yes Is Question Mandatory : No Option Orientation : Vertical

 find my college

Correct Marks : 1 Wrong Marks : 0

The number of grams of oxygen in 32.2 g of $\text{Na}_2\text{SO}_4 \cdot 10\text{H}_2\text{O}$ is approximately

Options :

1. ✘ 32.2 g

2. ✔ 22.4 g

3. ✘ 11.2 g

4. ✘ 64.4 g

Question Number : 131 Question Id : 342604131 Question Type : MCQ Option Shuffling : Yes

Display Question Number : Yes Is Question Mandatory : No Option Orientation : Vertical

Correct Marks : 1 Wrong Marks : 0

Enthalpy of hydrogenation of one mole of benzene to cyclohexane is

[Resonance energy of benzene = -150.4 kJ/mole.

Enthalpy of hydrogenation of cyclohexene = -119.5 kJ/mole]

Options :

1. ✔ -208.1 kJ/mole

✘ -358.1 kJ/mole

2.

 find my college

3. ✖ +150.4 kJ/mole

4. ✖ - 269.9 kJ/mole

Question Number : 132 Question Id : 342604132 Question Type : MCQ Option Shuffling : Yes

Display Question Number : Yes Is Question Mandatory : No Option Orientation : Vertical

Correct Marks : 1 Wrong Marks : 0

Match the following

List-1 Acid	List-2 Ka (ionization constant)
A) HCN	I) 6.8×10^{-4}
B) $\text{H}_2\text{C}_2\text{O}_4$	II) 8.9×10^{-8}
C) H_2S	III) 4.9×10^{-10}
D) Niacin	IV) 5.6×10^{-2}
	V) 1.5×10^{-5}

The correct match is

Options :

✖

✖

A	B	C	D
I	III	IV	V

1.

2.

 find my college

A	B	C	D
V	II	III	IV

3. ✘

A	B	C	D
II	III	IV	V

4. ✔

A	B	C	D
III	IV	II	V

Question Number : 133 Question Id : 342604133 Question Type : MCQ Option Shuffling : Yes Display Question Number : Yes Is Question Mandatory : No Option Orientation : Vertical Correct Marks : 1 Wrong Marks : 0

If the molar concentrations of base and its conjugate acid are same, then pOH of the buffer solution is

Options :

1. ✔

same as pK_b of base

2. ✘

same as pK_a of base

✘

same as pK_a of acid

✘

3.

4.

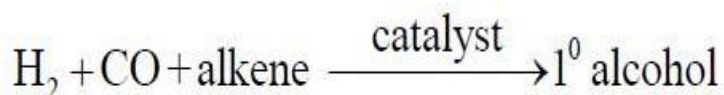
 find my college

same as pK_b of acid

Question Number : 134 Question Id : 342604134 Question Type : MCQ Option Shuffling : Yes

Display Question Number : Yes Is Question Mandatory : No Option Orientation : Vertical

Correct Marks : 1 Wrong Marks : 0



What is the stable intermediate and the nature of the reaction?

Options :

1. ✘ acid, reduction
2. ✘ aldehyde, oxidation
3. ✔ aldehyde, reduction
4. ✘ alcohol, oxidation

Question Number : 135 Question Id : 342604135 Question Type : MCQ Option Shuffling : Yes

Display Question Number : Yes Is Question Mandatory : No Option Orientation : Vertical

Correct Marks : 1 Wrong Marks : 0

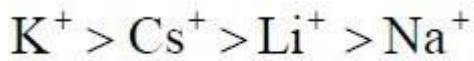
 find my college

The correct order of electrical conductivity of alkali metals ions in their aqueous solution for Cs^+ , K^+ , Na^+ and Li^+ is

Options :



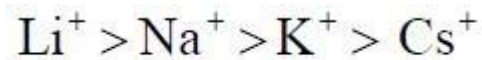
1. ✓



2. ✗



3. ✗



4. ✗

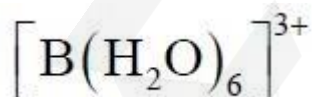
Question Number : 136 Question Id : 342604136 Question Type : MCQ Option Shuffling : Yes

Display Question Number : Yes Is Question Mandatory : No Option Orientation : Vertical

Correct Marks : 1 Wrong Marks : 0

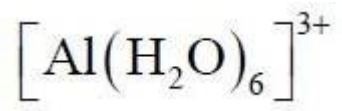
Which of the following complex ions does not exist?

Options :



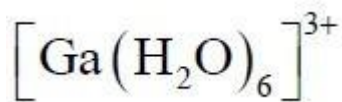
1. ✓

✗

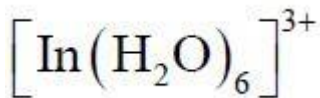


2.

 find my college



3. ✖



4. ✖

Question Number : 137 Question Id : 342604137 Question Type : MCQ Option Shuffling : Yes

Display Question Number : Yes Is Question Mandatory : No Option Orientation : Vertical

Correct Marks : 1 Wrong Marks : 0

Which of the following statements are correct?

- a) The isotope of carbon containing 7 neutrons has natural abundance of 1.1 %
- b) Among the IVA group elements, Sn has the lowest melting point
- c) Silicon is the 2nd (by mass) most abundant element in the earth's crust
- d) Elemental carbon shows the highest electrical resistivity among the 14 group elements

Options :

a, c and d only

1. ✖

a, b and c only

2. ✖

b, c and d only

3. ✖



a, b, c and d

4.

 find my college

Question Number : 138 Question Id : 342604138 Question Type : MCQ Option Shuffling : Yes
Display Question Number : Yes Is Question Mandatory : No Option Orientation : Vertical
Correct Marks : 1 Wrong Marks : 0

Which of the following chemicals can be used as dry cleaning agents?

- a) $\text{Cl}_2\text{C}=\text{CCl}_2$
- b) $\text{CO}_2(\text{liq})$
- c) H_2O_2
- d) CH_3CHO

Options :

- 1. ✘ a, b, c and d
- 2. ✔ a, b and c only
- 3. ✘ b, c and d only
- 4. ✘ a and b only

Question Number : 139 Question Id : 342604139 Question Type : MCQ Option Shuffling : Yes
Display Question Number : Yes Is Question Mandatory : No Option Orientation : Vertical
Correct Marks : 1 Wrong Marks : 0

The number of sp and sp^2 carbon in Hepta-1, 3-dien-5-yne, respectively, are

Options :

 find my college

1. ✓ 2, 4

2. ✗ 4, 3

3. ✗ 2, 2

4. ✗ 2, 5

Question Number : 140 Question Id : 342604140 Question Type : MCQ Option Shuffling : Yes

Display Question Number : Yes Is Question Mandatory : No Option Orientation : Vertical

Correct Marks : 1 Wrong Marks : 0

When propyne is passed through a red hot iron tube at 873 K, the reaction gives product having molecular formula of

Options :

1. ✗ C_7H_8

2. ✓ C_9H_{12}

✗ C_8H_{10}

✗ C_6H_6

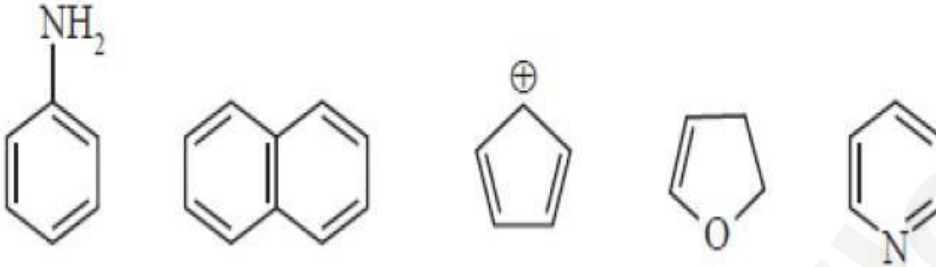
3.

4.

 find my college

Question Number : 141 Question Id : 342604141 Question Type : MCQ Option Shuffling : Yes
 Display Question Number : Yes Is Question Mandatory : No Option Orientation : Vertical
 Correct Marks : 1 Wrong Marks : 0

Total number of aromatic compounds from below is



Options :

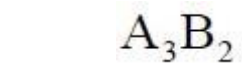
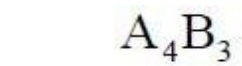
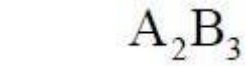
- 1. ✘ 2
- 2. ✔ 3
- 3. ✘ 4
- 4. ✘ 5

Question Number : 142 Question Id : 342604142 Question Type : MCQ Option Shuffling : Yes
Display Question Number : Yes Is Question Mandatory : No Option Orientation : Vertical
Correct Marks : 1 Wrong Marks : 0



A compound made up of elements A and B (with a general formula $A_x B_y$), where B form a hcp lattice and A occupy $2/3^{\text{rd}}$ of the tetrahedral voids. The formula of the compound is

Options :



Question Number : 143 Question Id : 342604143 Question Type : MCQ Option Shuffling : Yes

Display Question Number : Yes Is Question Mandatory : No Option Orientation : Vertical

Correct Marks : 1 Wrong Marks : 0

If the density of a 2 M solution of ethylene glycol in water is 1.11 g/ml, the molality (in 'm') of the solution is approximately

Options :

1. ✘ 1.92

✘ 1.57

2.

 find my college

3. ✓ 2.05

4. ✗ 2.15

Question Number : 144 Question Id : 342604144 Question Type : MCQ Option Shuffling : Yes

Display Question Number : Yes Is Question Mandatory : No Option Orientation : Vertical

Correct Marks : 1 Wrong Marks : 0

Given

Sol A: Phenol and aniline

Sol B : Chloroform and acetone

Which of following is correct as per Raoult's law?

Options :

1. ✗ Sol A shows -ve and B shows +ve deviation

2. ✓ Both solutions A and B show -ve deviation

3. ✗ Sol A shows +ve and B shows -ve deviation

4.

Question Number : 145 Question Id : 342604145 Question Type : MCQ Option Shuffling : Yes



Display Question Number : Yes Is Question Mandatory : No Option Orientation : Vertical

Correct Marks : 1 Wrong Marks : 0

Salts of A (atomic weight 8), B (atomic weight 18) and C (atomic weight 50) were electrolysed under identical conditions using the same quantity of electricity. It was found that 2.4 g of A was deposited, the weight of B and C deposited are 1.8 g and 7.5 g respectively. The valences of A, B and C are, respectively,

Options :

1. ✘ 3, 1 and 2

2. ✘ 1, 2 and 3

3. ✔ 1, 3 and 2

4. ✘ 3, 2 and 1

Question Number : 146 Question Id : 342604146 Question Type : MCQ Option Shuffling : Yes

Display Question Number : Yes Is Question Mandatory : No Option Orientation : Vertical

Correct Marks : 1 Wrong Marks : 0



What will be the overall order of a reaction for which the rate expression is given as

$$\text{Rate} = K[A]^{\frac{1}{2}}[B]^{\frac{3}{2}}$$

Options :

second order

1.

find my college

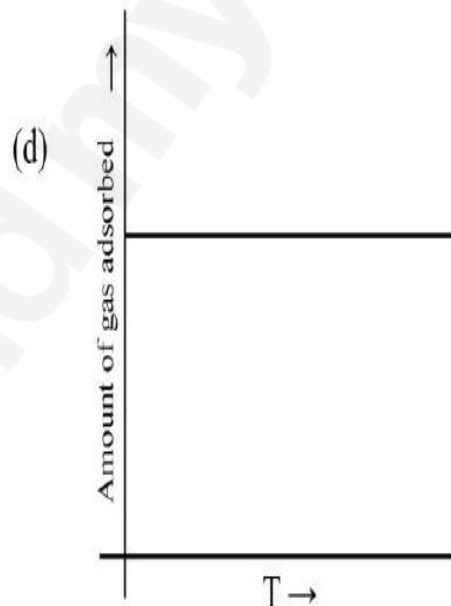
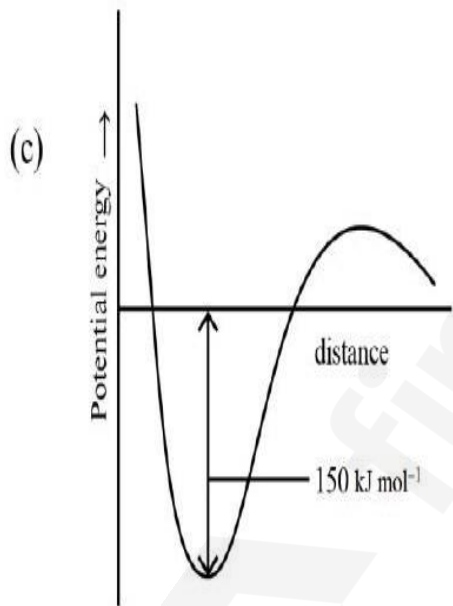
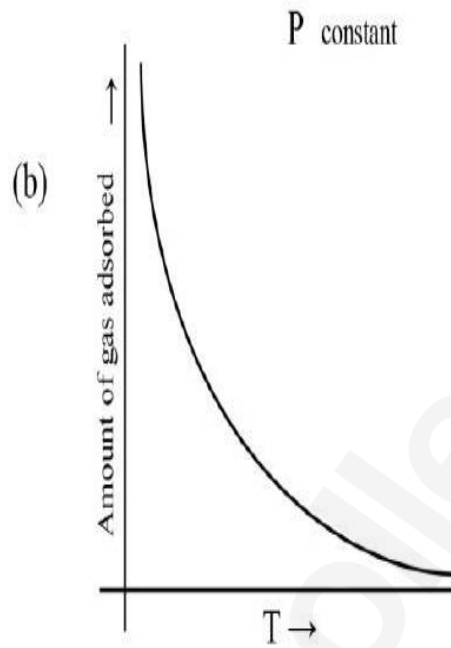
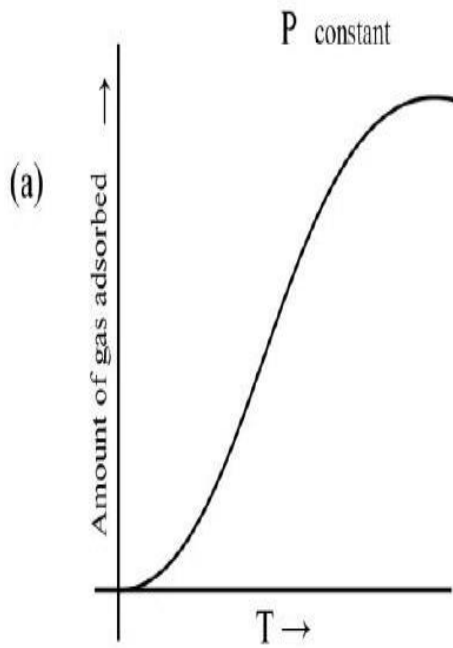
2. ✘ first order

3. ✘ zero order

4. ✘ third order

**Question Number : 147 Question Id : 342604147 Question Type : MCQ Option Shuffling : Yes
Display Question Number : Yes Is Question Mandatory : No Option Orientation : Vertical
Correct Marks : 1 Wrong Marks : 0**

Which of the following options are correct?



Options :

a and c represent physisorption

1. ✘

a and d represent physisorption

2. ✖



a and c represent chemisorption

3. ✓

b and c represent chemisorption

4. ✗

Question Number : 148 Question Id : 342604148 Question Type : MCQ Option Shuffling : Yes Display Question Number : Yes Is Question Mandatory : No Option Orientation : Vertical Correct Marks : 1 Wrong Marks : 0

The main products formed when copper metal is reacted with concentrated HNO_3 are

Options :

1. ✗ $\text{Cu}(\text{NO}_3)_2 ; \text{NO}$

2. ✗ $\text{Cu}(\text{NO}_3)_2 ; \text{H}_2$

3. ✓ $\text{Cu}(\text{NO}_3)_2 ; \text{NO}_2$

4. ✗ $\text{Cu}(\text{NO}_3) ; \text{NO}$

Question Number : 149 Question Id : 342604149 Question Type : MCQ Option Shuffling : Yes

Display Question Number : Yes Is Question Mandatory : No Option Orientation : Vertical

Correct Marks : 1 Wrong Marks : 0



Assertion (A) : SF_6 is highly stable

Reason (R) : SF_6 is a gas

The correct option among the following is

Options :

1. ✘ (A) is true, (R) is true and (R) is the correct explanation for (A)
2. ✔ (A) is true, (R) is true but (R) is not the correct explanation for (A)
3. ✘ (A) is true but (R) is false
4. ✘ (A) is false but (R) is true

Question Number : 150 Question Id : 342604150 Question Type : MCQ Option Shuffling : Yes

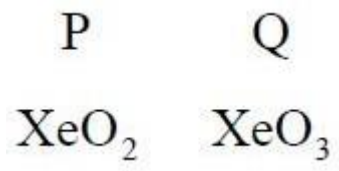
Display Question Number : Yes Is Question Mandatory : No Option Orientation : Vertical

Correct Marks : 1 Wrong Marks : 0

Complete hydrolysis of XeF_4 and XeF_6 gives its oxides P and Q, respectively. Identify P and Q

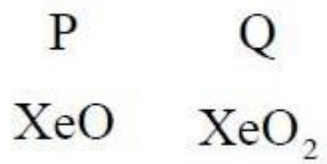
Options :

✘

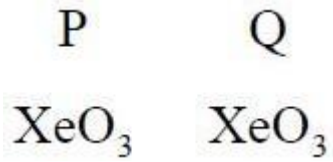


1.

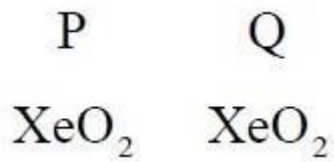
 find my college



2. ✖



3. ✔



4. ✖

Question Number : 151 Question Id : 342604151 Question Type : MCQ Option Shuffling : Yes
Display Question Number : Yes Is Question Mandatory : No Option Orientation : Vertical
Correct Marks : 1 Wrong Marks : 0

Match the following

Column-1
Reaction

Column-2
Main product

- | | |
|---|---|
| A) $4\text{FeCl}_3 + 3\text{K}_4[\text{Fe}(\text{CN})_6] \rightarrow$ | I) $\text{Fe}_4[\text{Fe}(\text{CN})_6]_3$ |
| B) $\text{ZnCl}_2 + 4\text{NaOH} \rightarrow$ | II) FeCl_2 |
| C) $2\text{FeCl}_3 + \text{H}_2\text{S} \rightarrow$ | III) $\text{Zn}(\text{OH})\text{Cl}$ |
| | IV) $\text{Fe}_3[\text{Fe}(\text{CN})_6]_3$ |
| | V) Na_2ZnO_2 |
| | VI) FeS |

The correct match is

Options :

A	B	C
I	III	VI

1.

2.

A	B	C
IV	V	II

3.

A	B	C
IV	III	VI

4.

✘

A	B	C
I	V	II

✔

✘

✘

Question Number : 152 Question Id : 342604152 Question Type : MCQ Option Shuffling : Yes
Display Question Number : Yes Is Question Mandatory : No Option Orientation : Vertical
Correct Marks : 1 Wrong Marks : 0

The oxidation number of central metal in $[\text{Pt}(\text{NH}_3)_2\text{Cl}(\text{NO}_2)]$ and $[\text{CoCl}_2(\text{en})_2]^{\oplus}$, respectively, are

Options :

1. ✘ +2 ; +1

2. ✘ +2 ; +2

3. ✔ +2 ; +3

4. ✘ +3 ; +2

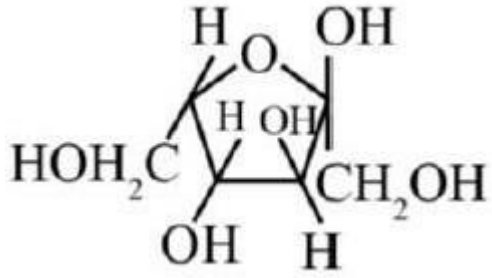
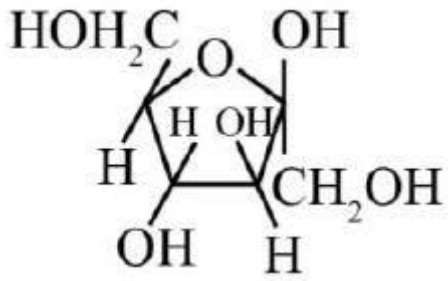
Question Number : 153 Question Id : 342604153 Question Type : MCQ Option Shuffling : Yes
Display Question Number : Yes Is Question Mandatory : No Option Orientation : Vertical
Correct Marks : 1 Wrong Marks : 0

The structure of α -D-Fructofuranose is

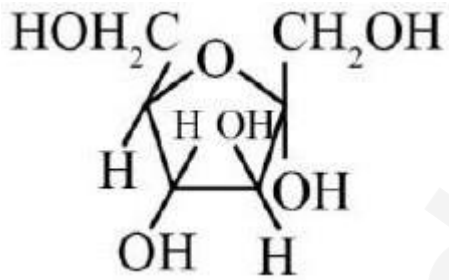
Options :

1.

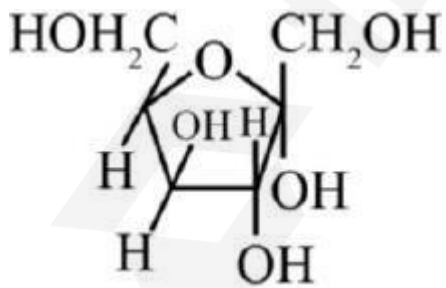
find my college



2. ✖



3. ✔

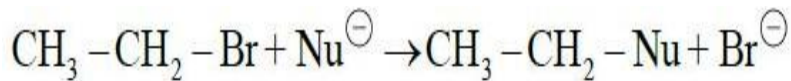


4.

Question Number : 154 Question Id : 342604154 Question Type : MCQ Option Shuffling : Yes

Display Question Number : Yes Is Question Mandatory : No Option Orientation : Vertical

 find my college



The decreasing order of the reaction rate with nucleophile (Nu^\ominus) is



Options :



1. ✓



2. ✗



3. ✗



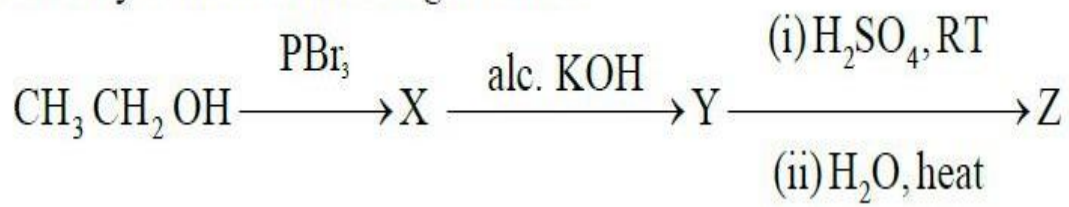
4. ✗

Question Number : 155 Question Id : 342604155 Question Type : MCQ Option Shuffling : Yes

Display Question Number : Yes Is Question Mandatory : No Option Orientation : Vertical

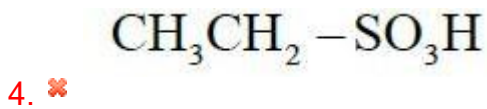
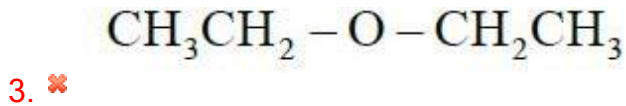
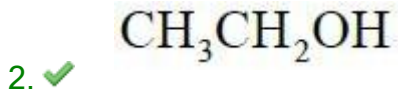
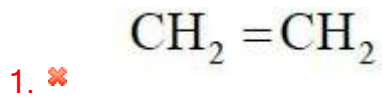
Correct Marks : 1 Wrong Marks : 0

Identity Z in the following reaction



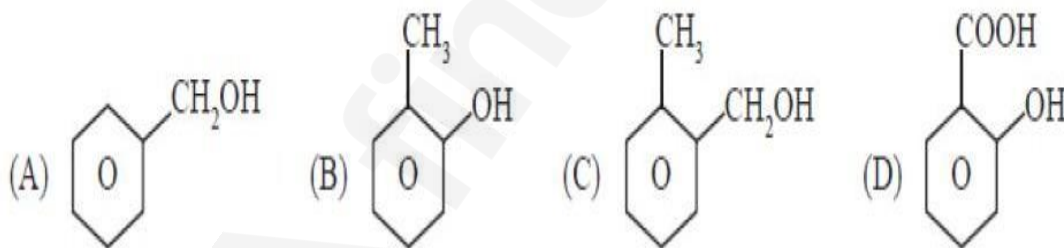
find my college

Options :



Question Number : 156 Question Id : 342604156 Question Type : MCQ Option Shuffling : Yes
 Display Question Number : Yes Is Question Mandatory : No Option Orientation : Vertical
 Correct Marks : 1 Wrong Marks : 0

In which of the following compounds deoxygenation is possible when heated with Zn



Options :

✘

✘

A, B and C

1.

A, C and D

2.

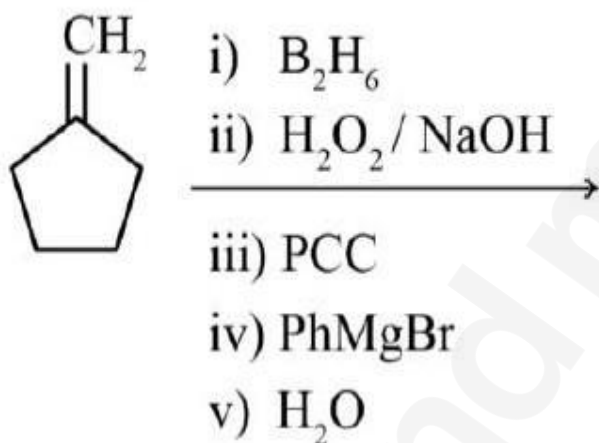
 find my college

3. ✓ B and D

4. ✘ B and C

Question Number : 157 Question Id : 342604157 Question Type : MCQ Option Shuffling : Yes
 Display Question Number : Yes Is Question Mandatory : No Option Orientation : Vertical
 Correct Marks : 1 Wrong Marks : 0

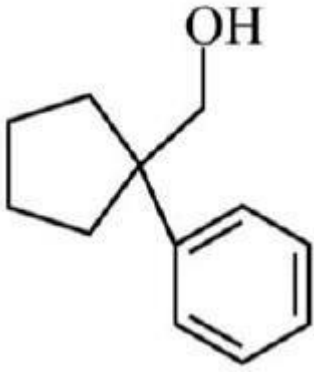
The major product of the following reactions is



Options :

✘

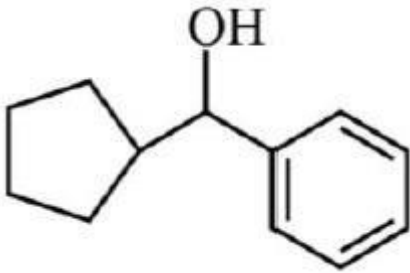
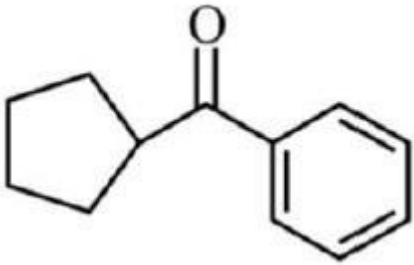
✘



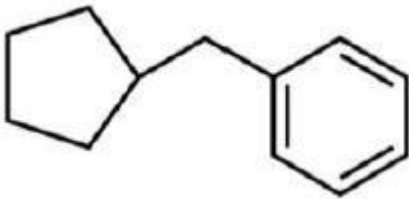
1.

2.

 find my college



3. ✓



4. ✗

Question Number : 158 Question Id : 342604158 Question Type : MCQ Option Shuffling : Yes

Display Question Number : Yes Is Question Mandatory : No Option Orientation : Vertical

Correct Marks : 1 Wrong Marks : 0

Match the following

Column-1

Reaction of carbonyl compound with

Column -2

Product

A) Hydroxylamine

I) Hydrazone

B) Alcohol

II) Schiff's base (Substituted imine)

C) Hydrazine

III) Oxime

D) Amine

IV) Ketal

The correct match is

Options :

1. A B C D
 III IV I II

2. A B C D
 III II I IV

3. A B C D
 I IV III II

A

B

C

D

I

II

III

IV

4.



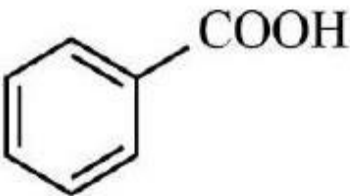
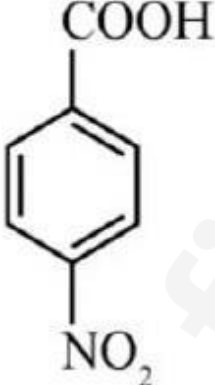
find my college

Question Number : 159 Question Id : 342604159 Question Type : MCQ Option Shuffling : Yes

Display Question Number : Yes Is Question Mandatory : No Option Orientation : Vertical

Correct Marks : 1 Wrong Marks : 0

Match the following

Column-1 Acid	Column-2 pKa value
A) CH_3COOH	I) 0.23
B) F_3CCOOH	II) 3.41
C) 	III) 4.19
D) 	IV) 4.76

The correct match is

Options :

A	B	C	D
IV	I	III	II

1.

2.

find my college



A	B	C	D
I	IV	II	III

A	B	C	D
IV	I	II	III

3. ✘

A	B	C	D
IV	III	II	I

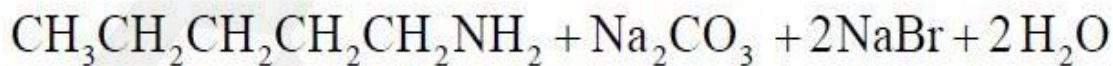
4. ✘

Question Number : 160 Question Id : 342604160 Question Type : MCQ Option Shuffling : Yes
 Display Question Number : Yes Is Question Mandatory : No Option Orientation : Vertical
 Correct Marks : 1 Wrong Marks : 0

Products that are formed in the given reaction including by products are

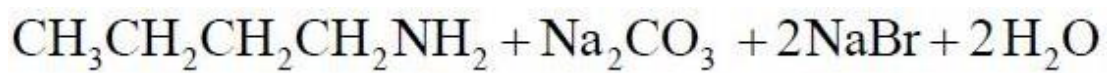


Options :



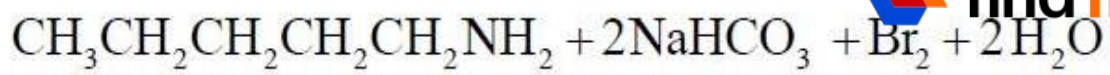
1. ✘



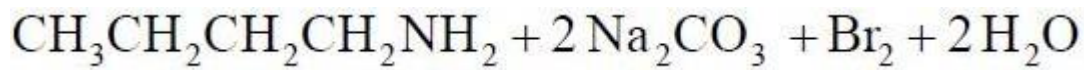


2.

 find my college



3. ✖



4. ✖

 find my college